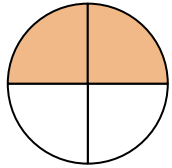
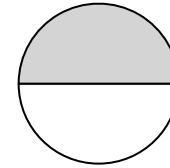


Which describes the shaded amount?



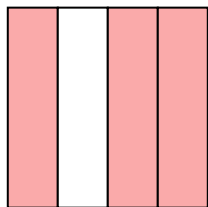
- A. two halves
- B. three-fourths
- C. two quarters

Which describes the shaded amount?



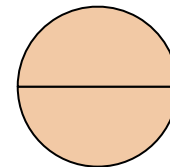
- A. four-fourths
- B. three quarters
- C. one half

Which describes the shaded amount?



- A. four-fourths
- B. three-fourths
- C. two halves

Which describes the shaded amount?



- A. one-fourth
- B. two halves
- C. one half

C

www.CommonCoreSheets.com

1

C

www.CommonCoreSheets.com

2

B

www.CommonCoreSheets.com

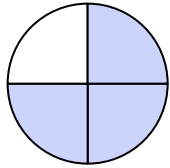
3

B

www.CommonCoreSheets.com

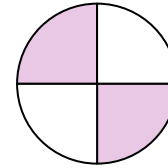
4

Which describes the shaded amount?



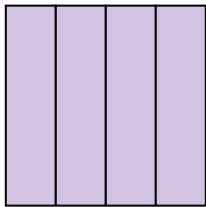
- A. two halves
- B. one half
- C. three quarters

Which describes the shaded amount?



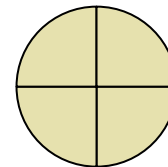
- A. two halves
- B. two-fourths
- C. one-fourth

Which describes the shaded amount?



- A. four-fourths
- B. one half
- C. three-fourths

Which describes the shaded amount?



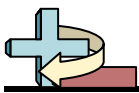
- A. one-fourth
- B. four quarters
- C. two quarters

C

B

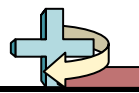
A

B



Name: _____

1. _____
2. _____
3. _____
4. _____
5. _____
6. _____
7. _____
8. _____



Name: _____

1. _____
2. _____
3. _____
4. _____
5. _____
6. _____
7. _____
8. _____



Name: _____

1-8

88

75

63

50

38

25

13

0

1. **C**

2. **C**

3. **B**

4. **B**

5. **C**

6. **B**

7. **A**

8. **B**