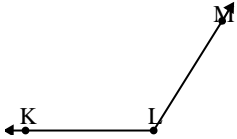




Solve each problem.

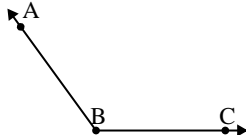
1)



Which choice best represents $\angle KLM$?

- A. 167°
- B. 5°
- C. 122°
- D. 40°

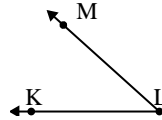
2)



Which choice best represents $\angle ABC$?

- A. 126°
- B. 76°
- C. 1°
- D. 100°

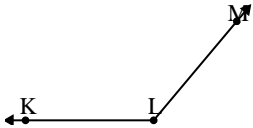
3)



Which choice best represents $\angle KLM$?

- A. 153°
- B. 91°
- C. 42°
- D. 17°

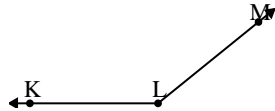
4)



Which choice best represents $\angle KLM$?

- A. 31°
- B. 130°
- C. 158°
- D. 66°

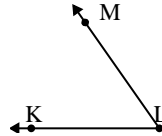
5)



Which choice best represents $\angle KLM$?

- A. 141°
- B. 15°
- C. 70°
- D. 170°

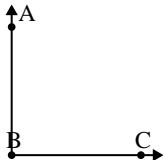
6)



Which choice best represents $\angle KLM$?

- A. 34°
- B. 55°
- C. 110°
- D. 6°

7)



Which choice best represents $\angle ABC$?

- A. 90°
- B. 46°
- C. 1°
- D. 126°

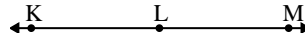
8)



Which choice best represents $\angle ABC$?

- A. 84°
- B. 10°
- C. 165°
- D. 132°

9)



Which choice best represents $\angle KLM$?

- A. 14°
- B. 50°
- C. 105°
- D. 180°

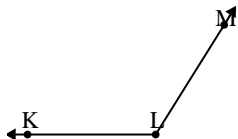
Answers

1. _____
2. _____
3. _____
4. _____
5. _____
6. _____
7. _____
8. _____
9. _____



Solve each problem.

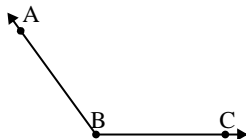
1)



Which choice best represents $\angle KLM$?

- A. 167°
- B. 5°
- C. 122°
- D. 40°

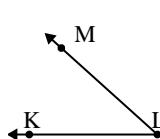
2)



Which choice best represents $\angle ABC$?

- A. 126°
- B. 76°
- C. 1°
- D. 100°

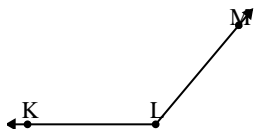
3)



Which choice best represents $\angle KLM$?

- A. 153°
- B. 91°
- C. 42°
- D. 17°

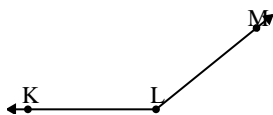
4)



Which choice best represents $\angle KLM$?

- A. 31°
- B. 130°
- C. 158°
- D. 66°

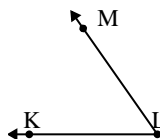
5)



Which choice best represents $\angle KLM$?

- A. 141°
- B. 15°
- C. 70°
- D. 170°

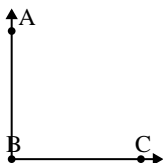
6)



Which choice best represents $\angle KLM$?

- A. 34°
- B. 55°
- C. 110°
- D. 6°


7)



Which choice best represents $\angle ABC$?

- A. 90°
- B. 46°
- C. 1°
- D. 126°

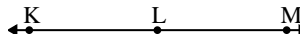
8)



Which choice best represents $\angle ABC$?

- A. 84°
- B. 10°
- C. 165°
- D. 132°

9)



Which choice best represents $\angle KLM$?

- A. 14°
- B. 50°
- C. 105°
- D. 180°

Answers

- 1. **C**
- 2. **A**
- 3. **C**
- 4. **B**
- 5. **A**
- 6. **B**
- 7. **A**
- 8. **B**
- 9. **D**