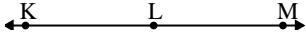




Solve each problem.

Answers

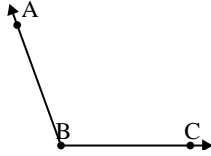
1)



Which choice best represents $\angle KLM$?

- A. 180°
- B. 115°
- C. 1°
- D. 24°

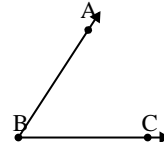
2)



Which choice best represents $\angle ABC$?

- A. 7°
- B. 164°
- C. 110°
- D. 60°

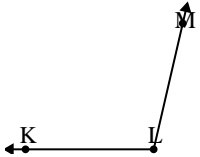
3)



Which choice best represents $\angle ABC$?

- A. 162°
- B. 99°
- C. 57°
- D. 3°

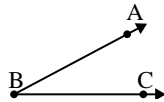
4)



Which choice best represents $\angle KLM$?

- A. 103°
- B. 42°
- C. 82°
- D. 13°

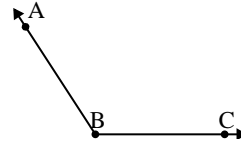
5)



Which choice best represents $\angle ABC$?

- A. 102°
- B. 147°
- C. 28°
- D. 80°

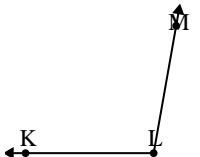
6)



Which choice best represents $\angle ABC$?

- A. 123°
- B. 91°
- C. 151°
- D. 19°

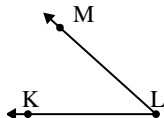
7)



Which choice best represents $\angle KLM$?

- A. 75°
- B. 134°
- C. 100°
- D. 15°

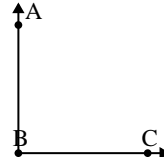
8)



Which choice best represents $\angle KLM$?

- A. 21°
- B. 42°
- C. 149°
- D. 68°

9)



Which choice best represents $\angle ABC$?

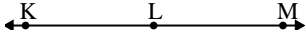
- A. 29°
- B. 90°
- C. 163°
- D. 133°

1. _____
2. _____
3. _____
4. _____
5. _____
6. _____
7. _____
8. _____
9. _____



Solve each problem.

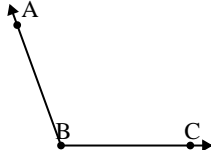
1)



Which choice best represents $\angle KLM$?

- A. 180°
- B. 115°
- C. 1°
- D. 24°

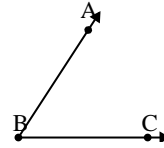
2)



Which choice best represents $\angle ABC$?

- A. 7°
- B. 164°
- C. 110°
- D. 60°

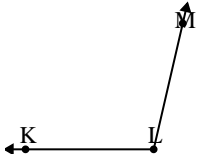
3)



Which choice best represents $\angle ABC$?

- A. 162°
- B. 99°
- C. 57°
- D. 3°

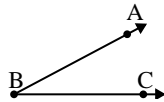
4)



Which choice best represents $\angle KLM$?

- A. 103°
- B. 42°
- C. 82°
- D. 13°

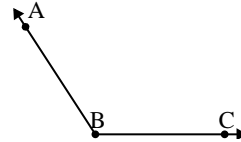
5)



Which choice best represents $\angle ABC$?

- A. 102°
- B. 147°
- C. 28°
- D. 80°

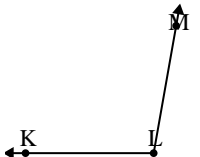
6)



Which choice best represents $\angle ABC$?

- A. 123°
- B. 91°
- C. 151°
- D. 19°

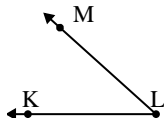
7)



Which choice best represents $\angle KLM$?

- A. 75°
- B. 134°
- C. 100°
- D. 15°

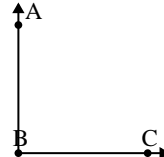
8)



Which choice best represents $\angle KLM$?

- A. 21°
- B. 42°
- C. 149°
- D. 68°

9)



Which choice best represents $\angle ABC$?

- A. 29°
- B. 90°
- C. 163°
- D. 133°

Answers

1. **A**
2. **C**
3. **C**
4. **A**
5. **C**
6. **A**
7. **C**
8. **B**
9. **B**