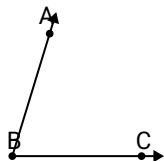




Solve each problem.

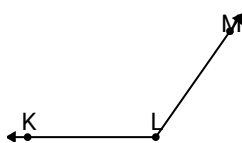
Answers

1)

Which choice best represents $\angle ABC$?

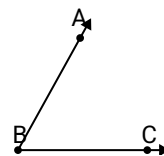
- A. 27°
- B. 51°
- C. 142°
- D. 73°

2)

Which choice best represents $\angle KLM$?

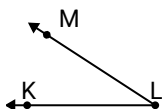
- A. 125°
- B. 72°
- C. 49°
- D. 23°

3)

Which choice best represents $\angle ABC$?

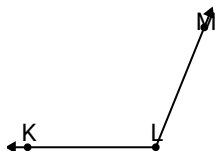
- A. 39°
- B. 99°
- C. 140°
- D. 61°

4)

Which choice best represents $\angle KLM$?

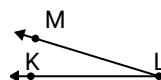
- A. 12°
- B. 91°
- C. 57°
- D. 33°

5)

Which choice best represents $\angle KLM$?

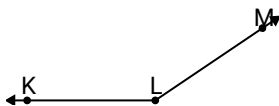
- A. 91°
- B. 112°
- C. 66°
- D. 43°

6)

Which choice best represents $\angle KLM$?

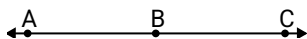
- A. 39°
- B. 150°
- C. 120°
- D. 17°

7)

Which choice best represents $\angle KLM$?

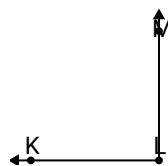
- A. 18°
- B. 120°
- C. 49°
- D. 146°

8)

Which choice best represents $\angle ABC$?

- A. 135°
- B. 101°
- C. 12°
- D. 180°

9)

Which choice best represents $\angle KLM$?

- A. 8°
- B. 90°
- C. 111°
- D. 161°

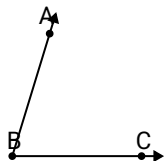
1. _____
2. _____
3. _____
4. _____
5. _____
6. _____
7. _____
8. _____
9. _____



Solve each problem.

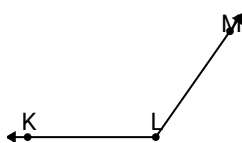
Answers

1)

Which choice best represents $\angle ABC$?

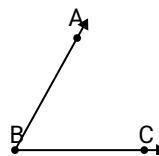
- A. 27°
- B. 51°
- C. 142°
- D. 73°

2)

Which choice best represents $\angle KLM$?

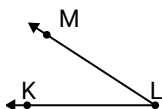
- A. 125°
- B. 72°
- C. 49°
- D. 23°

3)

Which choice best represents $\angle ABC$?

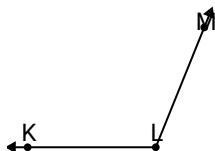
- A. 39°
- B. 99°
- C. 140°
- D. 61°

4)

Which choice best represents $\angle KLM$?

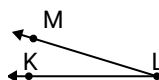
- A. 12°
- B. 91°
- C. 57°
- D. 33°

5)

Which choice best represents $\angle KLM$?

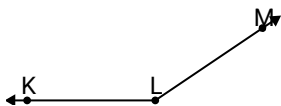
- A. 91°
- B. 112°
- C. 66°
- D. 43°

6)

Which choice best represents $\angle KLM$?

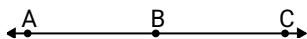
- A. 39°
- B. 150°
- C. 120°
- D. 17°

7)

Which choice best represents $\angle KLM$?

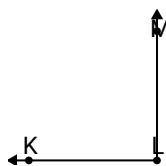
- A. 18°
- B. 120°
- C. 49°
- D. 146°

8)

Which choice best represents $\angle ABC$?

- A. 135°
- B. 101°
- C. 12°
- D. 180°

9)

Which choice best represents $\angle KLM$?

- A. 8°
- B. 90°
- C. 111°
- D. 161°

- 1. **D**
- 2. **A**
- 3. **D**
- 4. **D**
- 5. **B**
- 6. **D**
- 7. **D**
- 8. **D**
- 9. **B**