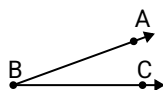




Solve each problem.

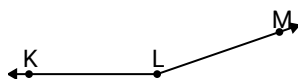
Answers

1)

Which choice best represents $\angle ABC$?

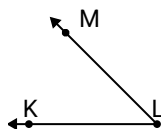
- A. 178°
- B. 20°
- C. 79°
- D. 54°

2)

Which choice best represents $\angle KLM$?

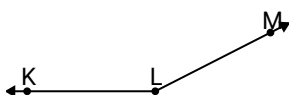
- A. 87°
- B. 161°
- C. 17°
- D. 54°

3)

Which choice best represents $\angle KLM$?

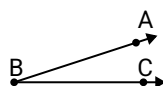
- A. 45°
- B. 174°
- C. 20°
- D. 153°

4)

Which choice best represents $\angle KLM$?

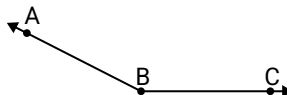
- A. 153°
- B. 5°
- C. 116°
- D. 29°

5)

Which choice best represents $\angle ABC$?

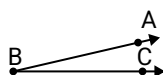
- A. 18°
- B. 59°
- C. 118°
- D. 159°

6)

Which choice best represents $\angle ABC$?

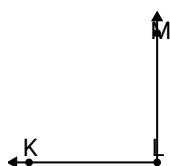
- A. 78°
- B. 21°
- C. 153°
- D. 115°

7)

Which choice best represents $\angle ABC$?

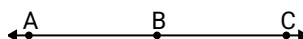
- A. 80°
- B. 165°
- C. 13°
- D. 44°

8)

Which choice best represents $\angle KLM$?

- A. 23°
- B. 90°
- C. 128°
- D. 58°

9)

Which choice best represents $\angle ABC$?

- A. 147°
- B. 24°
- C. 180°
- D. 108°

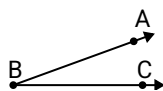
1. _____
2. _____
3. _____
4. _____
5. _____
6. _____
7. _____
8. _____
9. _____



Solve each problem.

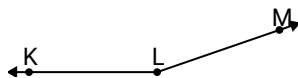
Answers

1)

Which choice best represents $\angle ABC$?

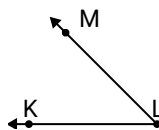
- A. 178°
- B. 20°
- C. 79°
- D. 54°

2)

Which choice best represents $\angle KLM$?

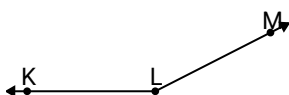
- A. 87°
- B. 161°
- C. 17°
- D. 54°

3)

Which choice best represents $\angle KLM$?

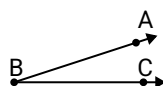
- A. 45°
- B. 174°
- C. 20°
- D. 153°

4)

Which choice best represents $\angle KLM$?

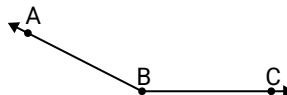
- A. 153°
- B. 5°
- C. 116°
- D. 29°

5)

Which choice best represents $\angle ABC$?

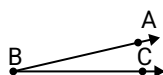
- A. 18°
- B. 59°
- C. 118°
- D. 159°

6)

Which choice best represents $\angle ABC$?

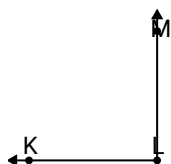
- A. 78°
- B. 21°
- C. 153°
- D. 115°

7)

Which choice best represents $\angle ABC$?

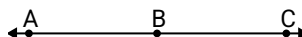
- A. 80°
- B. 165°
- C. 13°
- D. 44°

8)

Which choice best represents $\angle KLM$?

- A. 23°
- B. 90°
- C. 128°
- D. 58°

9)

Which choice best represents $\angle ABC$?

- A. 147°
- B. 24°
- C. 180°
- D. 108°

1. **B**
2. **B**
3. **A**
4. **A**
5. **A**
6. **C**
7. **C**
8. **B**
9. **C**