



Fill in the blanks to find the amounts.

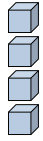
Answers

Ex)

1)

2)

Ex. 4



0

4

tens

ones

tens

ones

tens

ones

1. \_\_\_\_\_

2. \_\_\_\_\_

3. \_\_\_\_\_

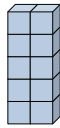
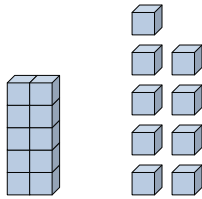
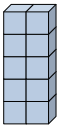
4. \_\_\_\_\_

3)

4)

5)

5. \_\_\_\_\_



tens

ones

tens

ones

tens

ones

6. \_\_\_\_\_

7. \_\_\_\_\_

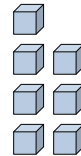
8. \_\_\_\_\_

6)

7)

8)

9. \_\_\_\_\_



tens

ones

tens

ones

tens

ones

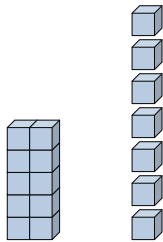
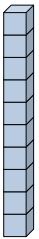
10. \_\_\_\_\_

11. \_\_\_\_\_

9)

10)

11)



tens

ones

tens

ones

tens

ones

