

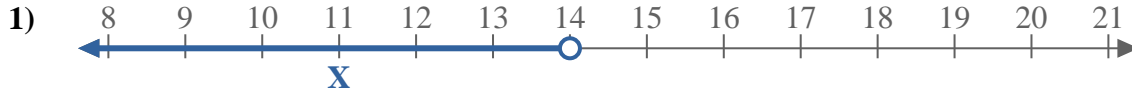


Write an inequality to express the number line.



**Answers**

Ex.  $x \geq -3$



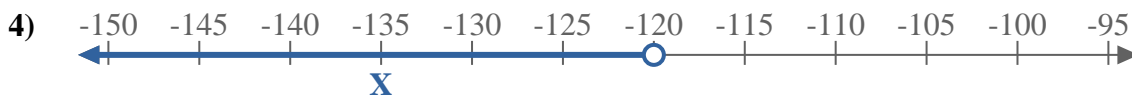
1. \_\_\_\_\_



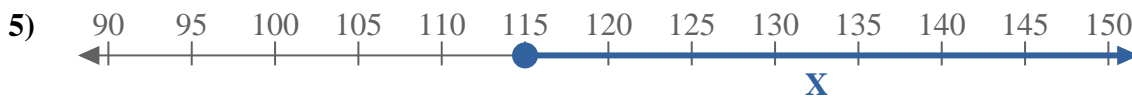
2. \_\_\_\_\_



3. \_\_\_\_\_



4. \_\_\_\_\_



5. \_\_\_\_\_



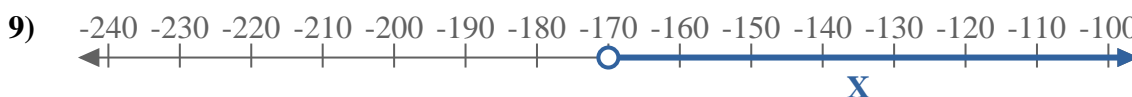
6. \_\_\_\_\_



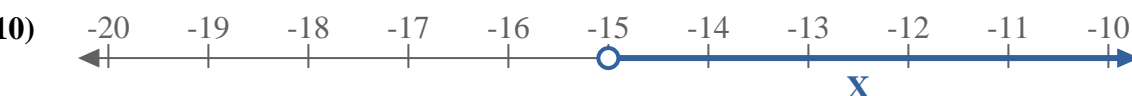
7. \_\_\_\_\_



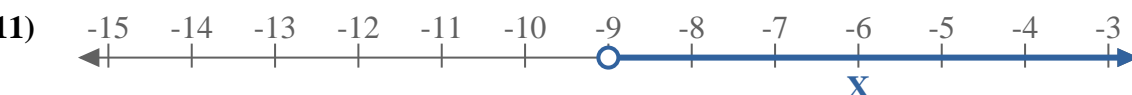
8. \_\_\_\_\_



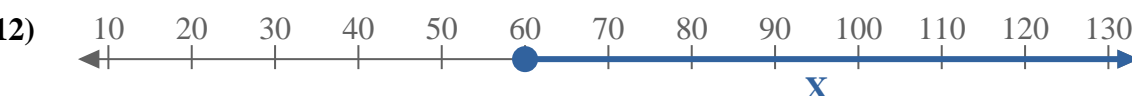
9. \_\_\_\_\_



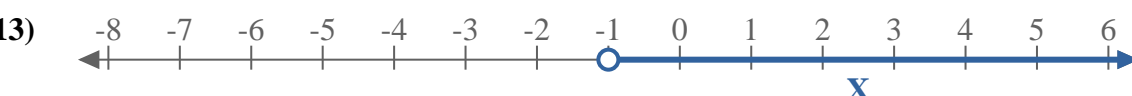
10. \_\_\_\_\_



11. \_\_\_\_\_



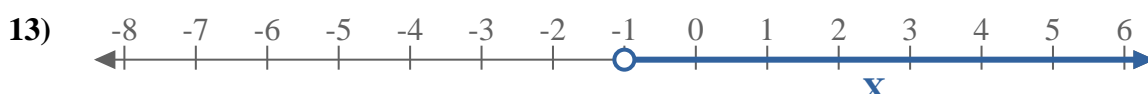
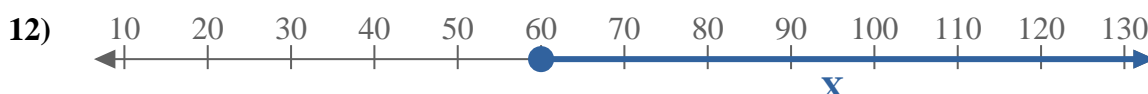
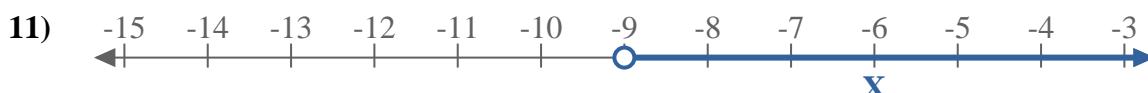
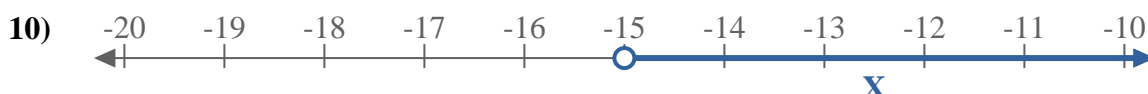
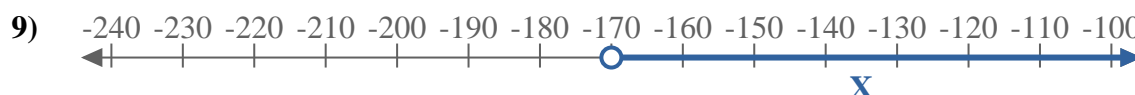
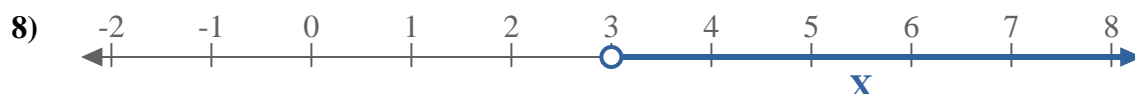
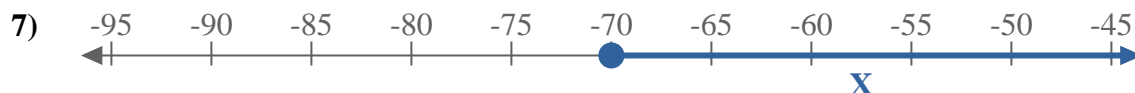
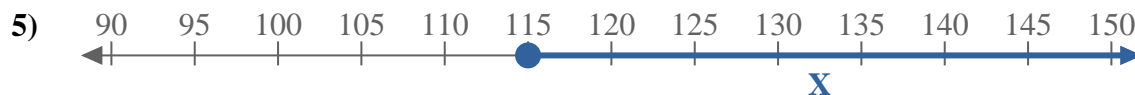
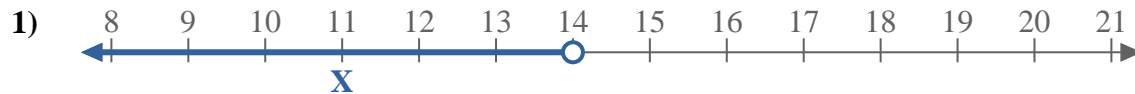
12. \_\_\_\_\_



13. \_\_\_\_\_



Write an inequality to express the number line.



Answers

Ex.  $X \geq -3$

1.  $X < 14$

2.  $X \leq 5$

3.  $X \leq -19$

4.  $X < -120$

5.  $X \geq 115$

6.  $X \leq 5$

7.  $X \geq -70$

8.  $X > 3$

9.  $X > -170$

10.  $X > -15$

11.  $X > -9$

12.  $X \geq 60$

13.  $X > -1$