




Use the groups to answer each question.

Answers

- 1) a. How many groups of 100 are there?
- b. How many small blocks are there total?




1. ____

2. ____

3. ____

- 2) a. How many groups of 100 are there?
- b. How many small blocks are there total?




4. ____

5. ____


6. ____

- 3) a. How many groups of 100 are there?
- b. How many small blocks are there total?

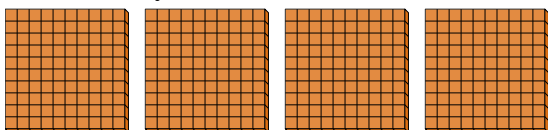


7. ____

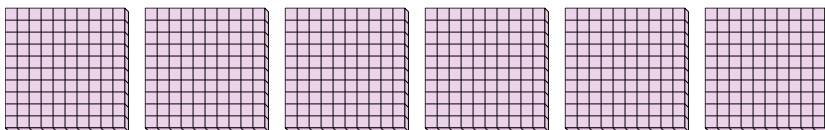
- 4) a. How many groups of 100 are there?
- b. How many small blocks are there total?




- 5) a. How many groups of 100 are there?
- b. How many small blocks are there total?



- 6) a. How many groups of 100 are there?
- b. How many small blocks are there total?




- 7) a. How many groups of 100 are there?
- b. How many small blocks are there total?



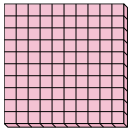


Use the groups to answer each question.

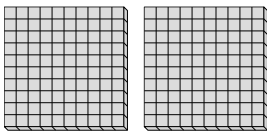
- 1) a. How many groups of 100 are there?
b. How many small blocks are there total?




- 2) a. How many groups of 100 are there?
b. How many small blocks are there total?



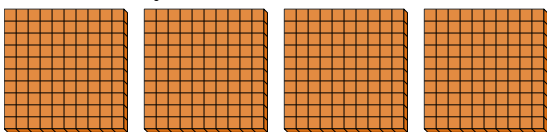
- 3) a. How many groups of 100 are there?
b. How many small blocks are there total?



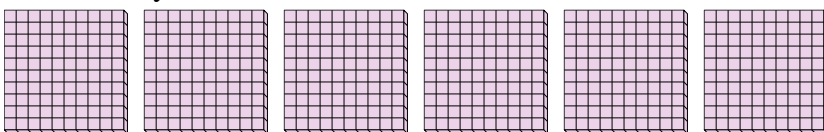
- 4) a. How many groups of 100 are there?
b. How many small blocks are there total?



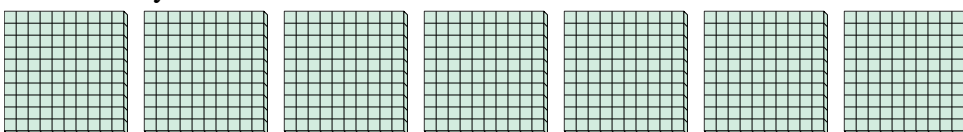
- 5) a. How many groups of 100 are there?
b. How many small blocks are there total?



- 6) a. How many groups of 100 are there?
b. How many small blocks are there total?



- 7) a. How many groups of 100 are there?
b. How many small blocks are there total?



Answers

1. 3 300
2. 1 100
3. 2 200
4. 9 900
5. 4 400
6. 6 600
7. 7 700