

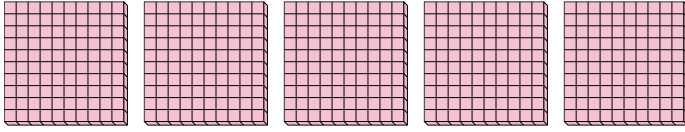


Use the groups to answer each question.

Answers

1) a. How many groups of 100 are there?

b. How many small blocks are there total?




1. _____

2. _____

3. _____

2) a. How many groups of 100 are there?

b. How many small blocks are there total?



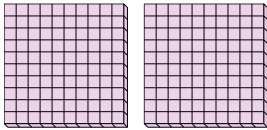
4. _____

5. _____

6. _____

3) a. How many groups of 100 are there?

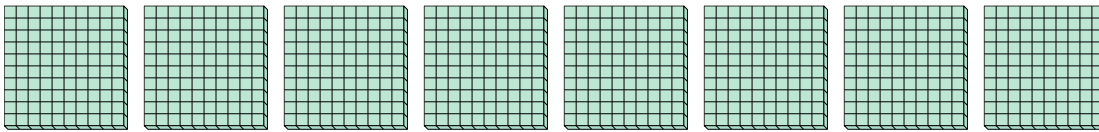
b. How many small blocks are there total?



7. _____

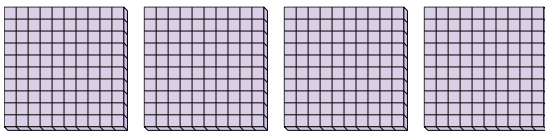
4) a. How many groups of 100 are there?

b. How many small blocks are there total?




5) a. How many groups of 100 are there?

b. How many small blocks are there total?




6) a. How many groups of 100 are there?

b. How many small blocks are there total?



7) a. How many groups of 100 are there?

b. How many small blocks are there total?






Use the groups to answer each question.


1) a. How many groups of 100 are there?

b. How many small blocks are there total?



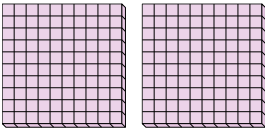
2) a. How many groups of 100 are there?

b. How many small blocks are there total?



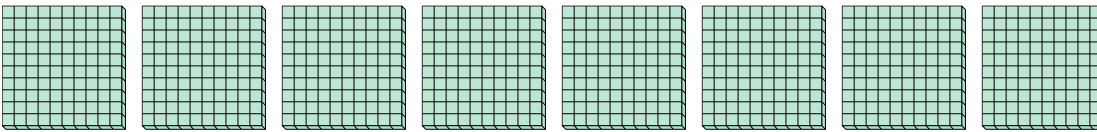
3) a. How many groups of 100 are there?

b. How many small blocks are there total?



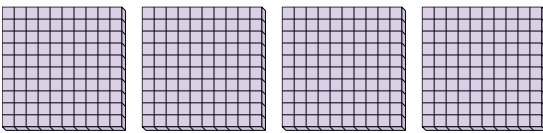
4) a. How many groups of 100 are there?

b. How many small blocks are there total?




5) a. How many groups of 100 are there?

b. How many small blocks are there total?



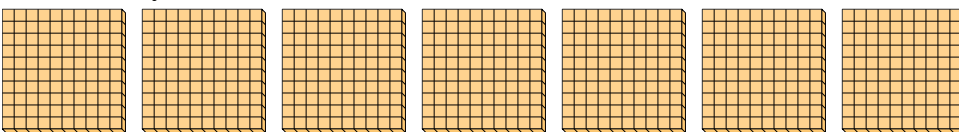
6) a. How many groups of 100 are there?

b. How many small blocks are there total?



7) a. How many groups of 100 are there?

b. How many small blocks are there total?



Answers

1. 5 500

2. 1 100

3. 2 200

4. 8 800

5. 4 400

6. 3 300

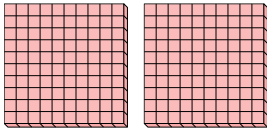
7. 7 700



Use the groups to answer each question.

Answers

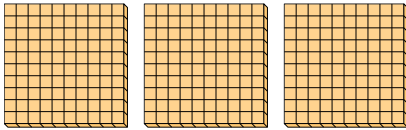
- 1) a. How many groups of 100 are there?
- b. How many small blocks are there total?



1. _____

2. _____


- 2) a. How many groups of 100 are there?
- b. How many small blocks are there total?



3. _____

4. _____

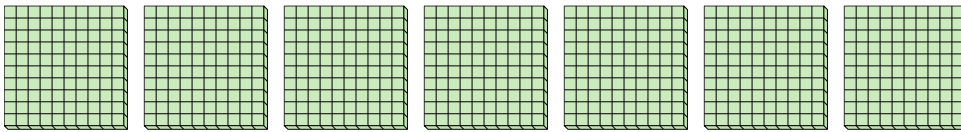
- 3) a. How many groups of 100 are there?
- b. How many small blocks are there total?



5. _____


6. _____

- 4) a. How many groups of 100 are there?
- b. How many small blocks are there total?

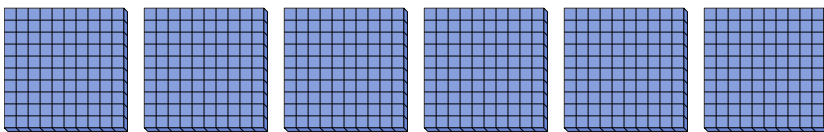


7. _____

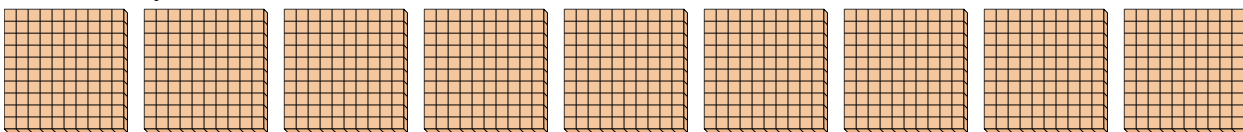
- 5) a. How many groups of 100 are there?
- b. How many small blocks are there total?



- 6) a. How many groups of 100 are there?
- b. How many small blocks are there total?



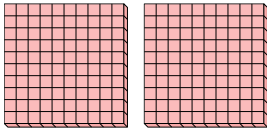
- 7) a. How many groups of 100 are there?
- b. How many small blocks are there total?



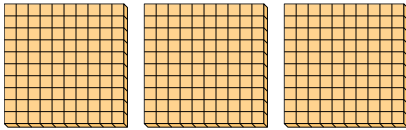


Use the groups to answer each question.


- 1) a. How many groups of 100 are there?
- b. How many small blocks are there total?



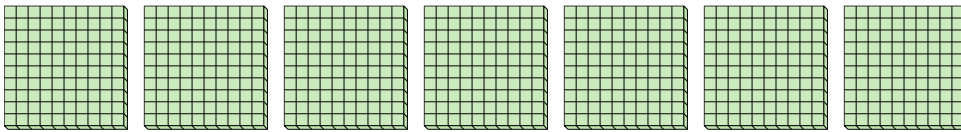
- 2) a. How many groups of 100 are there?
- b. How many small blocks are there total?




- 3) a. How many groups of 100 are there?
- b. How many small blocks are there total?



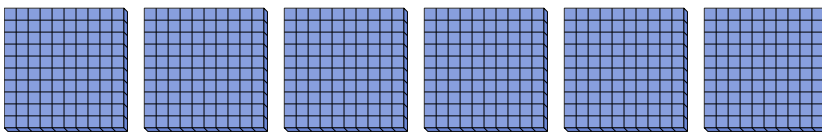
- 4) a. How many groups of 100 are there?
- b. How many small blocks are there total?



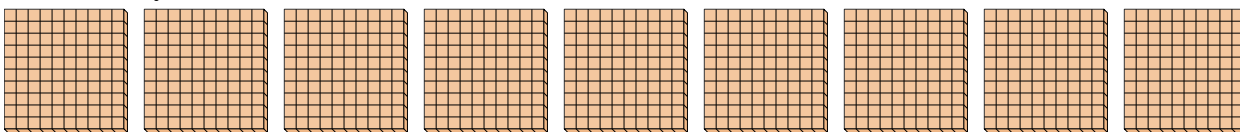
- 5) a. How many groups of 100 are there?
- b. How many small blocks are there total?



- 6) a. How many groups of 100 are there?
- b. How many small blocks are there total?



- 7) a. How many groups of 100 are there?
- b. How many small blocks are there total?



Answers

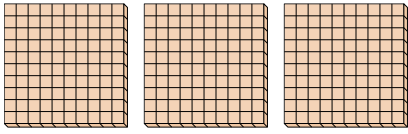
- 1. 2 200
- 2. 3 300
- 3. 5 500
- 4. 7 700
- 5. 8 800
- 6. 6 600
- 7. 9 900



Use the groups to answer each question.

Answers

- 1) a. How many groups of 100 are there?
- b. How many small blocks are there total?

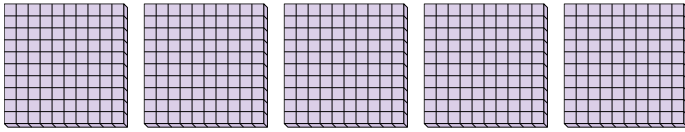


1. _____

2. _____

3. _____

- 2) a. How many groups of 100 are there?
- b. How many small blocks are there total?

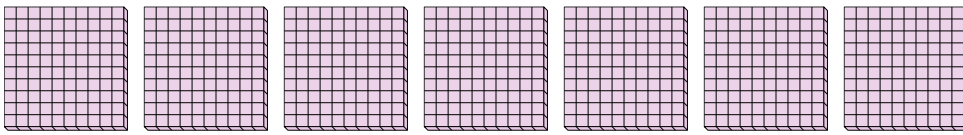


4. _____

5. _____

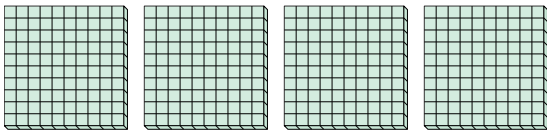
6. _____

- 3) a. How many groups of 100 are there?
- b. How many small blocks are there total?




7. _____


- 4) a. How many groups of 100 are there?
- b. How many small blocks are there total?



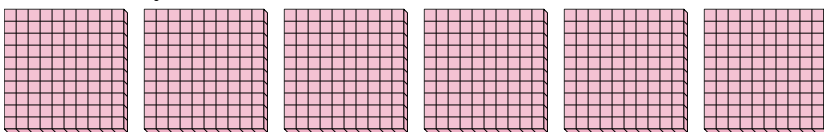
- 5) a. How many groups of 100 are there?
- b. How many small blocks are there total?



- 6) a. How many groups of 100 are there?
- b. How many small blocks are there total?



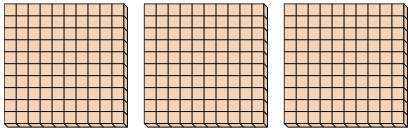
- 7) a. How many groups of 100 are there?
- b. How many small blocks are there total?



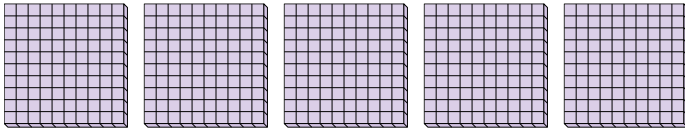


Use the groups to answer each question.

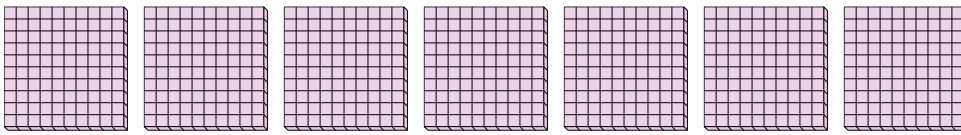
- 1) a. How many groups of 100 are there?
b. How many small blocks are there total?



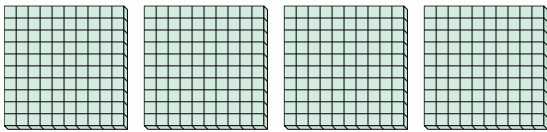
- 2) a. How many groups of 100 are there?
b. How many small blocks are there total?




- 3) a. How many groups of 100 are there?
b. How many small blocks are there total?




- 4) a. How many groups of 100 are there?
b. How many small blocks are there total?



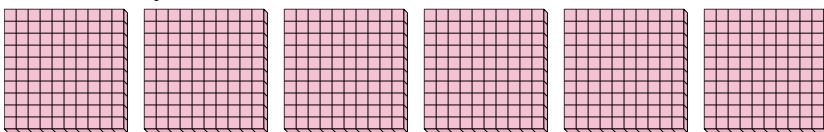
- 5) a. How many groups of 100 are there?
b. How many small blocks are there total?



- 6) a. How many groups of 100 are there?
b. How many small blocks are there total?



- 7) a. How many groups of 100 are there?
b. How many small blocks are there total?



Answers

1. 3 300
2. 5 500
3. 7 700
4. 4 400
5. 9 900
6. 2 200
7. 6 600

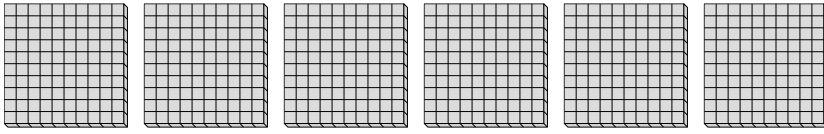


Use the groups to answer each question.

Answers

1) a. How many groups of 100 are there?

b. How many small blocks are there total?



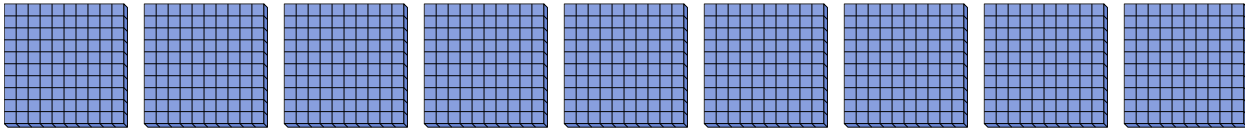
1. ____

2. ____

3. ____

2) a. How many groups of 100 are there?

b. How many small blocks are there total?




4. ____

5. ____

6. ____

3) a. How many groups of 100 are there?

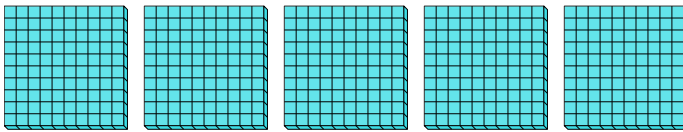
b. How many small blocks are there total?



7. ____

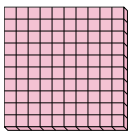
4) a. How many groups of 100 are there?

b. How many small blocks are there total?



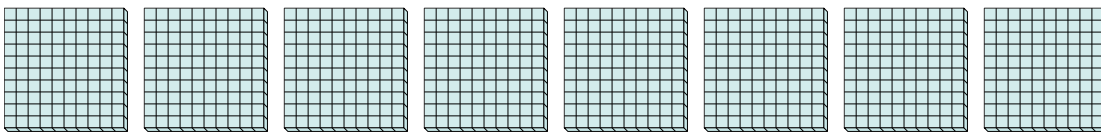
5) a. How many groups of 100 are there?

b. How many small blocks are there total?




6) a. How many groups of 100 are there?

b. How many small blocks are there total?



7) a. How many groups of 100 are there?

b. How many small blocks are there total?

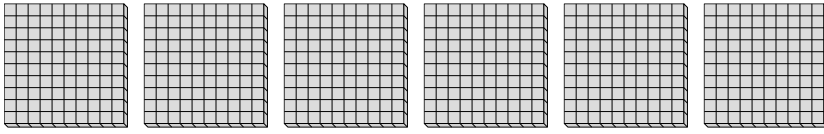




Use the groups to answer each question.

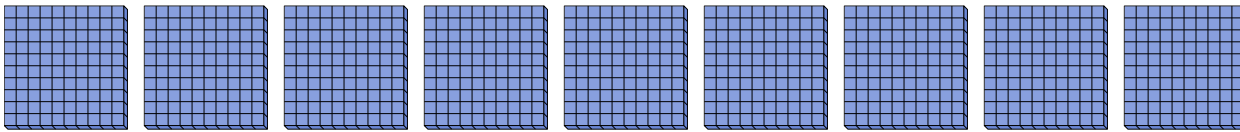
1) a. How many groups of 100 are there?

b. How many small blocks are there total?




2) a. How many groups of 100 are there?

b. How many small blocks are there total?



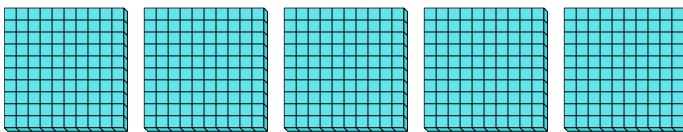
3) a. How many groups of 100 are there?

b. How many small blocks are there total?



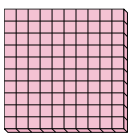
4) a. How many groups of 100 are there?

b. How many small blocks are there total?



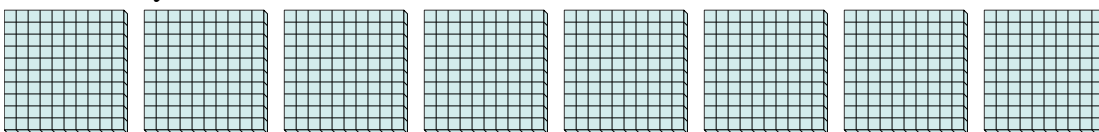
5) a. How many groups of 100 are there?

b. How many small blocks are there total?




6) a. How many groups of 100 are there?

b. How many small blocks are there total?



7) a. How many groups of 100 are there?

b. How many small blocks are there total?



Answers

1. 6 600

2. 9 900

3. 3 300

4. 5 500

5. 1 100

6. 8 800

7. 4 400

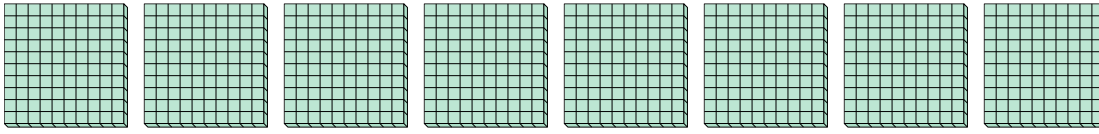


Use the groups to answer each question.

Answers

1) a. How many groups of 100 are there?

b. How many small blocks are there total?



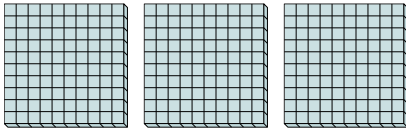
1. _____

2. _____

3. _____

2) a. How many groups of 100 are there?

b. How many small blocks are there total?



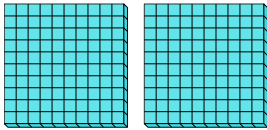
4. _____

5. _____

6. _____

3) a. How many groups of 100 are there?

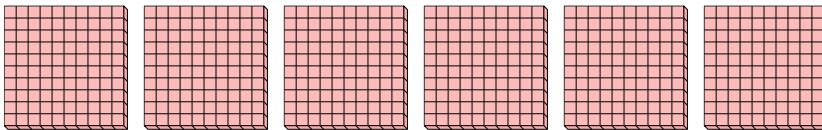
b. How many small blocks are there total?



7. _____


4) a. How many groups of 100 are there?

b. How many small blocks are there total?



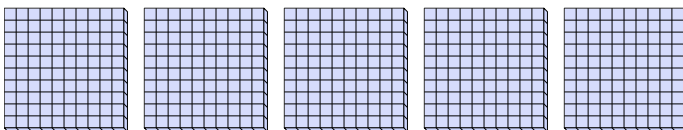
5) a. How many groups of 100 are there?

b. How many small blocks are there total?



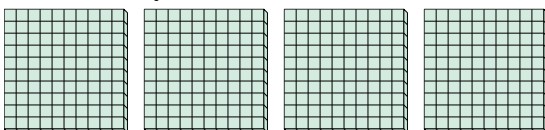
6) a. How many groups of 100 are there?

b. How many small blocks are there total?



7) a. How many groups of 100 are there?

b. How many small blocks are there total?

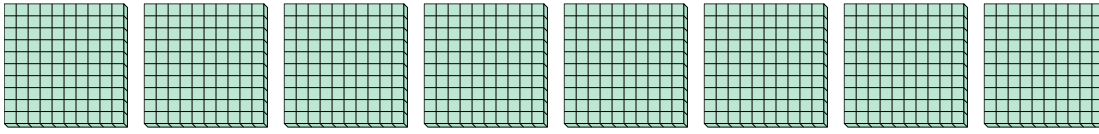




Use the groups to answer each question.


1) a. How many groups of 100 are there?

b. How many small blocks are there total?



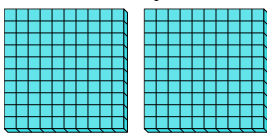
2) a. How many groups of 100 are there?

b. How many small blocks are there total?



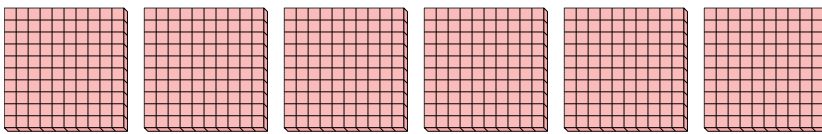
3) a. How many groups of 100 are there?

b. How many small blocks are there total?



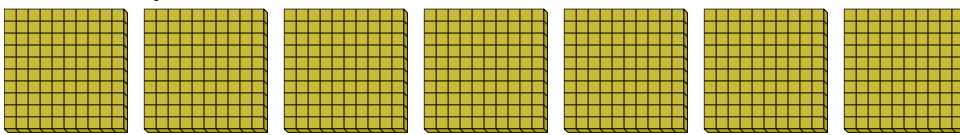
4) a. How many groups of 100 are there?

b. How many small blocks are there total?



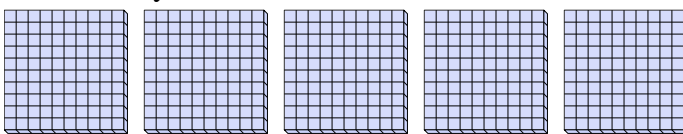
5) a. How many groups of 100 are there?

b. How many small blocks are there total?



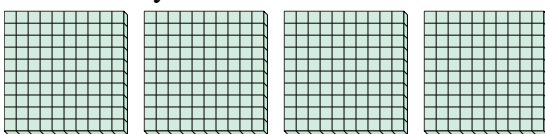
6) a. How many groups of 100 are there?

b. How many small blocks are there total?



7) a. How many groups of 100 are there?

b. How many small blocks are there total?



Answers

1. 8 800

2. 3 300

3. 2 200

4. 6 600

5. 7 700

6. 5 500

7. 4 400

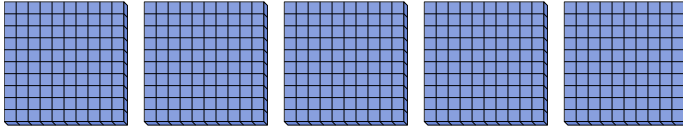


Use the groups to answer each question.

Answers

1) a. How many groups of 100 are there?

b. How many small blocks are there total?



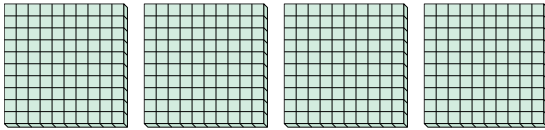
1. ____

2. ____

3. ____

2) a. How many groups of 100 are there?

b. How many small blocks are there total?




4. ____

5. ____

6. ____

3) a. How many groups of 100 are there?

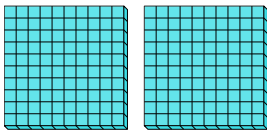
b. How many small blocks are there total?



7. ____

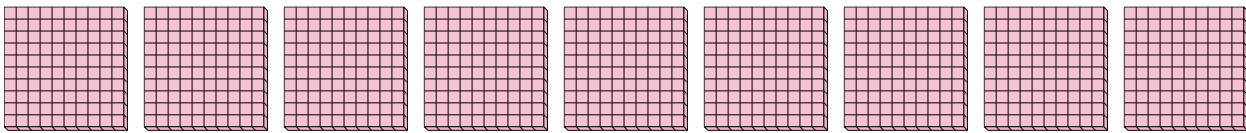
4) a. How many groups of 100 are there?

b. How many small blocks are there total?




5) a. How many groups of 100 are there?

b. How many small blocks are there total?



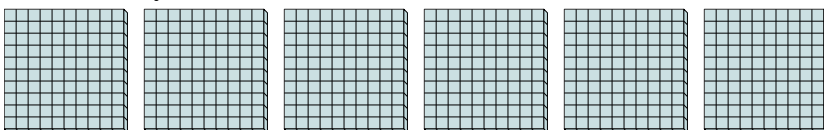
6) a. How many groups of 100 are there?

b. How many small blocks are there total?



7) a. How many groups of 100 are there?

b. How many small blocks are there total?

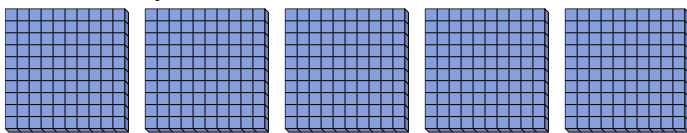




Use the groups to answer each question.

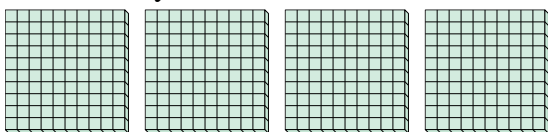
1) a. How many groups of 100 are there?

b. How many small blocks are there total?




2) a. How many groups of 100 are there?

b. How many small blocks are there total?



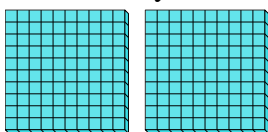
3) a. How many groups of 100 are there?

b. How many small blocks are there total?




4) a. How many groups of 100 are there?

b. How many small blocks are there total?




5) a. How many groups of 100 are there?

b. How many small blocks are there total?



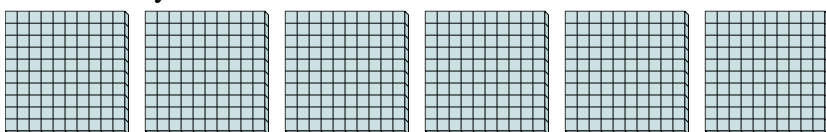
6) a. How many groups of 100 are there?

b. How many small blocks are there total?



7) a. How many groups of 100 are there?

b. How many small blocks are there total?



Answers

1. 5 500

2. 4 400

3. 3 300

4. 2 200

5. 9 900

6. 1 100

7. 6 600

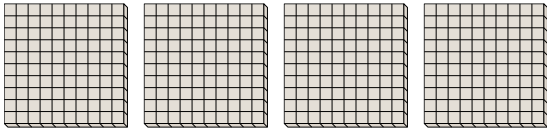


Use the groups to answer each question.

Answers

1) a. How many groups of 100 are there?

b. How many small blocks are there total?



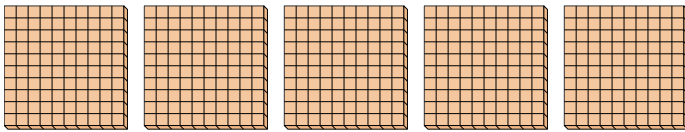
1. ____

2. ____

3. ____

2) a. How many groups of 100 are there?

b. How many small blocks are there total?



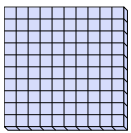
4. ____

5. ____

6. ____

3) a. How many groups of 100 are there?

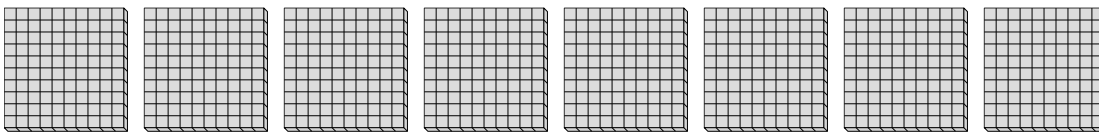
b. How many small blocks are there total?



7. ____

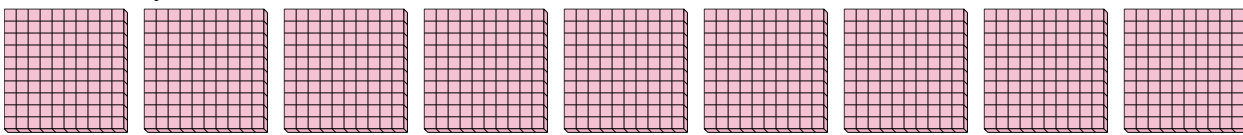
4) a. How many groups of 100 are there?

b. How many small blocks are there total?



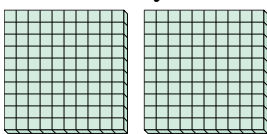
5) a. How many groups of 100 are there?

b. How many small blocks are there total?



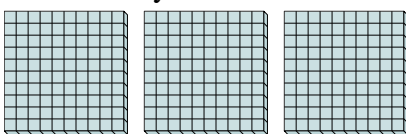
6) a. How many groups of 100 are there?

b. How many small blocks are there total?



7) a. How many groups of 100 are there?

b. How many small blocks are there total?

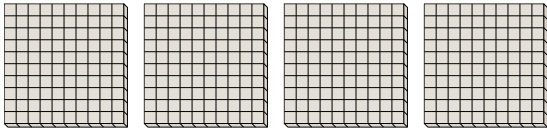




Use the groups to answer each question.

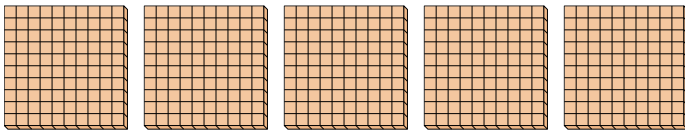
1) a. How many groups of 100 are there?

b. How many small blocks are there total?



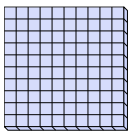
2) a. How many groups of 100 are there?

b. How many small blocks are there total?




3) a. How many groups of 100 are there?

b. How many small blocks are there total?




4) a. How many groups of 100 are there?

b. How many small blocks are there total?



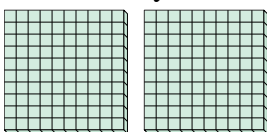
5) a. How many groups of 100 are there?

b. How many small blocks are there total?




6) a. How many groups of 100 are there?

b. How many small blocks are there total?



7) a. How many groups of 100 are there?

b. How many small blocks are there total?



Answers

1. 4 400

2. 5 500

3. 1 100

4. 8 800

5. 9 900

6. 2 200


7. 3 300



Use the groups to answer each question.

Answers

- 1) a. How many groups of 100 are there?
- b. How many small blocks are there total?

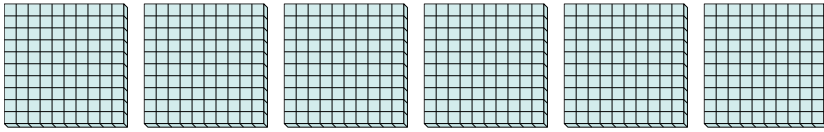


1. ____ ____

2. ____ ____

3. ____ ____

- 2) a. How many groups of 100 are there?
- b. How many small blocks are there total?

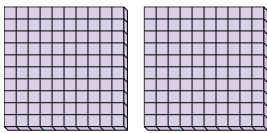


4. ____ ____

5. ____ ____

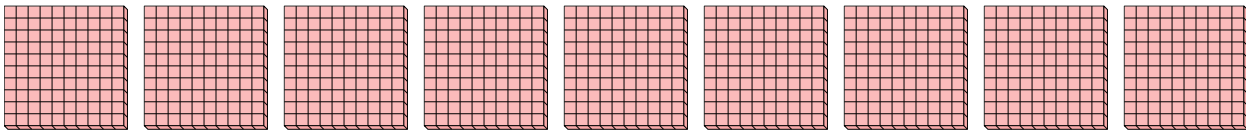
6. ____ ____

- 3) a. How many groups of 100 are there?
- b. How many small blocks are there total?

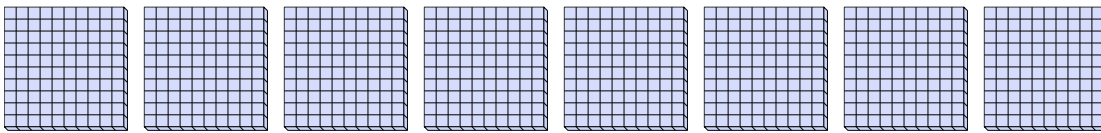


7. ____ ____


- 4) a. How many groups of 100 are there?
- b. How many small blocks are there total?



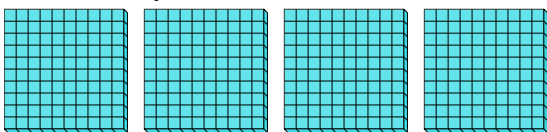
- 5) a. How many groups of 100 are there?
- b. How many small blocks are there total?



- 6) a. How many groups of 100 are there?
- b. How many small blocks are there total?




- 7) a. How many groups of 100 are there?
- b. How many small blocks are there total?



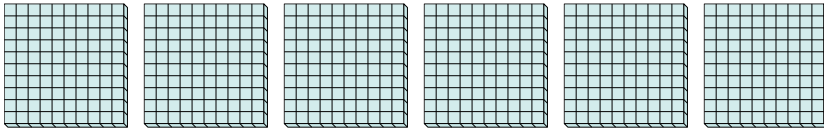


Use the groups to answer each question.

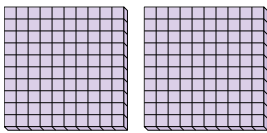
- 1) a. How many groups of 100 are there?
b. How many small blocks are there total?



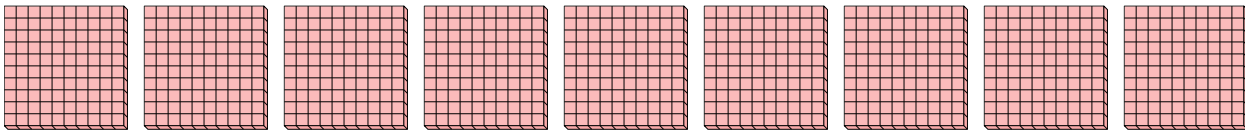
- 2) a. How many groups of 100 are there?
b. How many small blocks are there total?



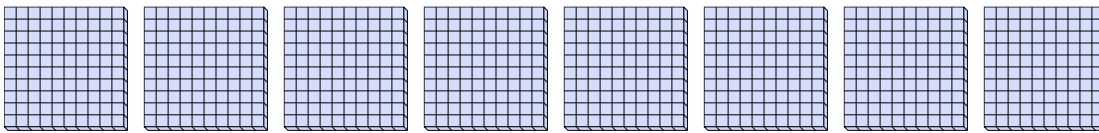
- 3) a. How many groups of 100 are there?
b. How many small blocks are there total?




- 4) a. How many groups of 100 are there?
b. How many small blocks are there total?



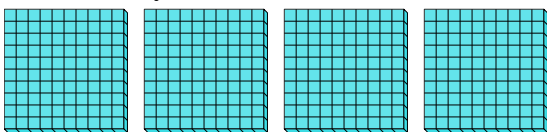
- 5) a. How many groups of 100 are there?
b. How many small blocks are there total?



- 6) a. How many groups of 100 are there?
b. How many small blocks are there total?



- 7) a. How many groups of 100 are there?
b. How many small blocks are there total?



Answers

1. 3 300
2. 6 600
3. 2 200
4. 9 900
5. 8 800
6. 1 100
7. 4 400

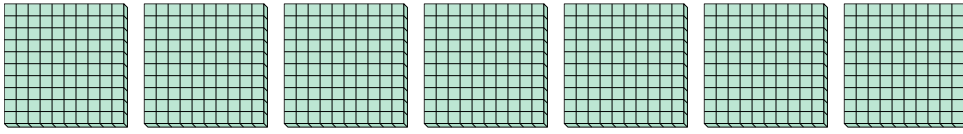


Use the groups to answer each question.

Answers

1) a. How many groups of 100 are there?

b. How many small blocks are there total?



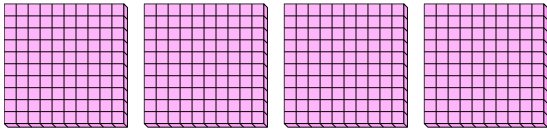
1. _____

2. _____

3. _____

2) a. How many groups of 100 are there?

b. How many small blocks are there total?



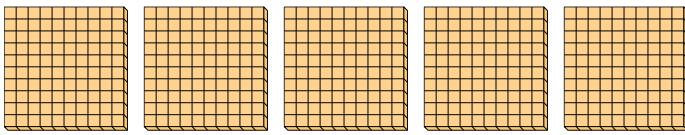
4. _____

5. _____

6. _____

3) a. How many groups of 100 are there?

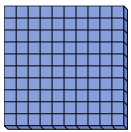
b. How many small blocks are there total?



7. _____

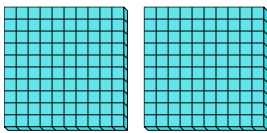
4) a. How many groups of 100 are there?

b. How many small blocks are there total?



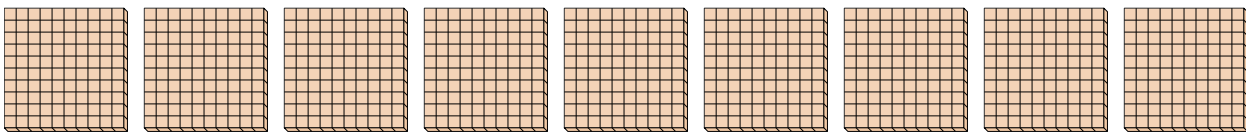
5) a. How many groups of 100 are there?

b. How many small blocks are there total?




6) a. How many groups of 100 are there?

b. How many small blocks are there total?



7) a. How many groups of 100 are there?

b. How many small blocks are there total?

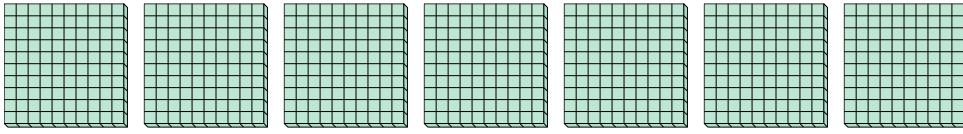




Use the groups to answer each question.

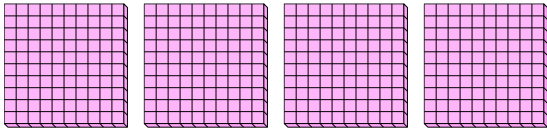
1) a. How many groups of 100 are there?

b. How many small blocks are there total?



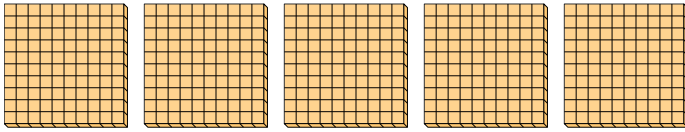
2) a. How many groups of 100 are there?

b. How many small blocks are there total?



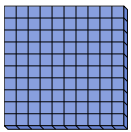
3) a. How many groups of 100 are there?

b. How many small blocks are there total?



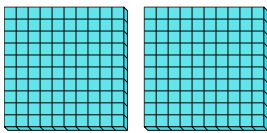
4) a. How many groups of 100 are there?

b. How many small blocks are there total?



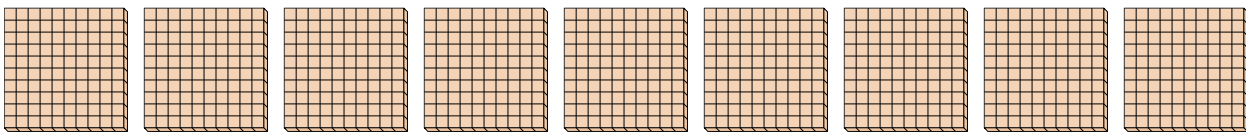
5) a. How many groups of 100 are there?

b. How many small blocks are there total?




6) a. How many groups of 100 are there?

b. How many small blocks are there total?



7) a. How many groups of 100 are there?

b. How many small blocks are there total?



Answers

1. 7 700

2. 4 400

3. 5 500

4. 1 100

5. 2 200

6. 9 900

7. 3 300




Use the groups to answer each question.

Answers

1) a. How many groups of 100 are there?

b. How many small blocks are there total?



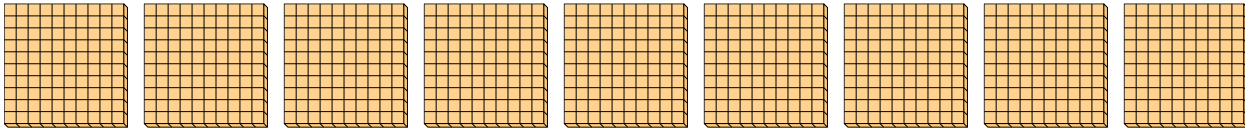
1. _____

2. _____

3. _____

2) a. How many groups of 100 are there?

b. How many small blocks are there total?



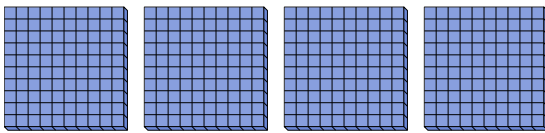
4. _____

5. _____

6. _____

3) a. How many groups of 100 are there?

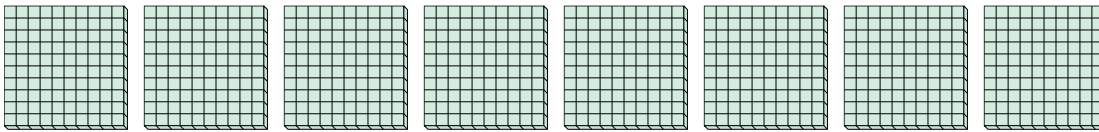
b. How many small blocks are there total?



7. _____

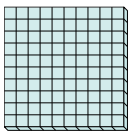
4) a. How many groups of 100 are there?

b. How many small blocks are there total?



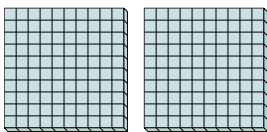
5) a. How many groups of 100 are there?

b. How many small blocks are there total?




6) a. How many groups of 100 are there?

b. How many small blocks are there total?



7) a. How many groups of 100 are there?

b. How many small blocks are there total?






Use the groups to answer each question.

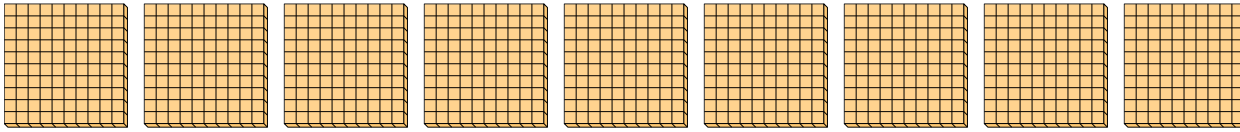
1) a. How many groups of 100 are there?

b. How many small blocks are there total?



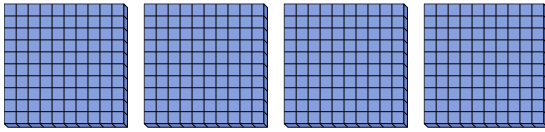
2) a. How many groups of 100 are there?

b. How many small blocks are there total?



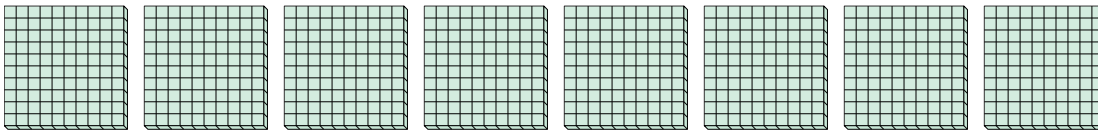
3) a. How many groups of 100 are there?

b. How many small blocks are there total?



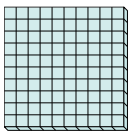
4) a. How many groups of 100 are there?

b. How many small blocks are there total?



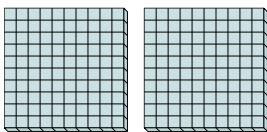
5) a. How many groups of 100 are there?

b. How many small blocks are there total?




6) a. How many groups of 100 are there?

b. How many small blocks are there total?



7) a. How many groups of 100 are there?

b. How many small blocks are there total?



Answers

1. 7 700

2. 9 900

3. 4 400

4. 8 800

5. 1 100

6. 2 200

7. 6 600