

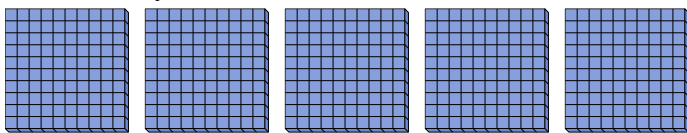


Use the groups to answer each question.

Answers

1) a. How many groups of 100 are there?

b. How many small blocks are there total?



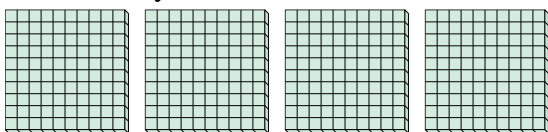
1. ____

2. ____

3. ____

2) a. How many groups of 100 are there?

b. How many small blocks are there total?




4. ____

5. ____

6. ____

3) a. How many groups of 100 are there?

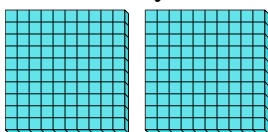
b. How many small blocks are there total?



7. ____


4) a. How many groups of 100 are there?

b. How many small blocks are there total?




5) a. How many groups of 100 are there?

b. How many small blocks are there total?



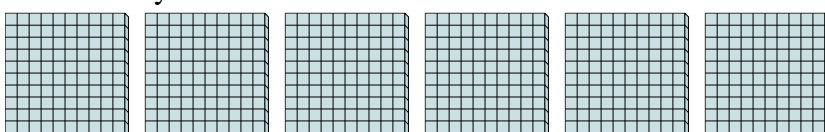
6) a. How many groups of 100 are there?

b. How many small blocks are there total?



7) a. How many groups of 100 are there?

b. How many small blocks are there total?






Use the groups to answer each question.

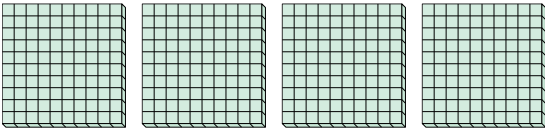
1) a. How many groups of 100 are there?

b. How many small blocks are there total?




2) a. How many groups of 100 are there?

b. How many small blocks are there total?



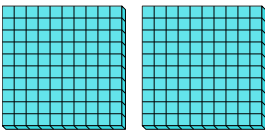
3) a. How many groups of 100 are there?

b. How many small blocks are there total?



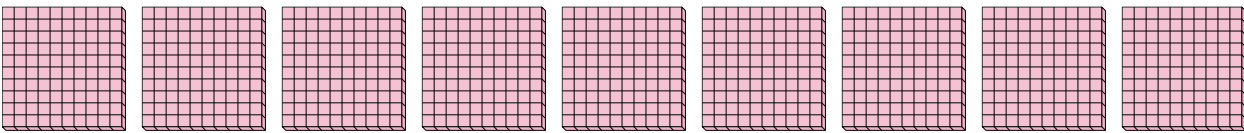
4) a. How many groups of 100 are there?

b. How many small blocks are there total?



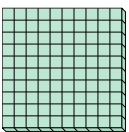
5) a. How many groups of 100 are there?

b. How many small blocks are there total?



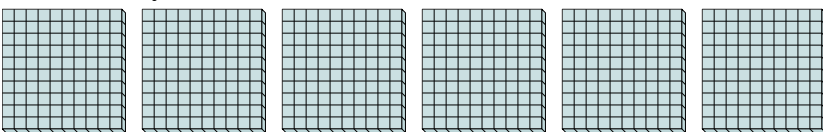
6) a. How many groups of 100 are there?

b. How many small blocks are there total?



7) a. How many groups of 100 are there?

b. How many small blocks are there total?



Answers

1. 5 500

2. 4 400

3. 3 300

4. 2 200

5. 9 900

6. 1 100

7. 6 600