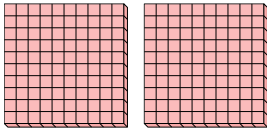




Use the groups to answer each question.

**Answers**

- 1) a. How many groups of 100 are there?  
b. How many small blocks are there total?

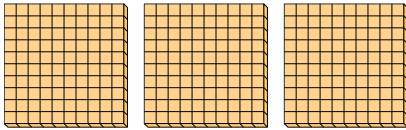


1. \_\_\_\_

2. \_\_\_\_

3. \_\_\_\_

- 2) a. How many groups of 100 are there?  
b. How many small blocks are there total?

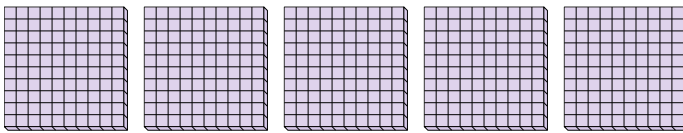


4. \_\_\_\_

5. \_\_\_\_

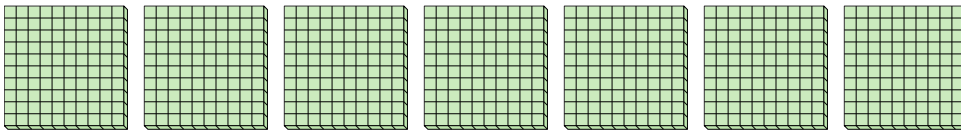
6. \_\_\_\_

- 3) a. How many groups of 100 are there?  
b. How many small blocks are there total?




7. \_\_\_\_

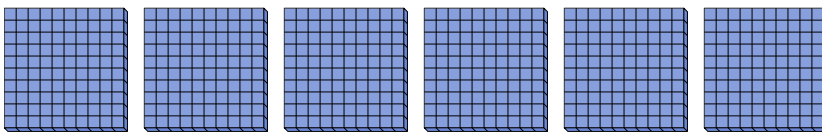
- 4) a. How many groups of 100 are there?  
b. How many small blocks are there total?



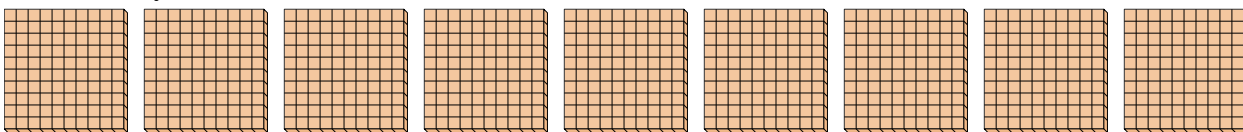
- 5) a. How many groups of 100 are there?  
b. How many small blocks are there total?



- 6) a. How many groups of 100 are there?  
b. How many small blocks are there total?



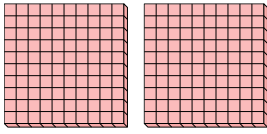
- 7) a. How many groups of 100 are there?  
b. How many small blocks are there total?



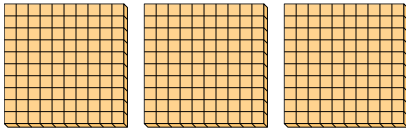


Use the groups to answer each question.

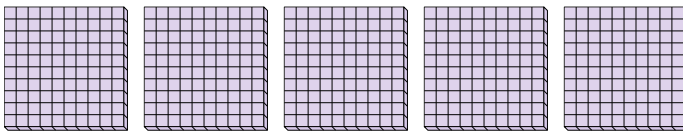
- 1) a. How many groups of 100 are there?  
b. How many small blocks are there total?



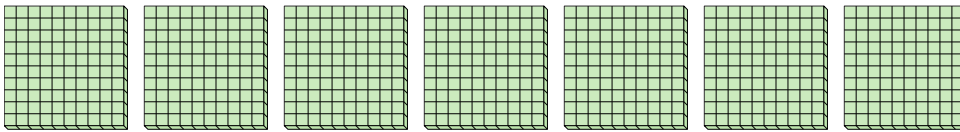
- 2) a. How many groups of 100 are there?  
b. How many small blocks are there total?




- 3) a. How many groups of 100 are there?  
b. How many small blocks are there total?



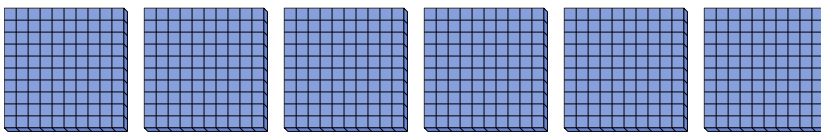
- 4) a. How many groups of 100 are there?  
b. How many small blocks are there total?



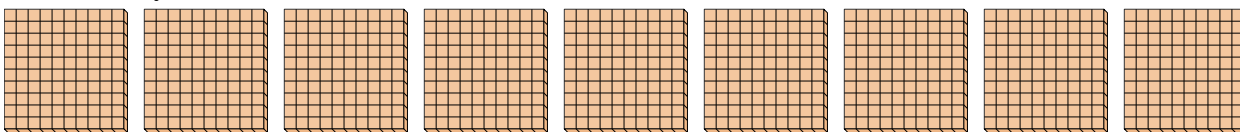
- 5) a. How many groups of 100 are there?  
b. How many small blocks are there total?



- 6) a. How many groups of 100 are there?  
b. How many small blocks are there total?



- 7) a. How many groups of 100 are there?  
b. How many small blocks are there total?

**Answers**

1. 2 200  
2. 3 300  
3. 5 500  
4. 7 700  
5. 8 800  
6. 6 600  
7. 9 900