




Use the groups to answer each question.

**Answers**

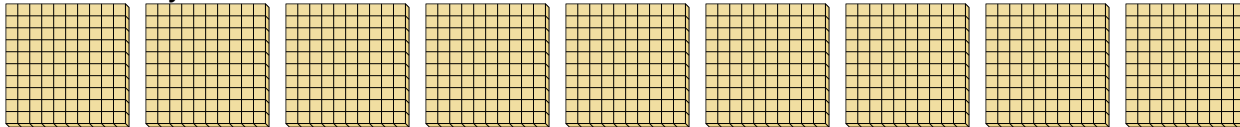
- 1) a. How many groups of 100 are there?  
b. How many small blocks are there total?



1. \_\_\_\_

2. \_\_\_\_

- 2) a. How many groups of 100 are there?  
b. How many small blocks are there total?

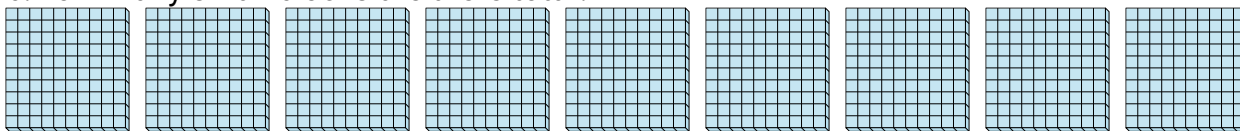


3. \_\_\_\_

4. \_\_\_\_

5. \_\_\_\_


- 3) a. How many groups of 100 are there?  
b. How many small blocks are there total?



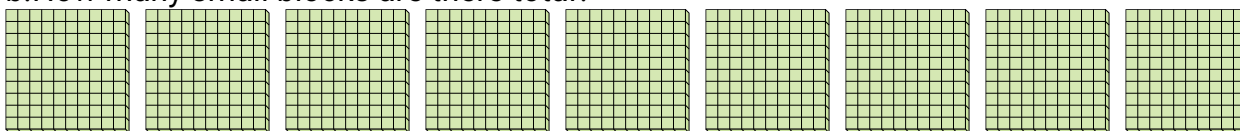
6. \_\_\_\_

7. \_\_\_\_


- 4) a. How many groups of 100 are there?  
b. How many small blocks are there total?




- 5) a. How many groups of 100 are there?  
b. How many small blocks are there total?



- 6) a. How many groups of 100 are there?  
b. How many small blocks are there total?



- 7) a. How many groups of 100 are there?  
b. How many small blocks are there total?






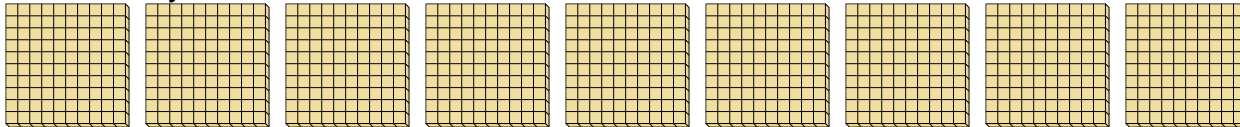
Use the groups to answer each question.

**Answers**


- 1) a. How many groups of 100 are there?  
b. How many small blocks are there total?

1. 9 9002. 9 900


- 2) a. How many groups of 100 are there?  
b. How many small blocks are there total?

3. 9 9004. 9 9005. 9 900

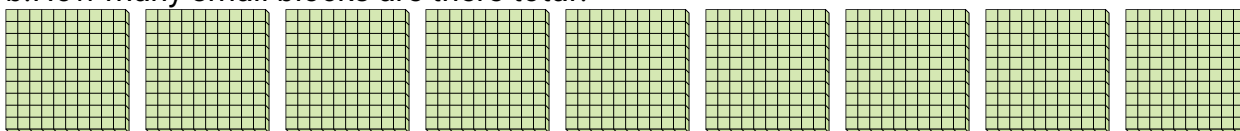
- 3) a. How many groups of 100 are there?  
b. How many small blocks are there total?

6. 9 9007. 9 900


- 4) a. How many groups of 100 are there?  
b. How many small blocks are there total?



- 5) a. How many groups of 100 are there?  
b. How many small blocks are there total?



- 6) a. How many groups of 100 are there?  
b. How many small blocks are there total?



- 7) a. How many groups of 100 are there?  
b. How many small blocks are there total?

