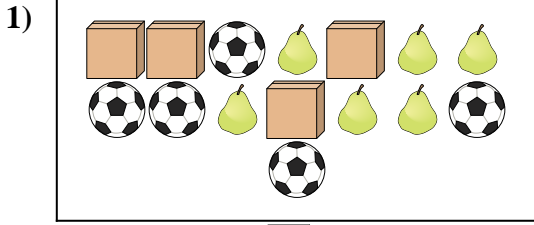


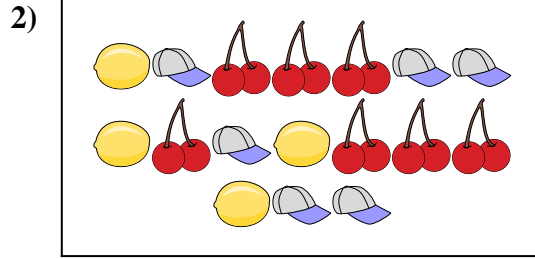


Compare the number of shapes.



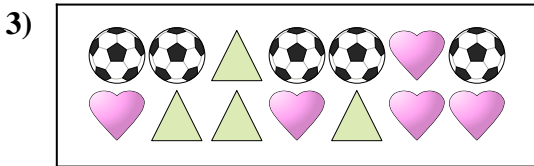
Are there more or more ?

- A.
- B.




Are there less or less ?

- A.
- B.




Are there less or less ?

- A.
- B.



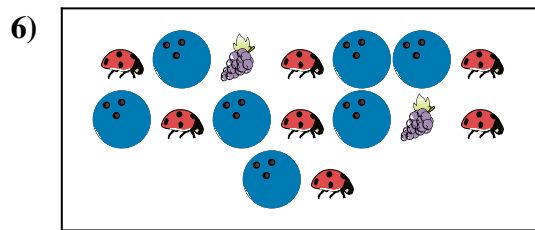
Are there less or less ?

- A.
- B.



Are there more or more ?

- A.
- B.



Are there more or more ?

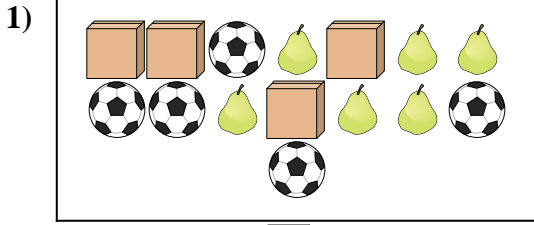
- A.
- B.

**Answers**

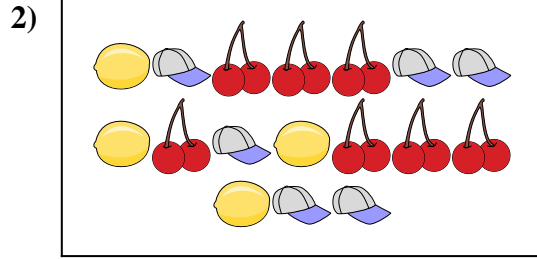
1. \_\_\_\_\_
2. \_\_\_\_\_
3. \_\_\_\_\_
4. \_\_\_\_\_
5. \_\_\_\_\_
6. \_\_\_\_\_



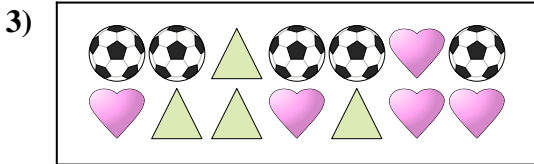
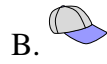
Compare the number of shapes.




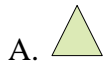
Are there more or more ?




Are there less or less ?




Are there less or less ?



Are there less or less ?



Are there more or more ?



Are there more or more ?



**Answers**

1. **B**

2. **A**

3. **A**

4. **A**

5. **B**

6. **B**