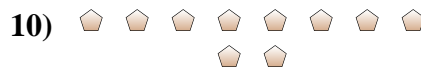
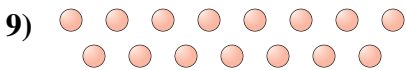
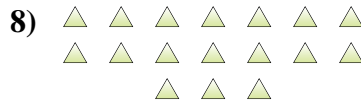
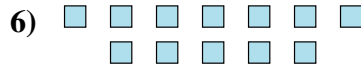
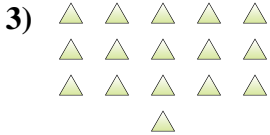
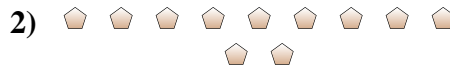




Determine if the number of shapes is even or odd.



Answers

1. _____
2. _____
3. _____
4. _____
5. _____
6. _____
7. _____
8. _____
9. _____
10. _____




Determine if the number of shapes is even or odd.



10



11



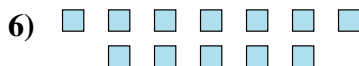
16



8



6



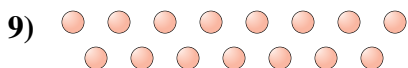
12



14



17



15



10

Answers

1. even

2. odd

3. even

4. even

5. even

6. even

7. even

8. odd

9. odd

10. even