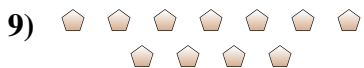
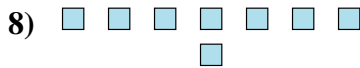
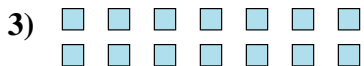
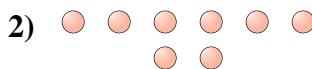




Determine if the number of shapes is even or odd.



Answers

1. _____

2. _____

3. _____

4. _____

5. _____

6. _____

7. _____

8. _____

9. _____

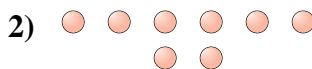
10. _____



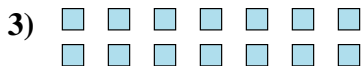
Determine if the number of shapes is even or odd.



15



8



14



10



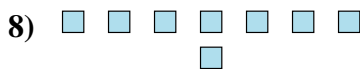
12



8



16



8



11



7

Answers

1. odd

2. even

3. even

4. even

5. even

6. even

7. even

8. even

9. odd

10. odd