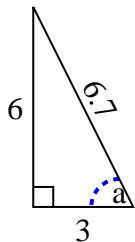
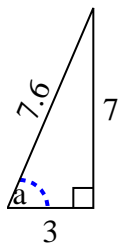


Identify the Opposite, Adjacent and Hypotenuse of Angle a .Answers

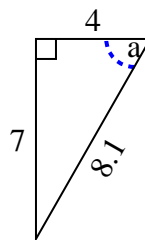
1)



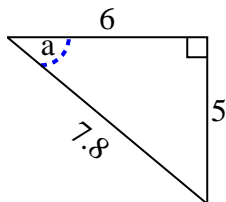
2)



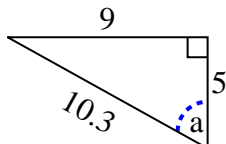
3)



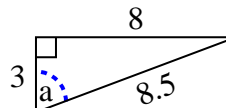
4)



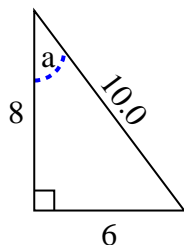
5)



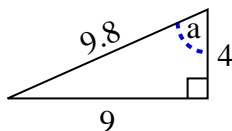
6)



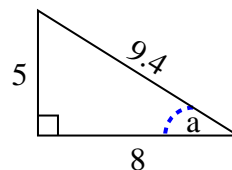
7)



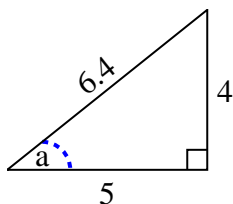
8)



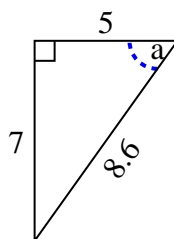
9)



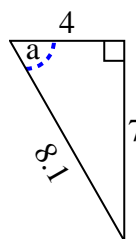
10)



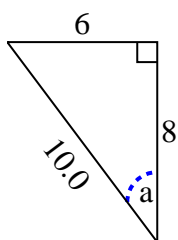
11)



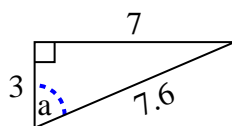
12)



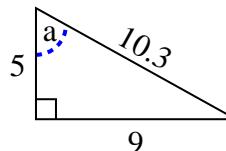
13)



14)



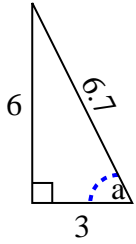
15)



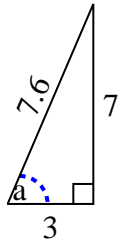
1. _____
2. _____
3. _____
4. _____
5. _____
6. _____
7. _____
8. _____
9. _____
10. _____
11. _____
12. _____
13. _____
14. _____
15. _____

Identify the Opposite, Adjacent and Hypotenuse of Angle a .**Answers**

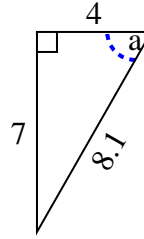
1)



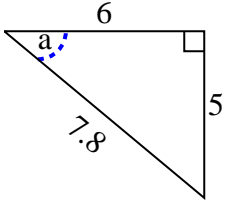
2)



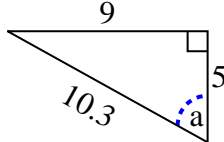
3)



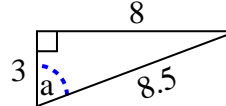
4)



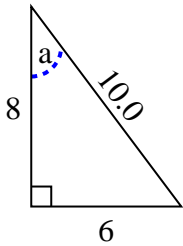
5)



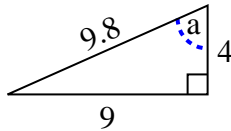
6)



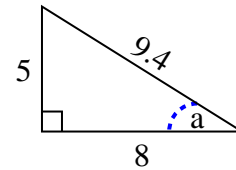
7)



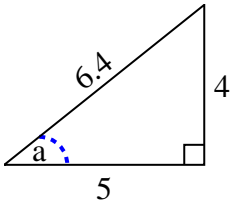
8)



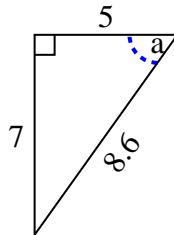
9)



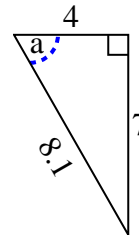
10)



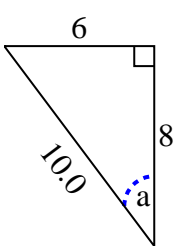
11)



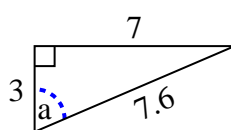
12)



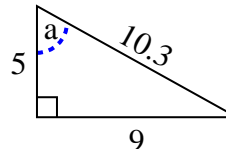
13)



14)



15)



1. 6, 3, 6.7
2. 7, 3, 7.6
3. 7, 4, 8.1
4. 5, 6, 7.8
5. 9, 5, 10.3
6. 8, 3, 8.5
7. 6, 8, 10.0
8. 9, 4, 9.8
9. 5, 8, 9.4
10. 4, 5, 6.4
11. 7, 5, 8.6
12. 7, 4, 8.1
13. 6, 8, 10.0
14. 7, 3, 7.6
15. 9, 5, 10.3