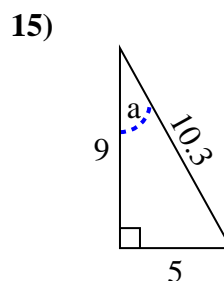
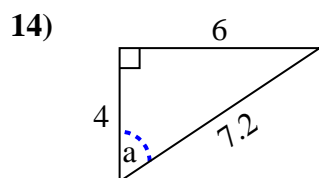
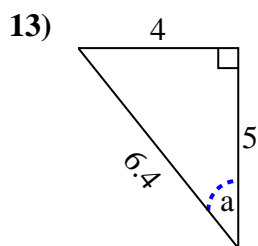
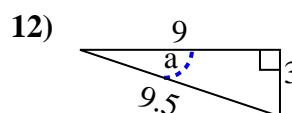
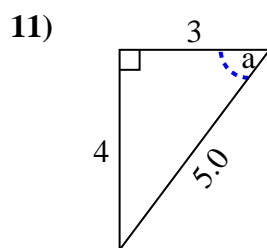
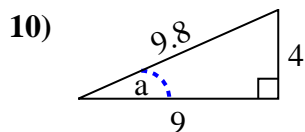
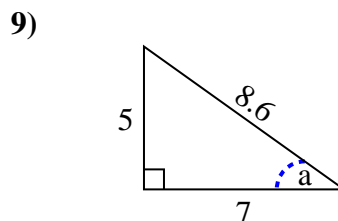
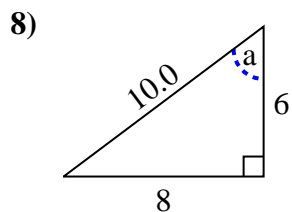
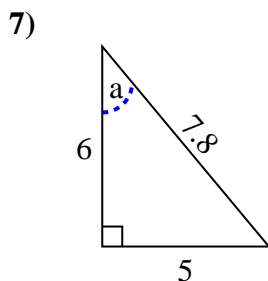
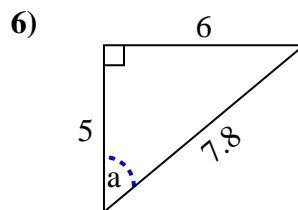
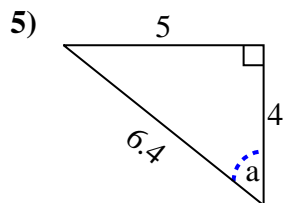
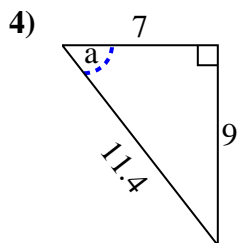
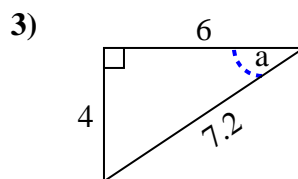
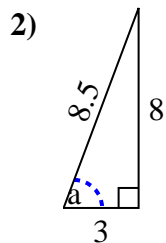
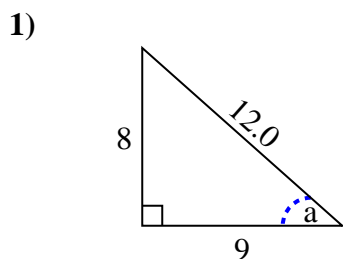


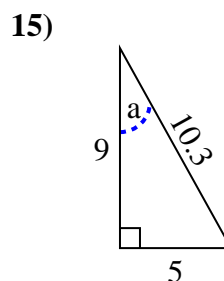
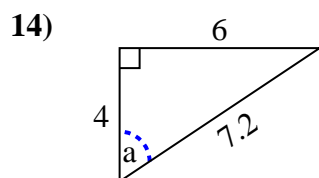
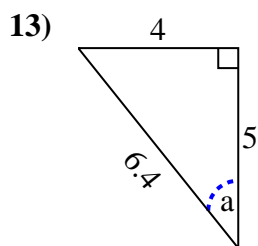
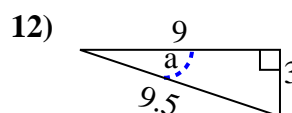
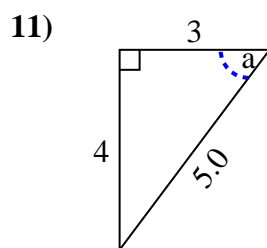
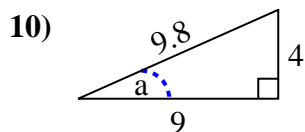
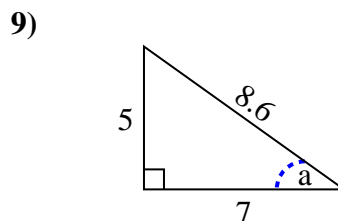
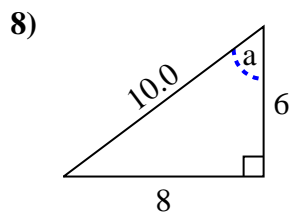
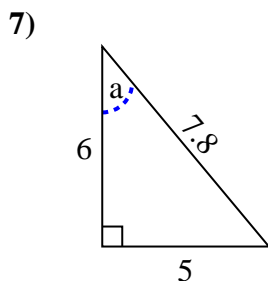
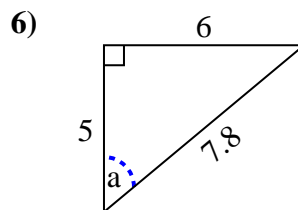
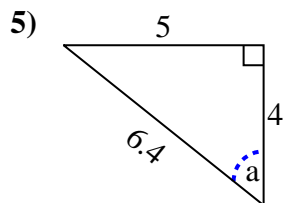
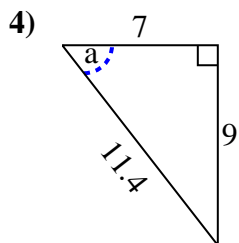
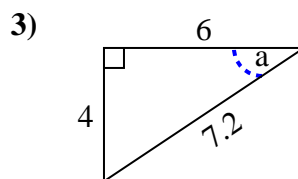
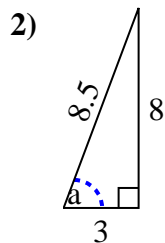
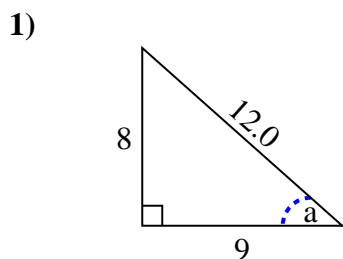


Identify the Opposite, Adjacent and Hypotenuse of Angle a.

Answers



1. _____
2. _____
3. _____
4. _____
5. _____
6. _____
7. _____
8. _____
9. _____
10. _____
11. _____
12. _____
13. _____
14. _____
15. _____

Identify the Opposite, Adjacent and Hypotenuse of Angle a .Answers1. 8, 9, 12.02. 8, 3, 8.53. 4, 6, 7.24. 9, 7, 11.45. 5, 4, 6.46. 6, 5, 7.87. 5, 6, 7.88. 8, 6, 10.09. 5, 7, 8.610. 4, 9, 9.811. 4, 3, 5.012. 3, 9, 9.513. 4, 5, 6.414. 6, 4, 7.215. 5, 9, 10.3