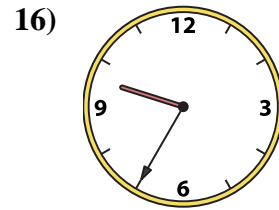
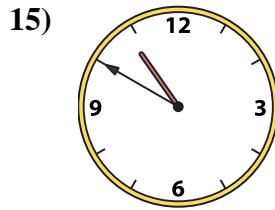
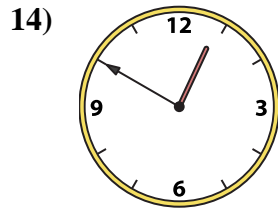
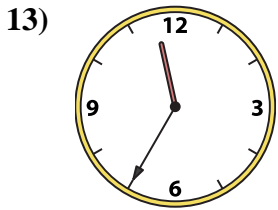
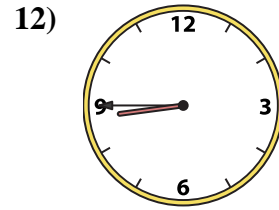
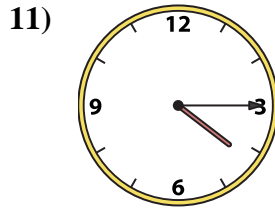
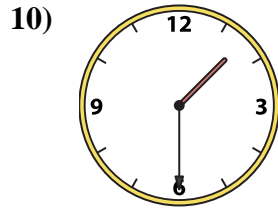
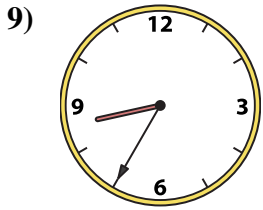
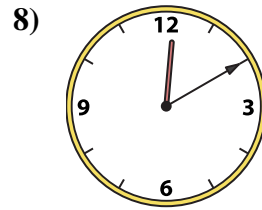
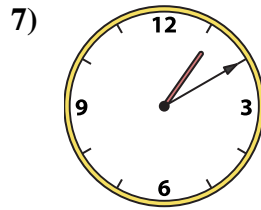
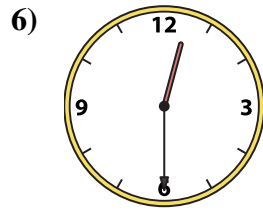
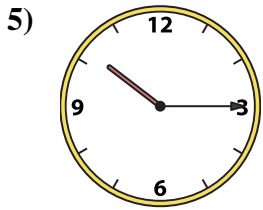
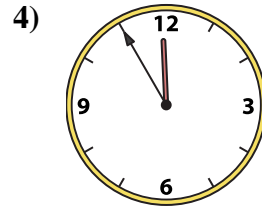
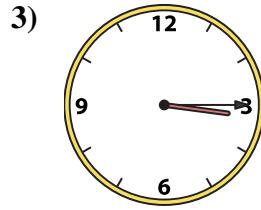
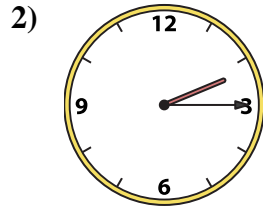
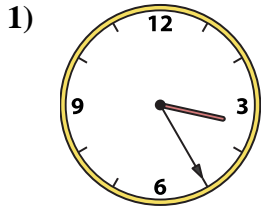




Match the analog clock to the digital clock.

Answers



A. 10:50

B. 3:25

C. 3:15

D. 4:15

E. 2:15

F. 11:55

G. 10:15

H. 1:10

I. 9:35

J. 8:35

K. 11:35

L. 8:45

M. 12:10

N. 12:30

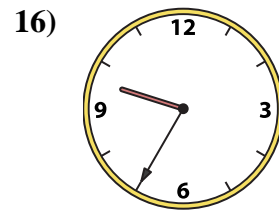
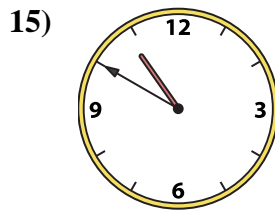
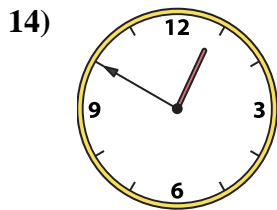
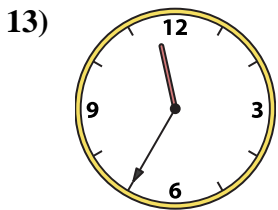
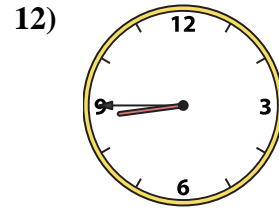
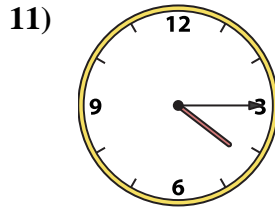
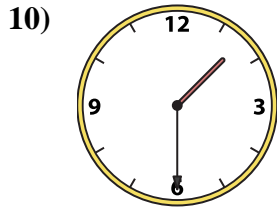
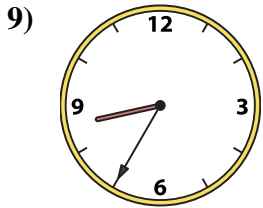
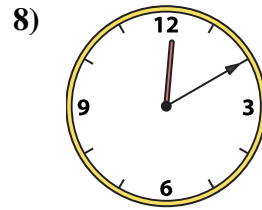
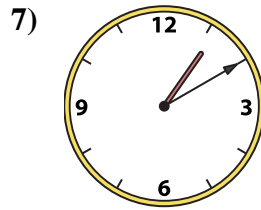
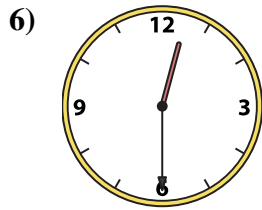
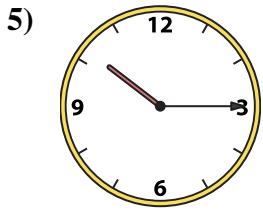
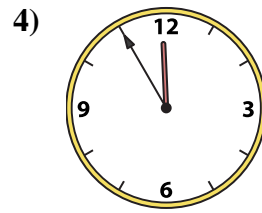
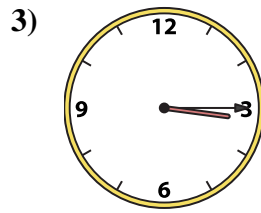
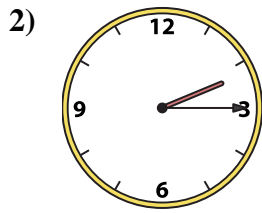
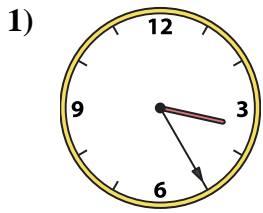
O. 12:50

P. 1:30

1. _____
2. _____
3. _____
4. _____
5. _____
6. _____
7. _____
8. _____
9. _____
10. _____
11. _____
12. _____
13. _____
14. _____
15. _____
16. _____



Match the analog clock to the digital clock.



A. **10:50**

B. **3:25**

C. **3:15**

D. **4:15**

E. **2:15**

F. **11:55**

G. **10:15**

H. **1:10**

I. **9:35**

J. **8:35**

K. **11:35**

L. **8:45**

M. **12:10**

N. **12:30**

O. **12:50**

P. **1:30**

Answers

1. **B**

2. **E**

3. **C**

4. **F**

5. **G**

6. **N**

7. **H**

8. **M**

9. **J**

10. **P**

11. **D**

12. **L**

13. **K**

14. **O**

15. **A**

16. **I**