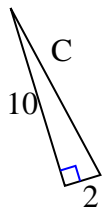


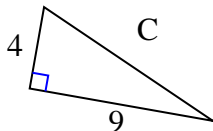


Find the value of 'C' round your answer to the nearest hundredth.

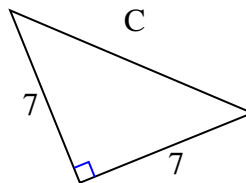
1)



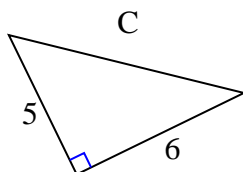
2)



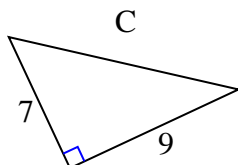
3)



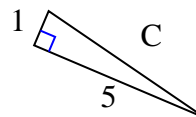
4)



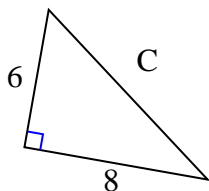
5)



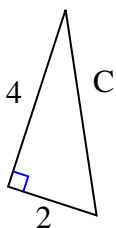
6)



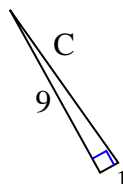
7)



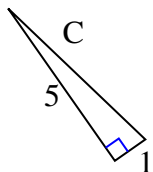
8)



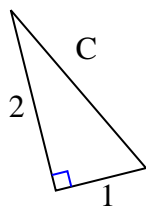
9)



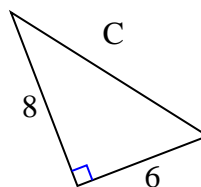
10)



11)



12)



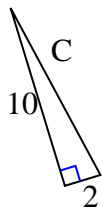
Answers

- 1. _____
- 2. _____
- 3. _____
- 4. _____
- 5. _____
- 6. _____
- 7. _____
- 8. _____
- 9. _____
- 10. _____
- 11. _____
- 12. _____



Find the value of 'C' round your answer to the nearest hundredth.

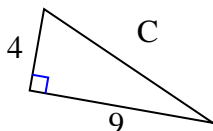
1)



$$100 + 4 = 104$$

$$\sqrt{104} = 10.2$$

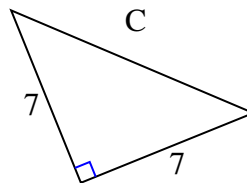
2)



$$16 + 81 = 97$$

$$\sqrt{97} = 9.85$$

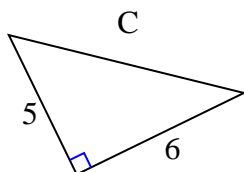
3)



$$49 + 49 = 98$$

$$\sqrt{98} = 9.9$$

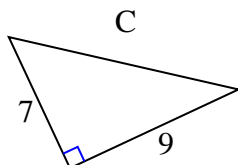
4)



$$25 + 36 = 61$$

$$\sqrt{61} = 7.81$$

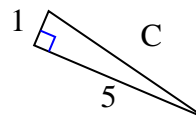
5)



$$49 + 81 = 130$$

$$\sqrt{130} = 11.4$$

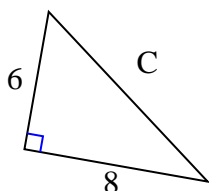
6)



$$1 + 25 = 26$$

$$\sqrt{26} = 5.1$$

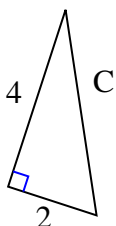
7)



$$36 + 64 = 100$$

$$\sqrt{100} = 10$$

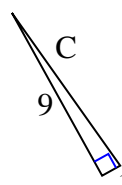
8)



$$16 + 4 = 20$$

$$\sqrt{20} = 4.47$$

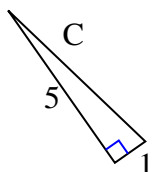
9)



$$81 + 1 = 82$$

$$\sqrt{82} = 9.06$$

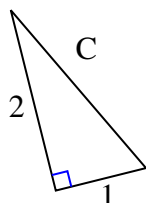
10)



$$25 + 1 = 26$$

$$\sqrt{26} = 5.1$$

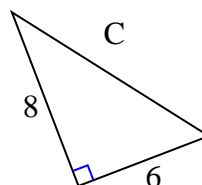
11)



$$4 + 1 = 5$$

$$\sqrt{5} = 2.24$$

12)



$$64 + 36 = 100$$

$$\sqrt{100} = 10$$

Answers1. 10.22. 9.853. 9.94. 7.815. 11.46. 5.17. 108. 4.479. 9.0610. 5.111. 2.2412. 10