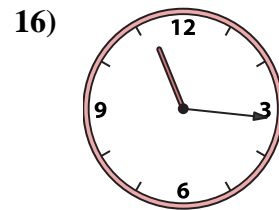
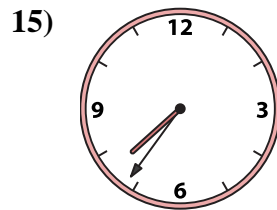
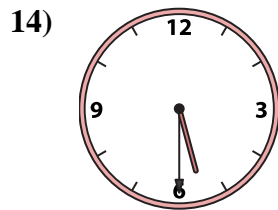
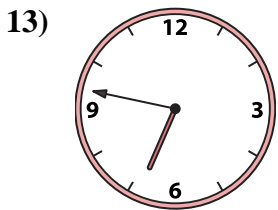
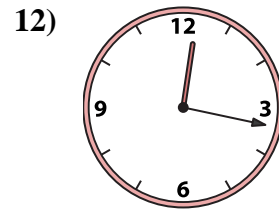
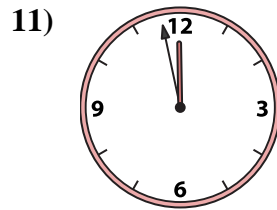
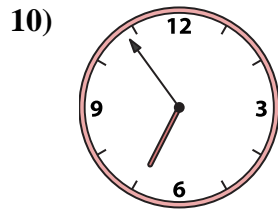
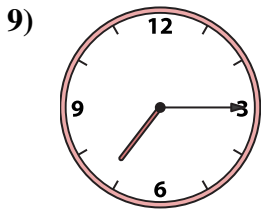
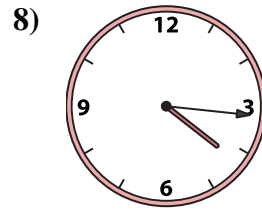

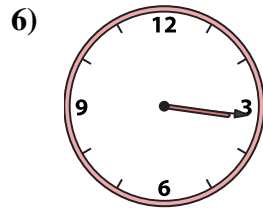
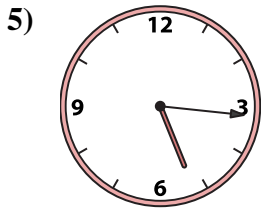
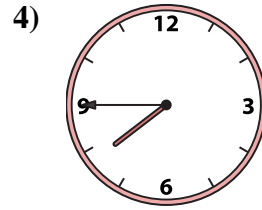
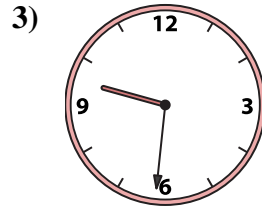
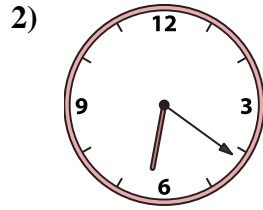





Match the analog clock to the digital clock.



A. 7:45

B. 5:16

C. 6:21

D. 7:15

E. 7:36

F. 6:54

G. 9:31

H. 4:16

I. 3:16

J. 5:30

K. 11:16

L. 11:49

M. 4:02

N. 6:47

O. 11:58

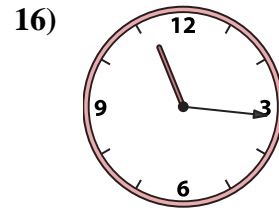
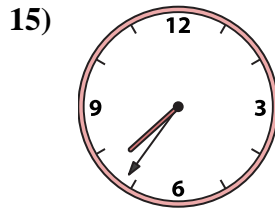
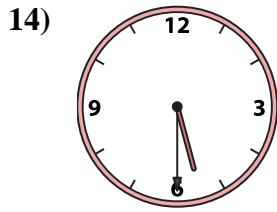
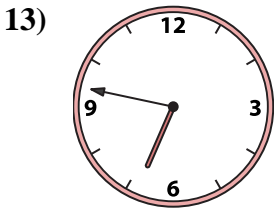
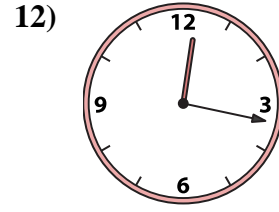
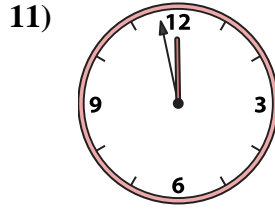
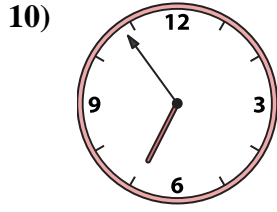
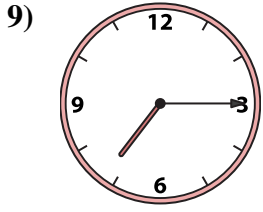
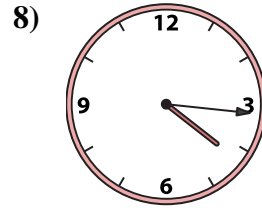
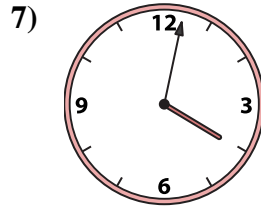
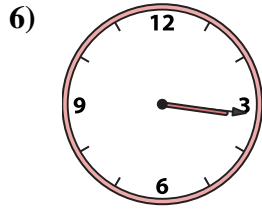
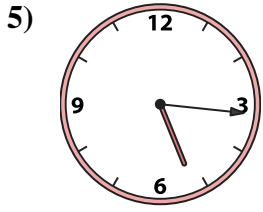
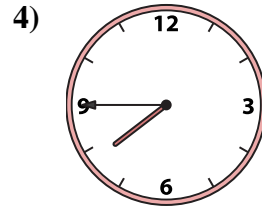
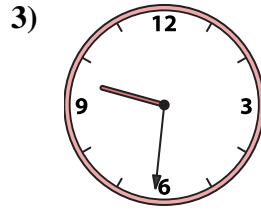
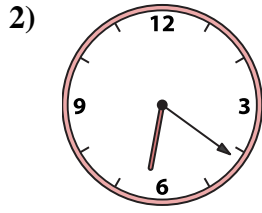

P. 12:17

Answers

1. _____
2. _____
3. _____
4. _____
5. _____
6. _____
7. _____
8. _____
9. _____
10. _____
11. _____
12. _____
13. _____
14. _____
15. _____
16. _____



Match the analog clock to the digital clock.



A. **7:45**

B. **5:16**

C. **6:21**

D. **7:15**

E. **7:36**

F. **6:54**

G. **9:31**

H. **4:16**

I. **3:16**

J. **5:30**

K. **11:16**

L. **11:49**

M. **4:02**

N. **6:47**

O. **11:58**

P. **12:17**

Answers

1. **L**

2. **C**

3. **G**

4. **A**

5. **B**

6. **I**

7. **M**

8. **H**

9. **D**

10. **F**

11. **O**

12. **P**

13. **N**

14. **J**

15. **E**

16. **K**