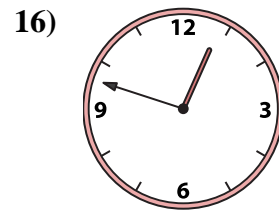
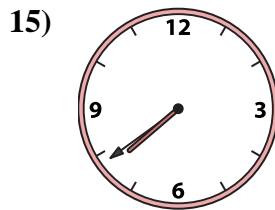
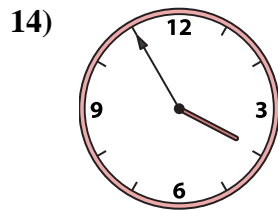
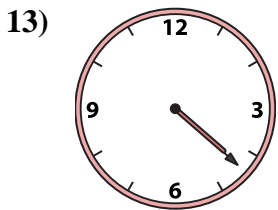
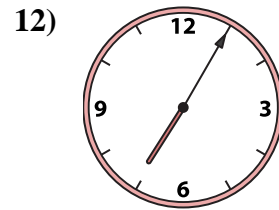
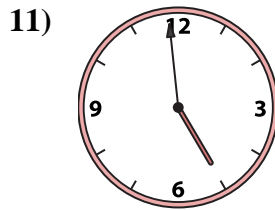
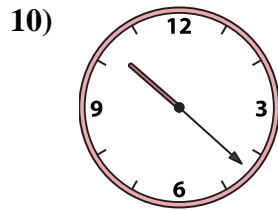
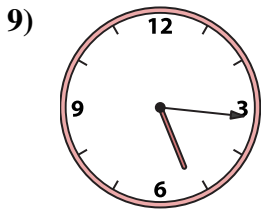
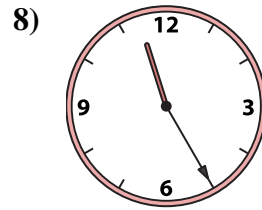
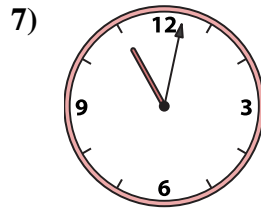
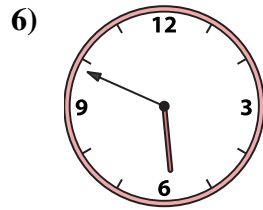
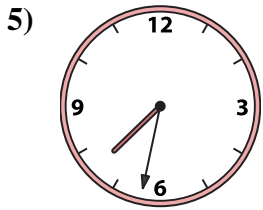
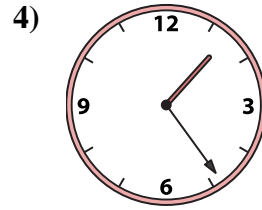
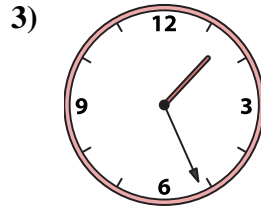
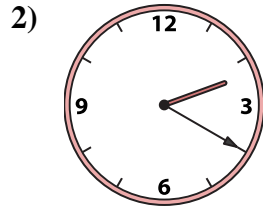





Match the analog clock to the digital clock.



A. 11:02

B. 1:24

C. 11:25

D. 5:16

E. 4:59

F. 4:22

G. 3:55

H. 5:49

I. 7:32

J. 1:01

K. 1:26

L. 12:48

M. 7:39

N. 2:20

O. 10:22

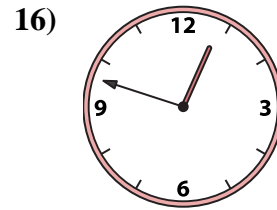
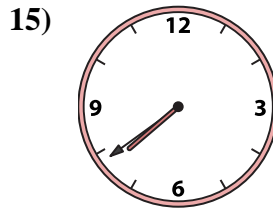
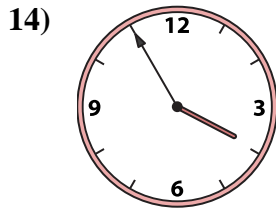
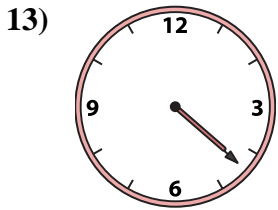
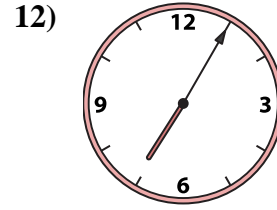
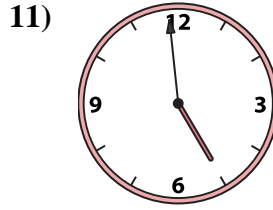
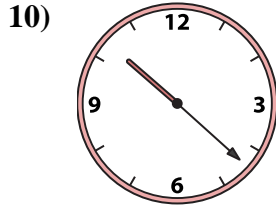
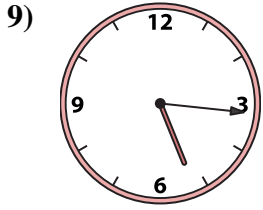
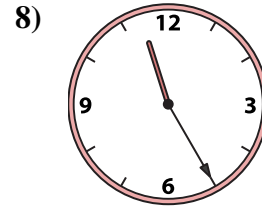
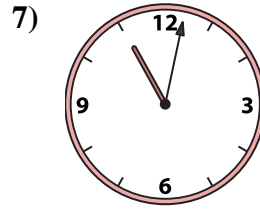
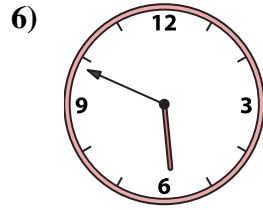
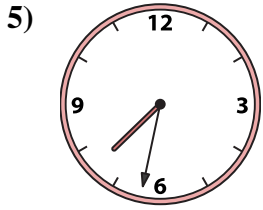
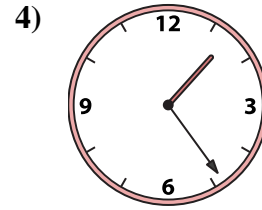
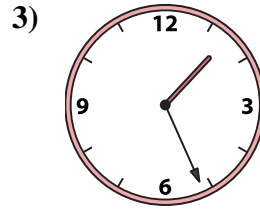
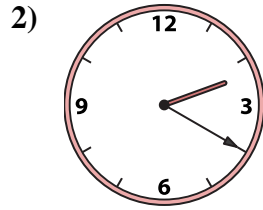

P. 7:05

Answers

1. _____
2. _____
3. _____
4. _____
5. _____
6. _____
7. _____
8. _____
9. _____
10. _____
11. _____
12. _____
13. _____
14. _____
15. _____
16. _____



Match the analog clock to the digital clock.



A. 11:02

B. 1:24

C. 11:25

D. 5:16

E. 4:59

F. 4:22

G. 3:55

H. 5:49

I. 7:32

J. 1:01

K. 1:26

L. 12:48

M. 7:39

N. 2:20

O. 10:22

P. 7:05

Answers

1. **J**

2. **N**

3. **K**

4. **B**

5. **I**

6. **H**

7. **A**

8. **C**

9. **D**

10. **O**

11. **E**

12. **P**

13. **F**

14. **G**

15. **M**

16. **L**