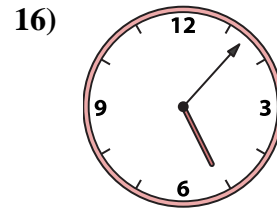
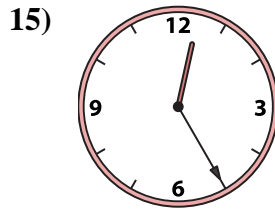
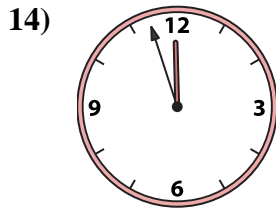
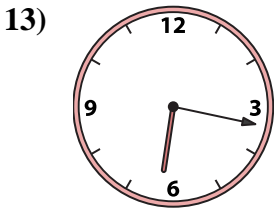
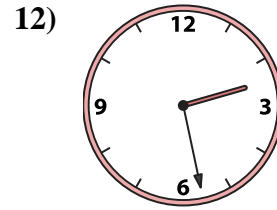
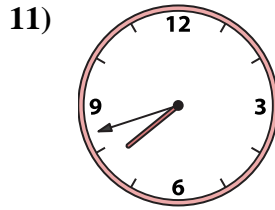
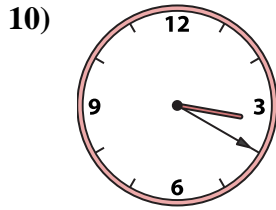
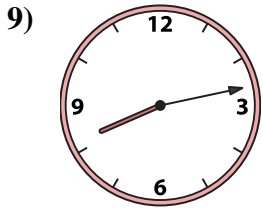
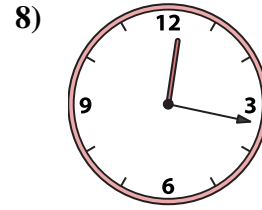
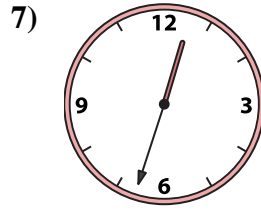
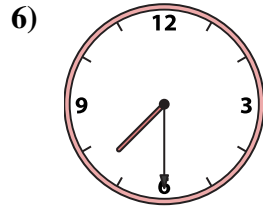
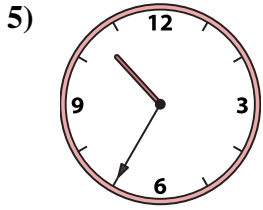
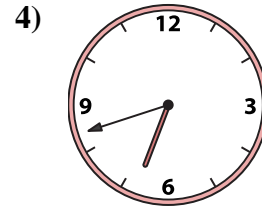
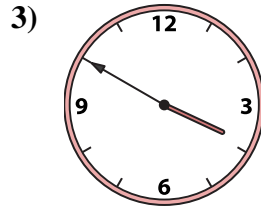
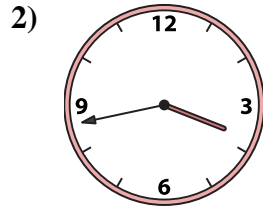
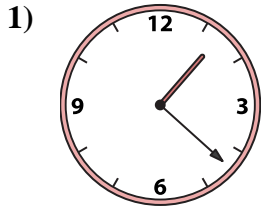




Match the analog clock to the digital clock.



Answers

1. _____
2. _____
3. _____
4. _____
5. _____
6. _____
7. _____
8. _____
9. _____
10. _____
11. _____
12. _____
13. _____
14. _____
15. _____
16. _____

A. **10:35**

B. **2:28**

C. **7:42**

D. **12:33**

E. **6:42**

F. **1:22**

G. **12:25**

H. **6:17**

I. **3:50**

J. **3:20**

K. **11:57**

L. **5:07**

M. **7:30**

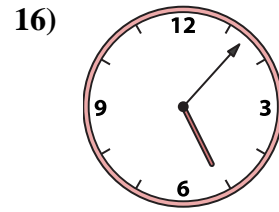
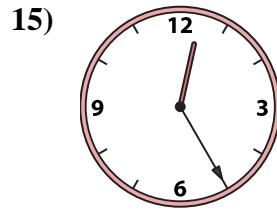
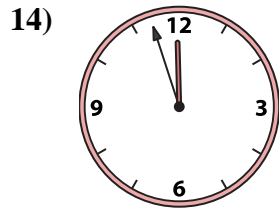
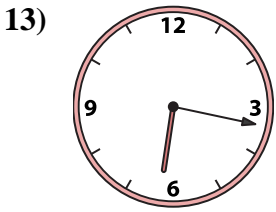
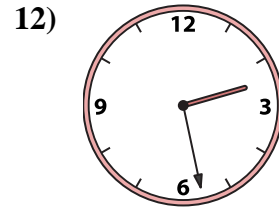
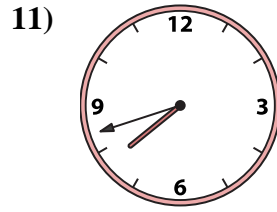
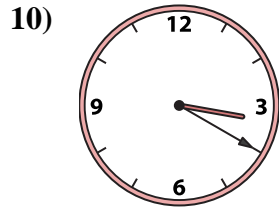
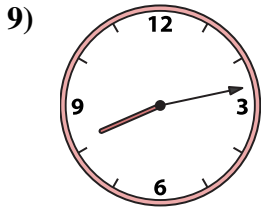
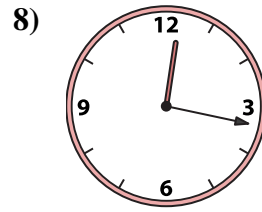
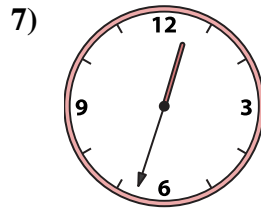
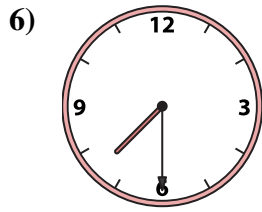
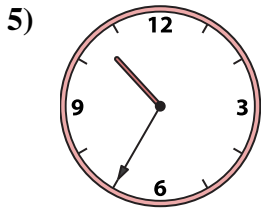
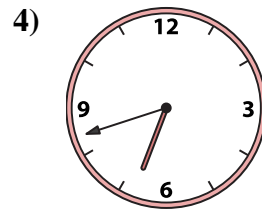
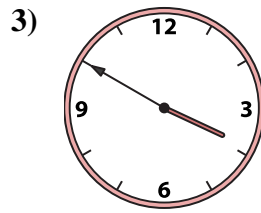
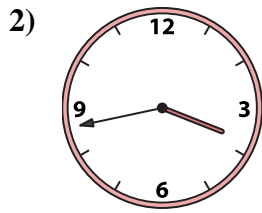
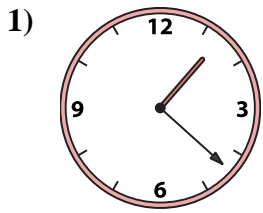
N. **3:43**

O. **8:13**

P. **12:17**



Match the analog clock to the digital clock.



A. 10:35

B. 2:28

C. 7:42

D. 12:33

E. 6:42

F. 1:22

G. 12:25

H. 6:17

I. 3:50

J. 3:20

K. 11:57

L. 5:07

M. 7:30

N. 3:43

O. 8:13

P. 12:17

Answers

1. **F**

2. **N**

3. **I**

4. **E**

5. **A**

6. **M**

7. **D**

8. **P**

9. **O**

10. **J**

11. **C**

12. **B**

13. **H**

14. **K**

15. **G**

16. **L**