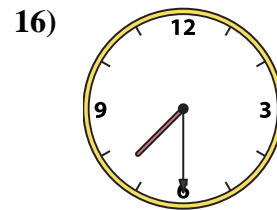
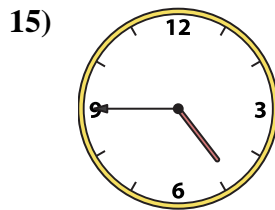
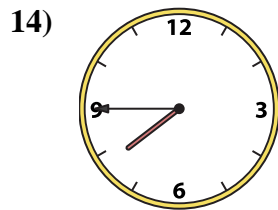
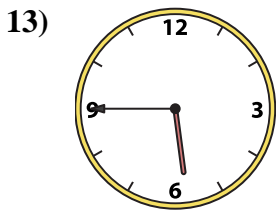
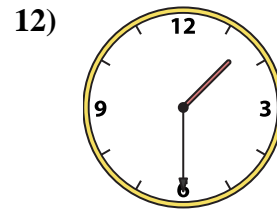
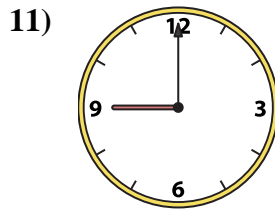
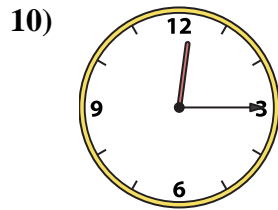
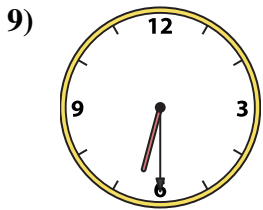
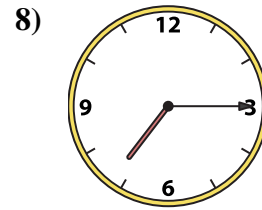
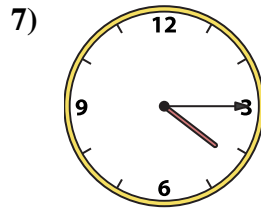
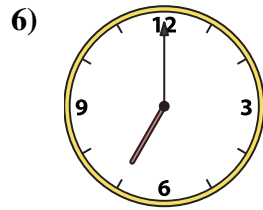
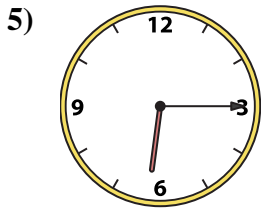
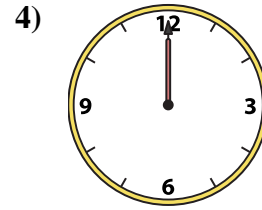
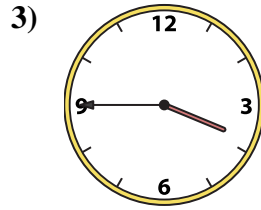
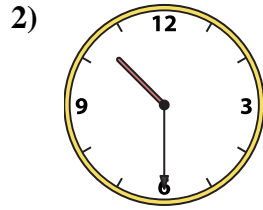
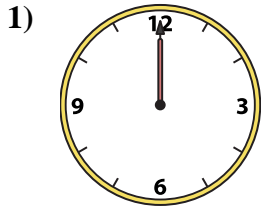




Match the analog clock to the digital clock.



A. 7:15

B. 12:00

C. 9:00

D. 7:00

E. 6:15

F. 1:30

G. 3:45

H. 7:45

I. 5:45

J. 12:15

K. 10:30

L. 4:15

M. 4:45

N. 12:00

O. 7:30

P. 6:30

Answers

1. _____

2. _____

3. _____

4. _____

5. _____

6. _____

7. _____

8. _____

9. _____

10. _____

11. _____

12. _____

13. _____

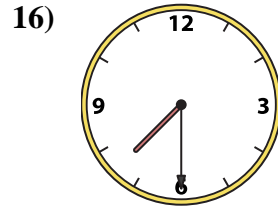
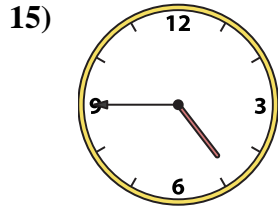
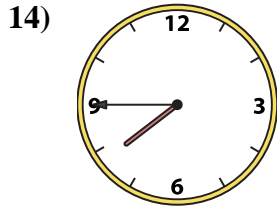
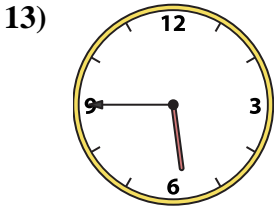
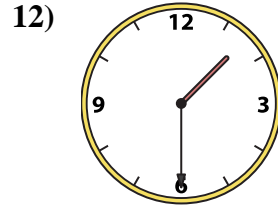
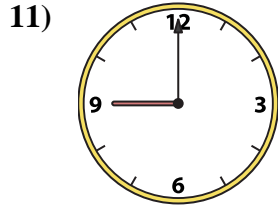
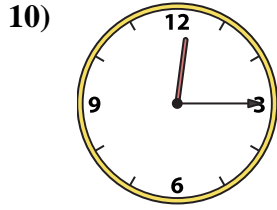
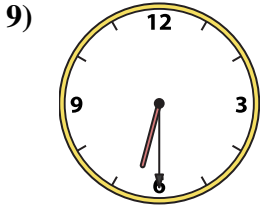
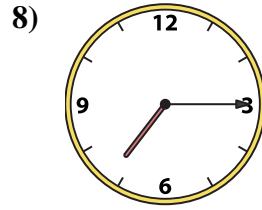
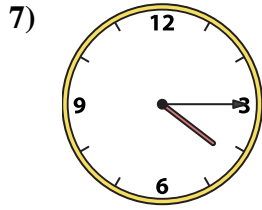
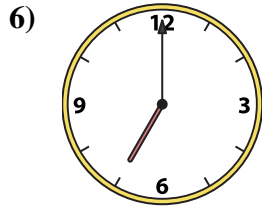
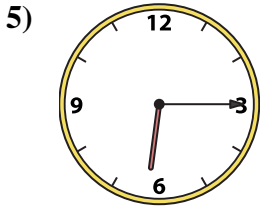
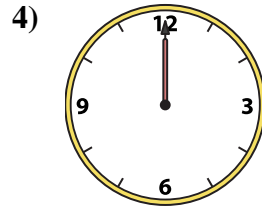
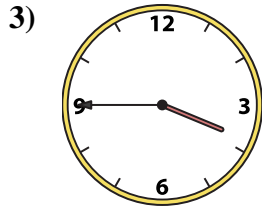
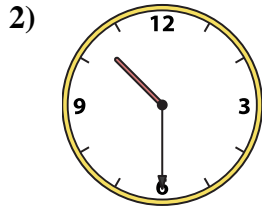
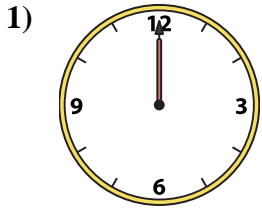
14. _____

15. _____

16. _____



Match the analog clock to the digital clock.



A. **7:15**

B. **12:00**

C. **9:00**

D. **7:00**

E. **6:15**

F. **1:30**

G. **3:45**

H. **7:45**

I. **5:45**

J. **12:15**

K. **10:30**

L. **4:15**

M. **4:45**

N. **12:00**

O. **7:30**

P. **6:30**

Answers

1. **B**

2. **K**

3. **G**

4. **N**

5. **E**

6. **D**

7. **L**

8. **A**

9. **P**

10. **J**

11. **C**

12. **F**

13. **I**

14. **H**

15. **M**

16. **O**