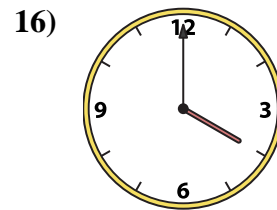
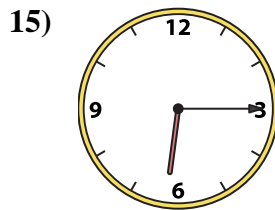
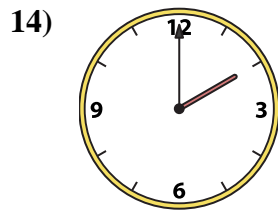
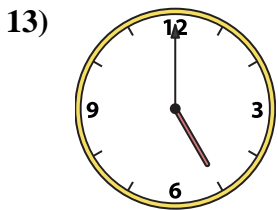
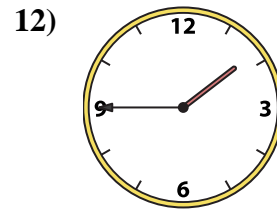
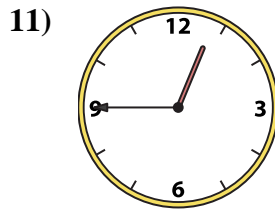
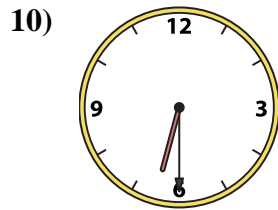
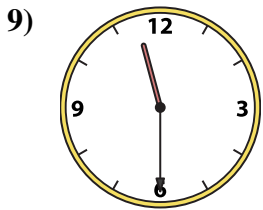
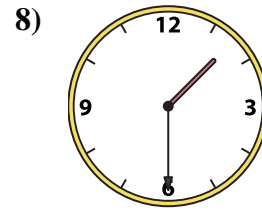
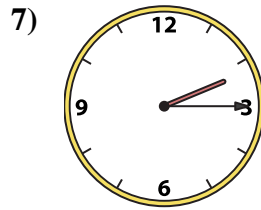
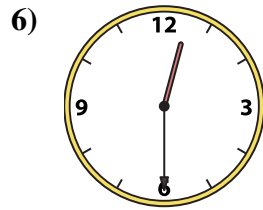
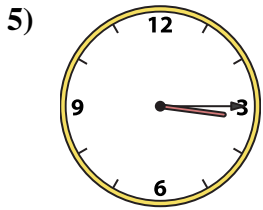
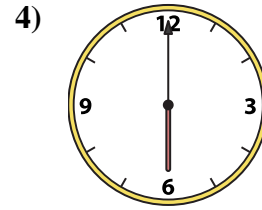
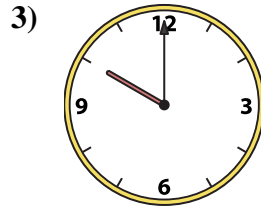
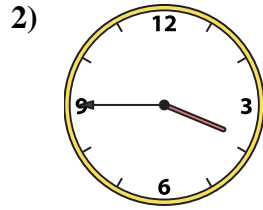
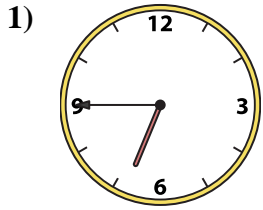




Match the analog clock to the digital clock.



A. 6:30

B. 6:15

C. 1:30

D. 5:00

E. 6:00

F. 6:45

G. 2:15

H. 12:45

I. 11:30

J. 2:00

K. 3:45

L. 12:30

M. 4:00

N. 10:00

O. 3:15

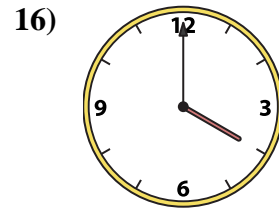
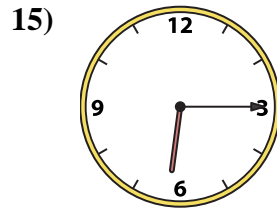
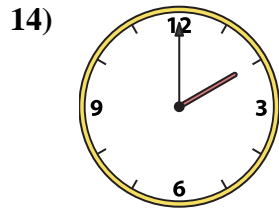
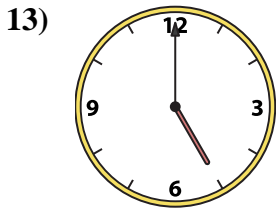
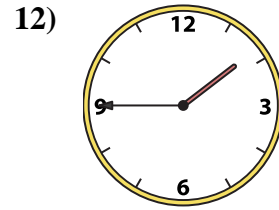
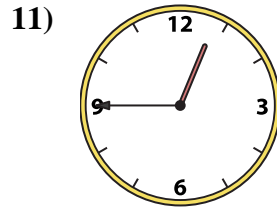
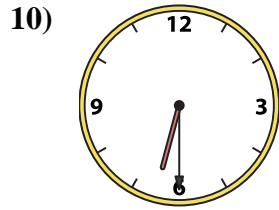
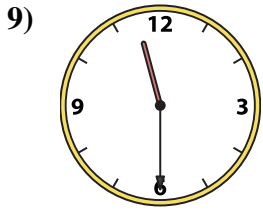
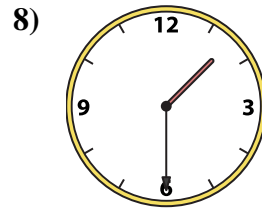
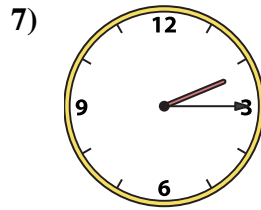
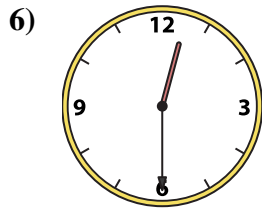
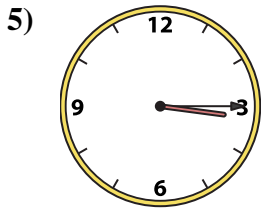
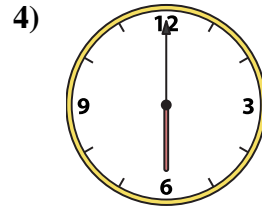
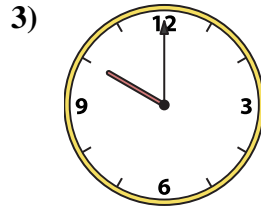
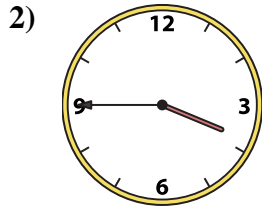
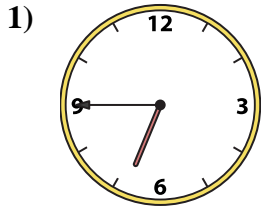
P. 1:45

Answers

1. \_\_\_\_\_
2. \_\_\_\_\_
3. \_\_\_\_\_
4. \_\_\_\_\_
5. \_\_\_\_\_
6. \_\_\_\_\_
7. \_\_\_\_\_
8. \_\_\_\_\_
9. \_\_\_\_\_
10. \_\_\_\_\_
11. \_\_\_\_\_
12. \_\_\_\_\_
13. \_\_\_\_\_
14. \_\_\_\_\_
15. \_\_\_\_\_
16. \_\_\_\_\_



Match the analog clock to the digital clock.



A. 6:30

B. 6:15

C. 1:30

D. 5:00

E. 6:00

F. 6:45

G. 2:15

H. 12:45

I. 11:30

J. 2:00

K. 3:45

L. 12:30

M. 4:00

N. 10:00

O. 3:15

P. 1:45

**Answers**

1. **F**

2. **K**

3. **N**

4. **E**

5. **O**

6. **L**

7. **G**

8. **C**

9. **I**

10. **A**

11. **H**

12. **P**

13. **D**

14. **J**

15. **B**

16. **M**