



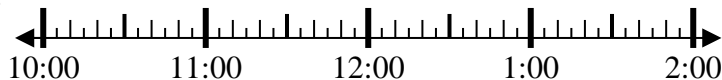
Solve each problem.

Answers

1) Start: _____

Elapsed: 2 hrs & 30 mins

End: 1:20



1. _____

2) Start: _____

Elapsed: 1 hr & 25 mins

End: 6:35



2. _____

3) Start: _____

Elapsed: 1 hr & 35 mins

End: 1:15



3. _____

4) Start: _____

Elapsed: 2 hrs & 15 mins

End: 6:35



4. _____

5) Start: _____

Elapsed: 2 hrs & 25 mins

End: 7:40

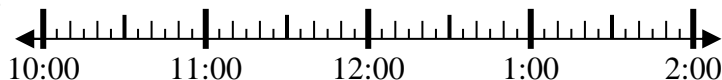


5. _____

6) Start: _____

Elapsed: 2 hrs & 35 mins

End: 12:55



6. _____

7) Start: _____

Elapsed: 2 hrs & 50 mins

End: 3:35



7. _____

8) Start: _____

Elapsed: 1 hr & 30 mins

End: 12:10



8. _____



Solve each problem.

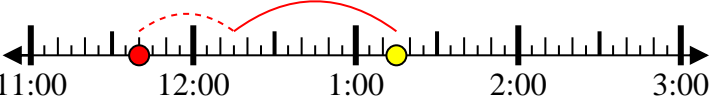
1) Start: 10:50
 Elapsed: 2 hrs & 30 mins
 End: 1:20



2) Start: 5:10
 Elapsed: 1 hr & 25 mins
 End: 6:35



3) Start: 11:40
 Elapsed: 1 hr & 35 mins
 End: 1:15



4) Start: 4:20
 Elapsed: 2 hrs & 15 mins
 End: 6:35



5) Start: 5:15
 Elapsed: 2 hrs & 25 mins
 End: 7:40



6) Start: 10:20
 Elapsed: 2 hrs & 35 mins
 End: 12:55



7) Start: 12:45
 Elapsed: 2 hrs & 50 mins
 End: 3:35



8) Start: 10:40
 Elapsed: 1 hr & 30 mins
 End: 12:10



Answers

1. 10:50
2. 5:10
3. 11:40
4. 4:20
5. 5:15
6. 10:20
7. 12:45
8. 10:40