



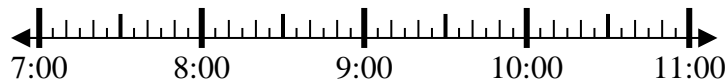
Solve each problem.

Answers

1) Start: _____

Elapsed: 2 hrs & 20 mins

End: 9:25



1. _____

2) Start: _____

Elapsed: 2 hrs & 20 mins

End: 7:45



2. _____

3) Start: _____

Elapsed: 1 hr & 35 mins

End: 5:50



3. _____

4) Start: _____

Elapsed: 2 hrs & 40 mins

End: 2:45

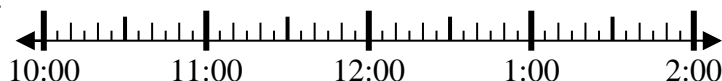


4. _____

5) Start: _____

Elapsed: 1 hr & 45 mins

End: 11:50

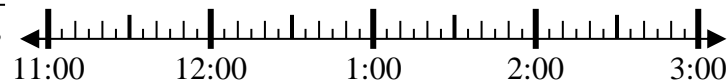


5. _____

6) Start: _____

Elapsed: 2 hrs & 15 mins

End: 2:00



6. _____

7) Start: _____

Elapsed: 1 hr & 40 mins

End: 7:05



7. _____

8) Start: _____

Elapsed: 1 hr & 15 mins

End: 2:40



8. _____



Solve each problem.

1) Start: 7:05
 Elapsed: 2 hrs & 20 mins
 End: 9:25

2) Start: 5:25
 Elapsed: 2 hrs & 20 mins
 End: 7:45

3) Start: 4:15
 Elapsed: 1 hr & 35 mins
 End: 5:50

4) Start: 12:05
 Elapsed: 2 hrs & 40 mins
 End: 2:45

5) Start: 10:05
 Elapsed: 1 hr & 45 mins
 End: 11:50

6) Start: 11:45
 Elapsed: 2 hrs & 15 mins
 End: 2:00

7) Start: 5:25
 Elapsed: 1 hr & 40 mins
 End: 7:05

8) Start: 1:25
 Elapsed: 1 hr & 15 mins
 End: 2:40

Answers

1. 7:05

2. 5:25

3. 4:15

4. 12:05

5. 10:05

6. 11:45

7. 5:25

8. 1:25