



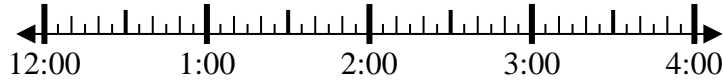
Solve each problem.

Answers

1) Start: 12:40

Elapsed: 1 hr & 45 mins

End: _____

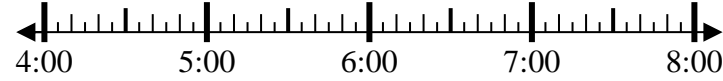


1. _____

2) Start: 4:55

Elapsed: 2 hrs & 20 mins

End: _____

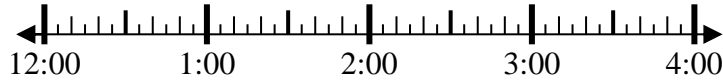


2. _____

3) Start: 12:30

Elapsed: 2 hrs & 45 mins

End: _____

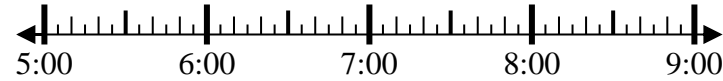


3. _____

4) Start: 5:25

Elapsed: 1 hr & 20 mins

End: _____



4. _____

5) Start: 8:30

Elapsed: 2 hrs & 30 mins

End: _____



5. _____

6) Start: 3:25

Elapsed: 2 hrs & 25 mins

End: _____



6. _____

7) Start: 7:15

Elapsed: 2 hrs & 45 mins

End: _____

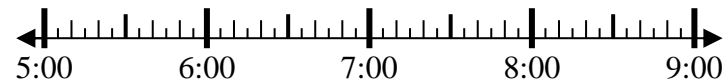


7. _____

8) Start: 5:20

Elapsed: 1 hr & 30 mins

End: _____



8. _____



Solve each problem.

1) Start: 12:40

Elapsed: 1 hr & 45 mins

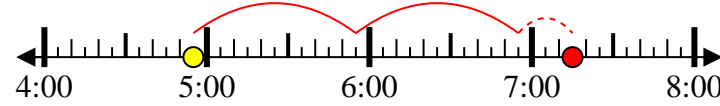
End: 2:25



2) Start: 4:55

Elapsed: 2 hrs & 20 mins

End: 7:15



3) Start: 12:30

Elapsed: 2 hrs & 45 mins

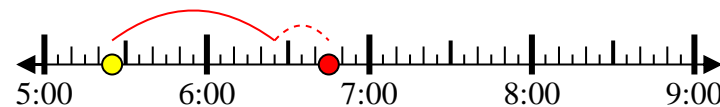
End: 3:15



4) Start: 5:25

Elapsed: 1 hr & 20 mins

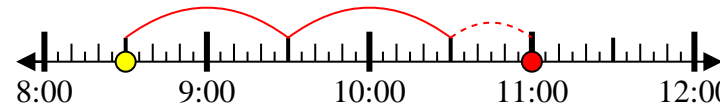
End: 6:45



5) Start: 8:30

Elapsed: 2 hrs & 30 mins

End: 11:00



6) Start: 3:25

Elapsed: 2 hrs & 25 mins

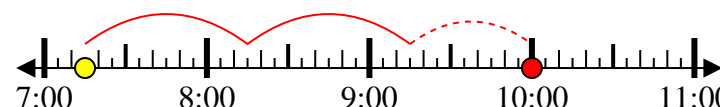
End: 5:50



7) Start: 7:15

Elapsed: 2 hrs & 45 mins

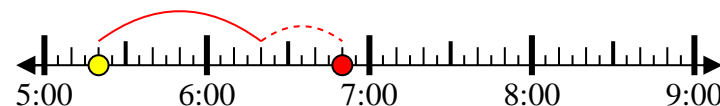
End: 10:00



8) Start: 5:20

Elapsed: 1 hr & 30 mins

End: 6:50



Answers

1. 2:25

2. 7:15

3. 3:15

4. 6:45

5. 11:00

6. 5:50

7. 10:00

8. 6:50