



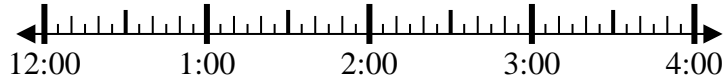
Solve each problem.

Answers

1) Start: 12:10

Elapsed: 1 hr & 25 mins

End: _____

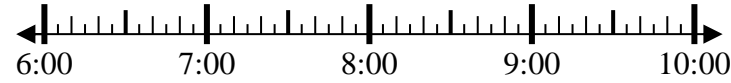


1. _____

2) Start: 6:40

Elapsed: 2 hrs & 10 mins

End: _____

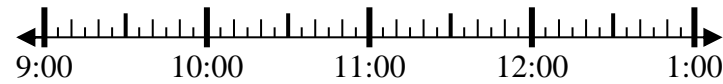


2. _____

3) Start: 9:05

Elapsed: 2 hrs & 50 mins

End: _____

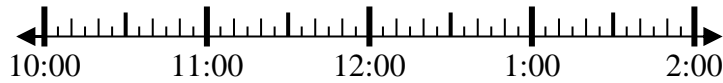


3. _____

4) Start: 10:45

Elapsed: 2 hrs & 40 mins

End: _____



4. _____

5) Start: 5:35

Elapsed: 1 hr & 30 mins

End: _____



5. _____

6) Start: 8:15

Elapsed: 2 hrs & 25 mins

End: _____

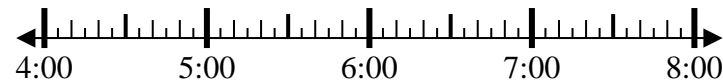


6. _____

7) Start: 4:10

Elapsed: 2 hrs & 55 mins

End: _____



7. _____

8) Start: 4:00

Elapsed: 2 hrs & 20 mins

End: _____



8. _____



Solve each problem.

1) Start: 12:10

Elapsed: 1 hr & 25 mins

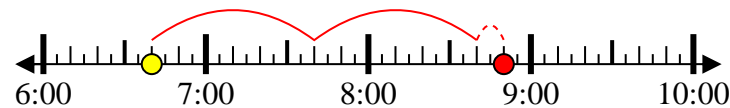
End: 1:35



2) Start: 6:40

Elapsed: 2 hrs & 10 mins

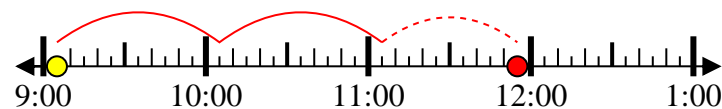
End: 8:50



3) Start: 9:05

Elapsed: 2 hrs & 50 mins

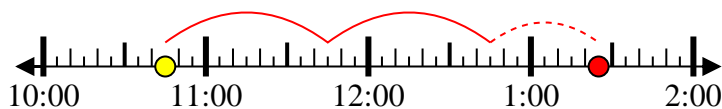
End: 11:55



4) Start: 10:45

Elapsed: 2 hrs & 40 mins

End: 1:25



5) Start: 5:35

Elapsed: 1 hr & 30 mins

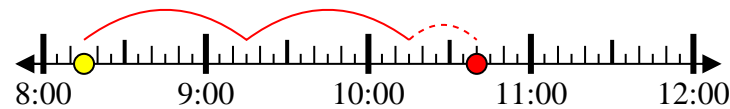
End: 7:05



6) Start: 8:15

Elapsed: 2 hrs & 25 mins

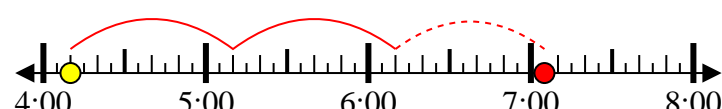
End: 10:40



7) Start: 4:10

Elapsed: 2 hrs & 55 mins

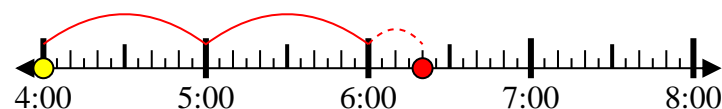
End: 7:05



8) Start: 4:00

Elapsed: 2 hrs & 20 mins

End: 6:20



Answers

1. 1:35

2. 8:50

3. 11:55

4. 1:25

5. 7:05

6. 10:40

7. 7:05

8. 6:20