



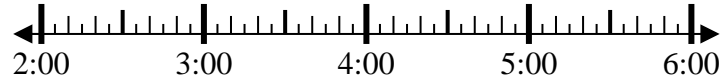
Solve each problem.

Answers

1) Start: 2:00

Elapsed: 1 hr & 45 mins

End: _____

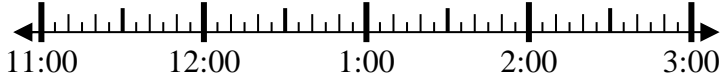


1. _____

2) Start: 11:35

Elapsed: 2 hrs & 45 mins

End: _____

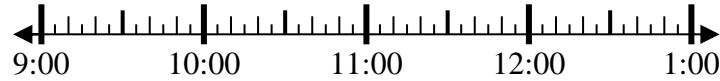


2. _____

3) Start: 9:00

Elapsed: 1 hr & 10 mins

End: _____

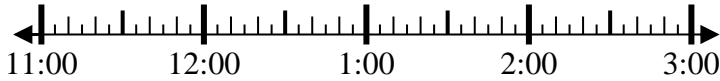


3. _____

4) Start: 11:45

Elapsed: 1 hr & 20 mins

End: _____



4. _____

5) Start: 12:20

Elapsed: 1 hr & 15 mins

End: _____

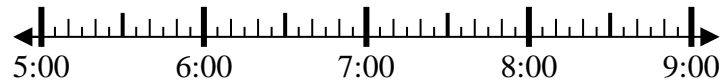


5. _____

6) Start: 5:25

Elapsed: 1 hr & 10 mins

End: _____

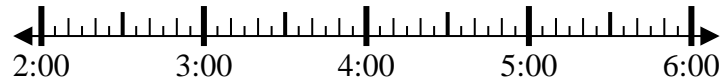


6. _____

7) Start: 2:35

Elapsed: 1 hr & 45 mins

End: _____

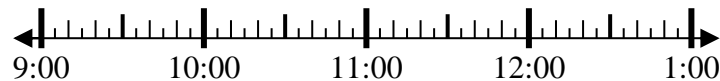


7. _____

8) Start: 9:35

Elapsed: 2 hrs & 45 mins

End: _____

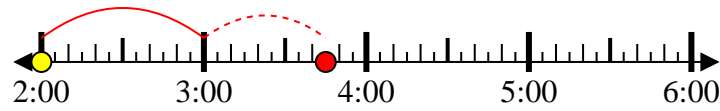


8. _____

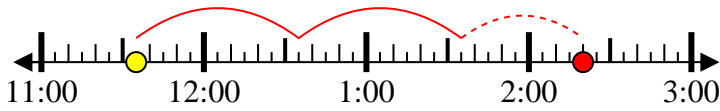


Solve each problem.

1) Start: 2:00
Elapsed: 1 hr & 45 mins
End: 3:45



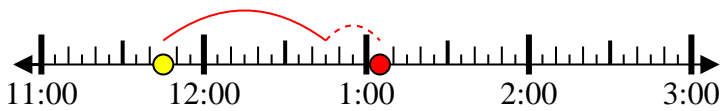
2) Start: 11:35
Elapsed: 2 hrs & 45 mins
End: 2:20



3) Start: 9:00
Elapsed: 1 hr & 10 mins
End: 10:10



4) Start: 11:45
Elapsed: 1 hr & 20 mins
End: 1:05



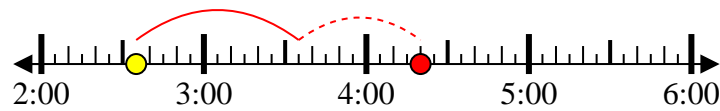
5) Start: 12:20
Elapsed: 1 hr & 15 mins
End: 1:35



6) Start: 5:25
Elapsed: 1 hr & 10 mins
End: 6:35



7) Start: 2:35
Elapsed: 1 hr & 45 mins
End: 4:20



8) Start: 9:35
Elapsed: 2 hrs & 45 mins
End: 12:20



Answers

1. 3:45
2. 2:20
3. 10:10
4. 1:05
5. 1:35
6. 6:35
7. 4:20
8. 12:20