



Solve each problem.

Answers

1) Start:10:50

Elapsed:2 hrs & 30 mins

End: _____

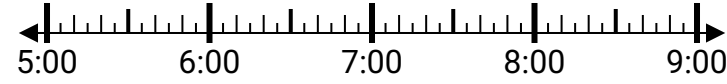


1. _____

2) Start:5:10

Elapsed:1 hr & 25 mins

End: _____



2. _____

3) Start:11:40

Elapsed:1 hr & 35 mins

End: _____

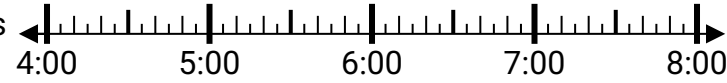


3. _____

4) Start:4:20

Elapsed:2 hrs & 15 mins

End: _____

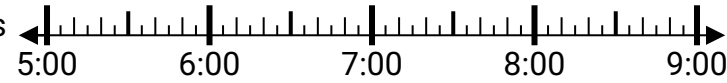


4. _____

5) Start:5:15

Elapsed:2 hrs & 25 mins

End: _____



5. _____

6) Start:10:20

Elapsed:2 hrs & 35 mins

End: _____



6. _____

7) Start:12:45

Elapsed:2 hrs & 50 mins

End: _____



7. _____

8) Start:10:40

Elapsed:1 hr & 30 mins

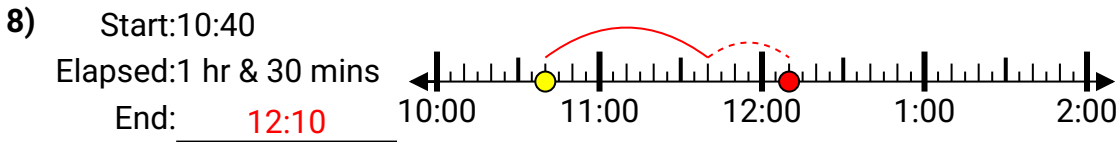
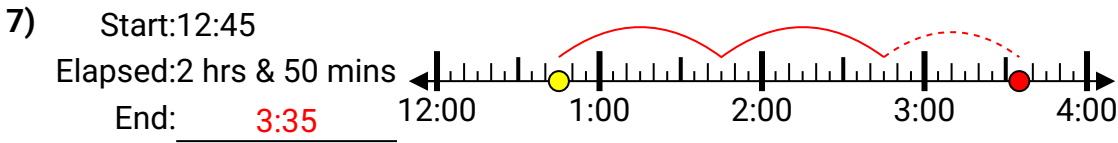
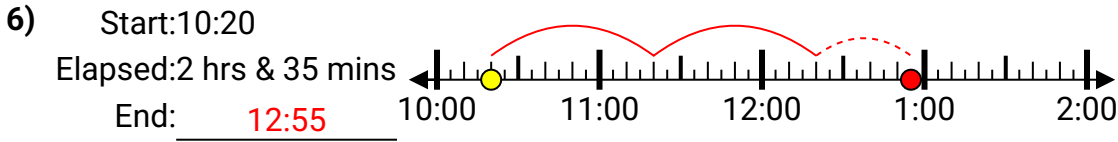
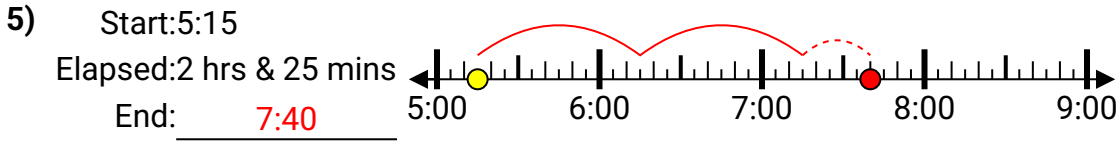
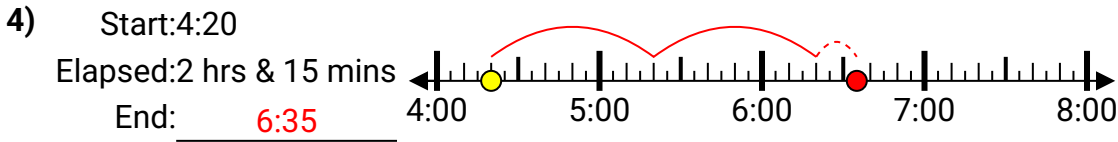
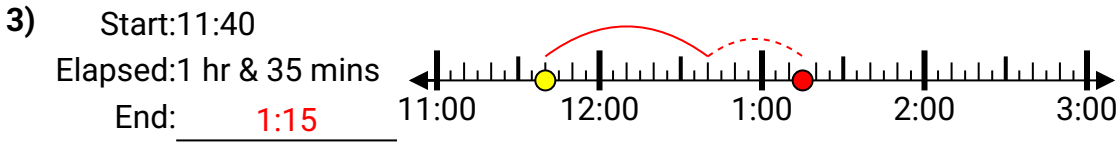
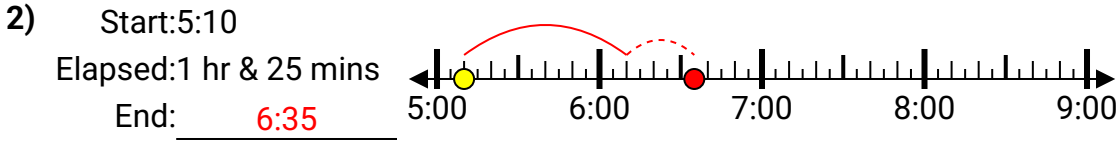
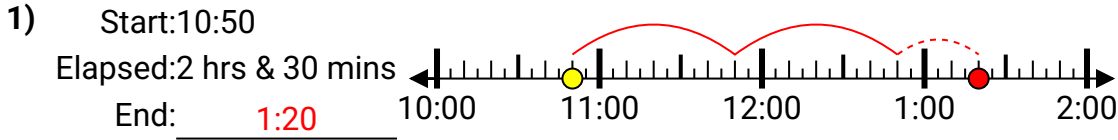
End: _____



8. _____



Solve each problem.



Answers

1. 1:20
2. 6:35
3. 1:15
4. 6:35
5. 7:40
6. 12:55
7. 3:35
8. 12:10