



Solve each problem.

Answers

1) Start: 12:10

Elapsed: \_\_\_\_\_

End: 1:35

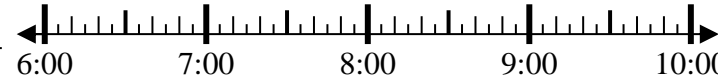


1. \_\_\_\_\_

2) Start: 6:40

Elapsed: \_\_\_\_\_

End: 8:50

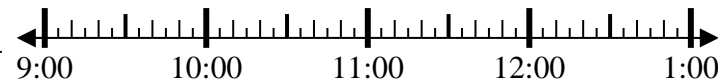


2. \_\_\_\_\_

3) Start: 9:05

Elapsed: \_\_\_\_\_

End: 11:55

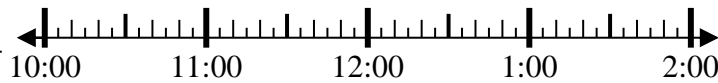


3. \_\_\_\_\_

4) Start: 10:45

Elapsed: \_\_\_\_\_

End: 1:25

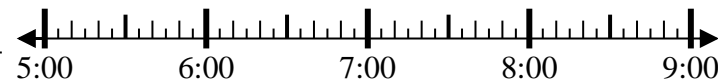


4. \_\_\_\_\_

5) Start: 5:35

Elapsed: \_\_\_\_\_

End: 7:05

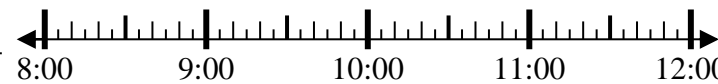


5. \_\_\_\_\_

6) Start: 8:15

Elapsed: \_\_\_\_\_

End: 10:40



6. \_\_\_\_\_

7) Start: 4:10

Elapsed: \_\_\_\_\_

End: 7:05



7. \_\_\_\_\_

8) Start: 4:00

Elapsed: \_\_\_\_\_

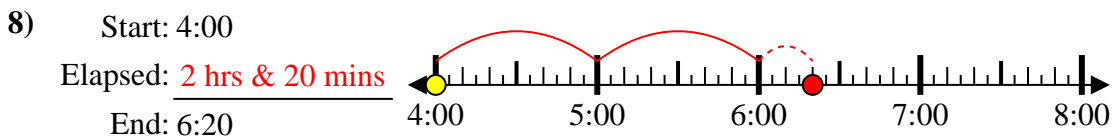
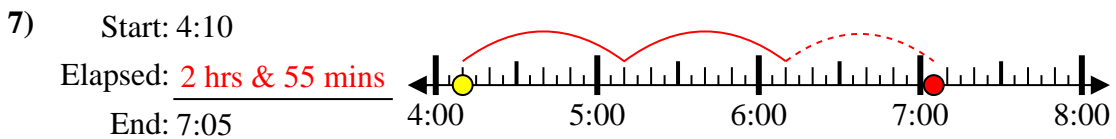
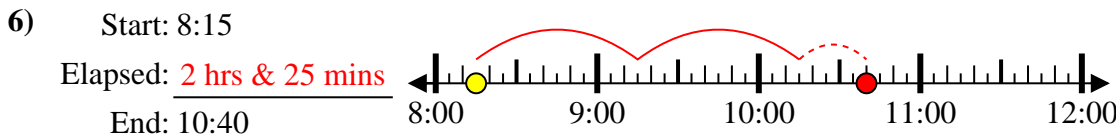
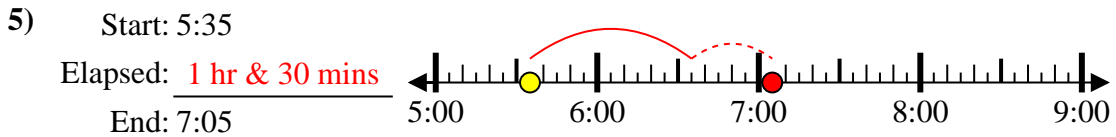
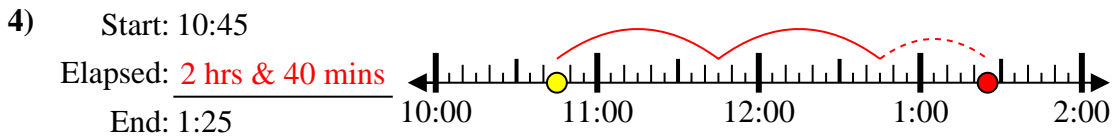
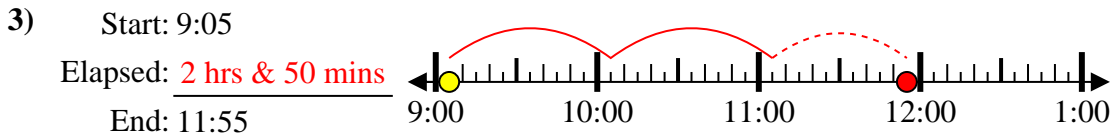
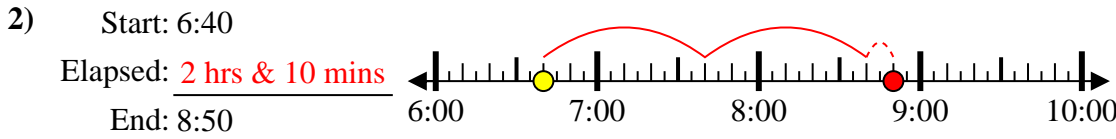
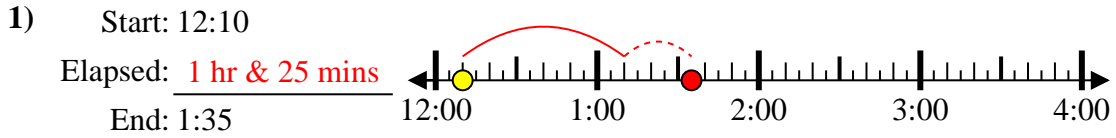
End: 6:20



8. \_\_\_\_\_



Solve each problem.



Answers

1. 1 hr & 25 mins

2. 2 hrs & 10 mins

3. 2 hrs & 50 mins

4. 2 hrs & 40 mins

5. 1 hr & 30 mins

6. 2 hrs & 25 mins

7. 2 hrs & 55 mins

8. 2 hrs & 20 mins