

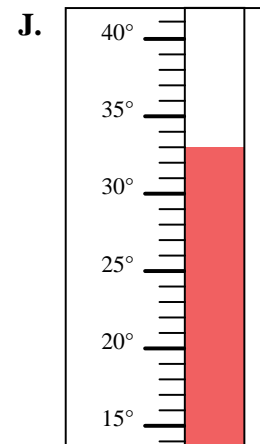
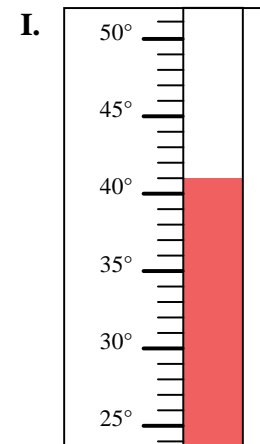
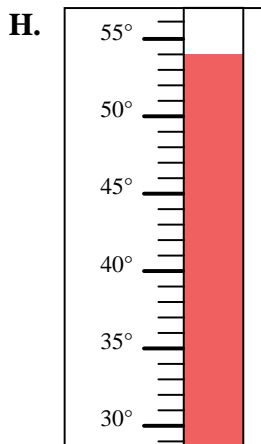
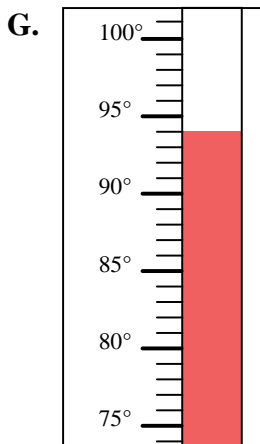
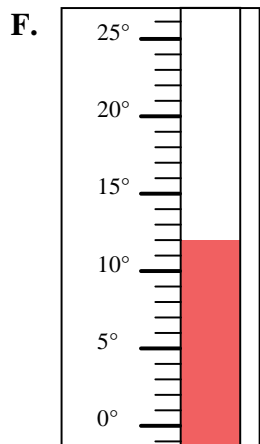
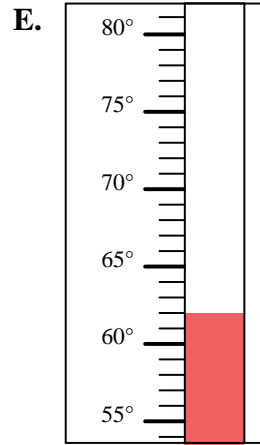
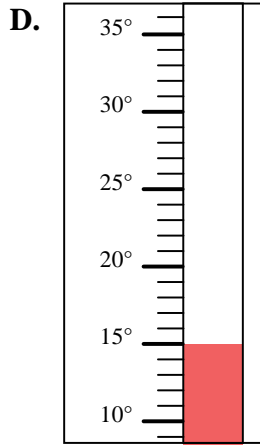
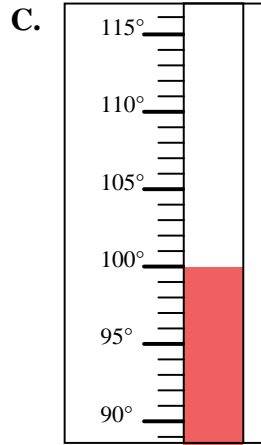
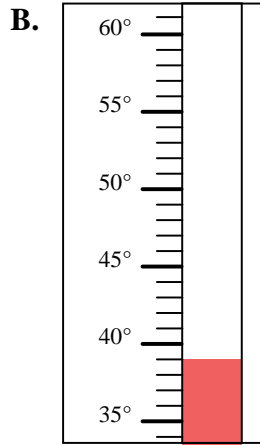
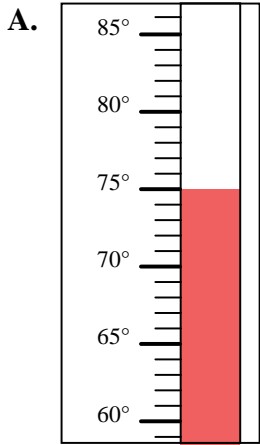


Determine which letter best answers each question.

**Answers**

- 1) Which thermometer best represents the temperature 39°?
- 2) Which thermometer best represents the temperature 12°?
- 3) Which thermometer best represents the temperature 75°?
- 4) Which thermometer best represents the temperature 100°?
- 5) Which thermometer best represents the temperature 33°?
- 6) Which thermometer best represents the temperature 15°?
- 7) Which thermometer best represents the temperature 94°?
- 8) Which thermometer best represents the temperature 54°?
- 9) Which thermometer best represents the temperature 62°?
- 10) Which thermometer best represents the temperature 41°?

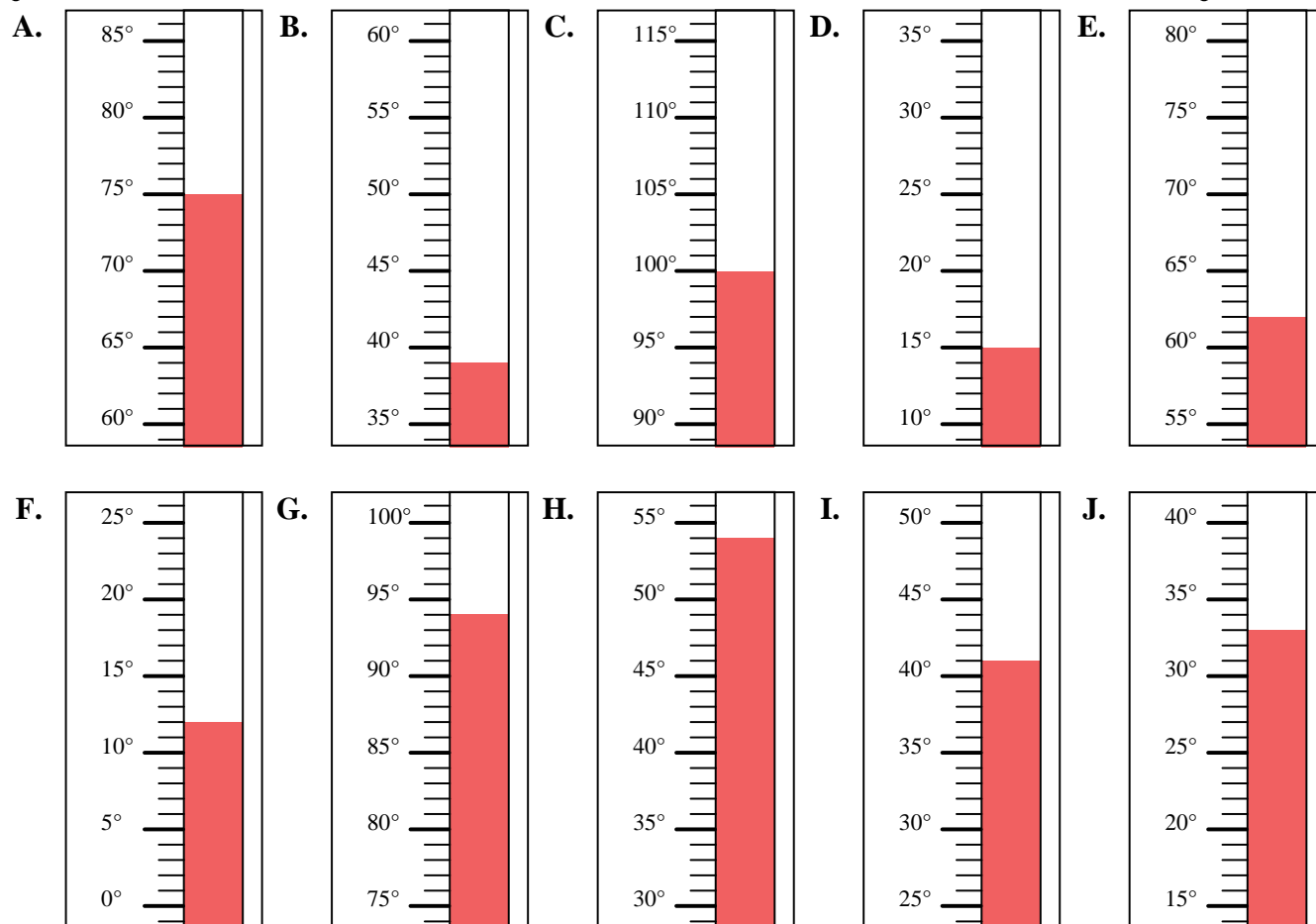
1. \_\_\_\_\_
2. \_\_\_\_\_
3. \_\_\_\_\_
4. \_\_\_\_\_
5. \_\_\_\_\_
6. \_\_\_\_\_
7. \_\_\_\_\_
8. \_\_\_\_\_
9. \_\_\_\_\_
10. \_\_\_\_\_





Determine which letter best answers each question.

- 1) Which thermometer best represents the temperature  $39^\circ$ ?
- 2) Which thermometer best represents the temperature  $12^\circ$ ?
- 3) Which thermometer best represents the temperature  $75^\circ$ ?
- 4) Which thermometer best represents the temperature  $100^\circ$ ?
- 5) Which thermometer best represents the temperature  $33^\circ$ ?
- 6) Which thermometer best represents the temperature  $15^\circ$ ?
- 7) Which thermometer best represents the temperature  $94^\circ$ ?
- 8) Which thermometer best represents the temperature  $54^\circ$ ?
- 9) Which thermometer best represents the temperature  $62^\circ$ ?
- 10) Which thermometer best represents the temperature  $41^\circ$ ?



**Answers**

1. **B**
2. **F**
3. **A**
4. **C**
5. **J**
6. **D**
7. **G**
8. **H**
9. **E**
10. **I**