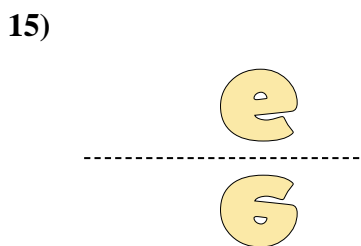
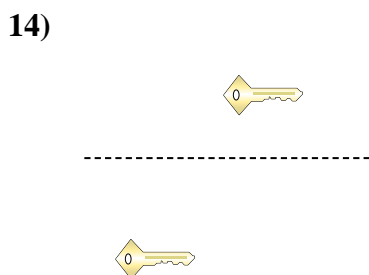
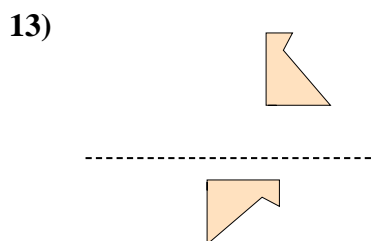
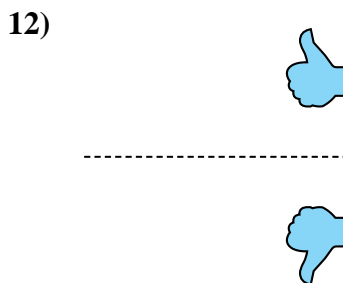
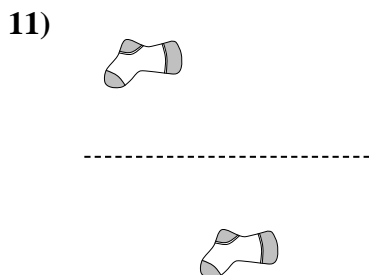
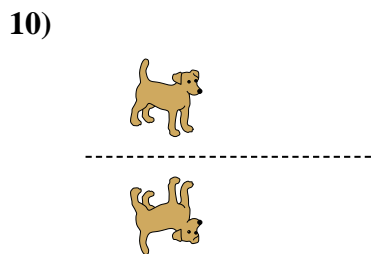
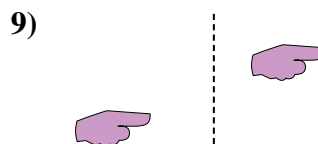
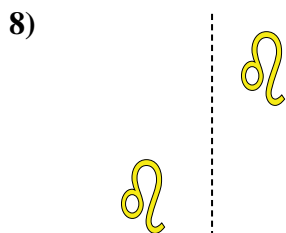

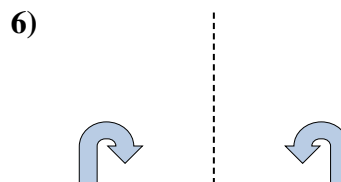
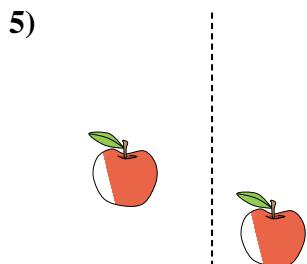
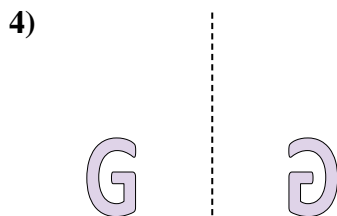
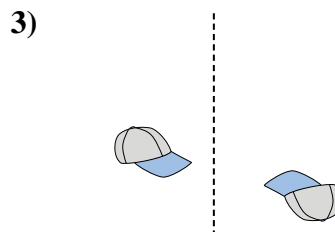
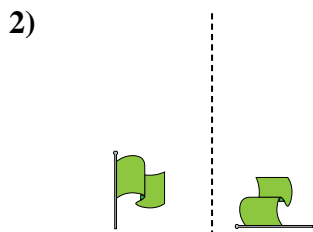
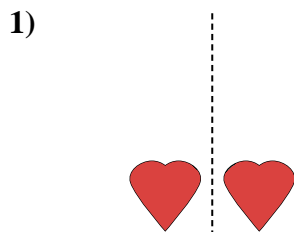




Determine if the shape is translating (slide), rotating (turn) or reflecting (flip).

Answers




1. \_\_\_\_\_
2. \_\_\_\_\_
3. \_\_\_\_\_
4. \_\_\_\_\_
5. \_\_\_\_\_
6. \_\_\_\_\_
7. \_\_\_\_\_
8. \_\_\_\_\_
9. \_\_\_\_\_
10. \_\_\_\_\_
11. \_\_\_\_\_
12. \_\_\_\_\_
13. \_\_\_\_\_
14. \_\_\_\_\_
15. \_\_\_\_\_

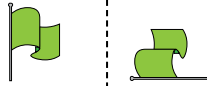


Determine if the shape is translating (slide), rotating (turn) or reflecting (flip).

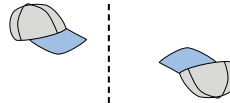
1)



2)




3)



4)



5)



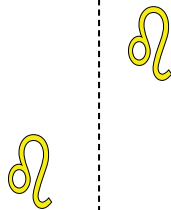
6)



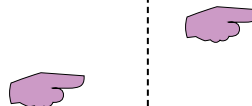
7)



8)



9)



10)



11)



12)



13)



14)



15)



Answers

1. reflecting

2. rotating

3. rotating

4. reflecting

5. translating

6. reflecting

7. rotating

8. translating

9. translating

10. reflecting

11. translating

12. reflecting

13. rotating

14. translating

15. reflecting