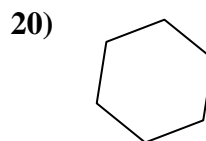
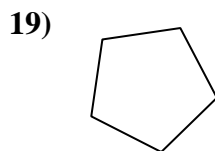
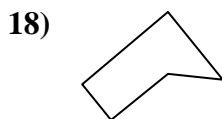
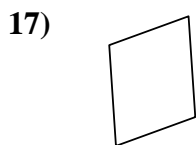
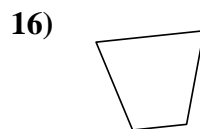
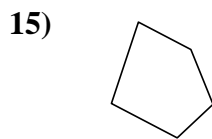
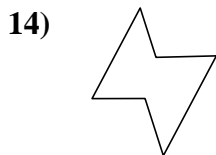
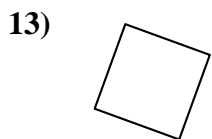
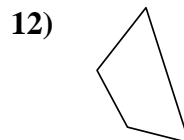
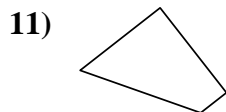
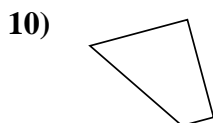
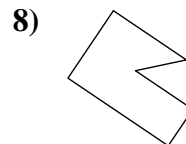
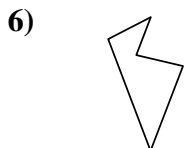
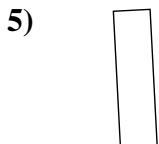
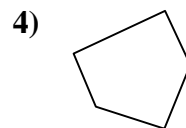
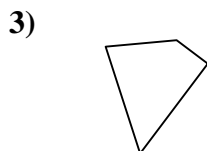
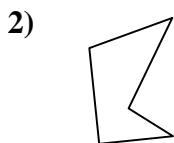
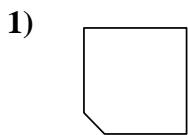




Determine if the shape shown is a quadrilateral (yes) or not (no).

Answers



1. \_\_\_\_\_

2. \_\_\_\_\_

3. \_\_\_\_\_

4. \_\_\_\_\_

5. \_\_\_\_\_

6. \_\_\_\_\_

7. \_\_\_\_\_

8. \_\_\_\_\_

9. \_\_\_\_\_

10. \_\_\_\_\_

11. \_\_\_\_\_

12. \_\_\_\_\_

13. \_\_\_\_\_

14. \_\_\_\_\_

15. \_\_\_\_\_

16. \_\_\_\_\_

17. \_\_\_\_\_

18. \_\_\_\_\_

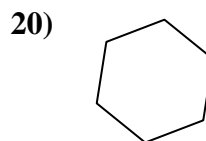
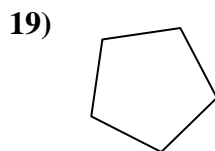
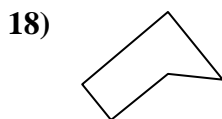
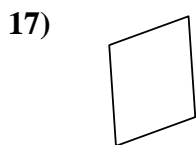
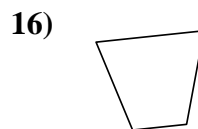
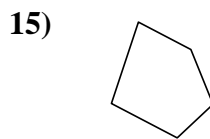
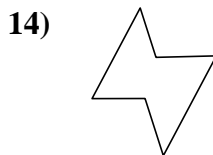
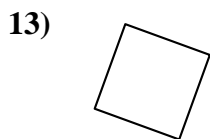
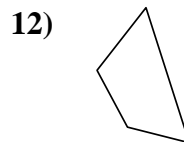
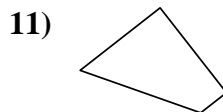
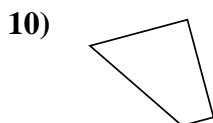
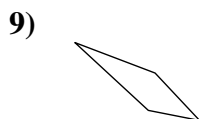
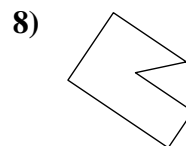
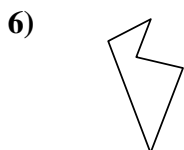
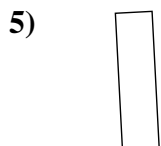
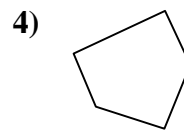
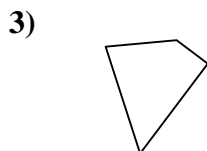
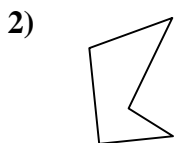
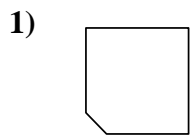
19. \_\_\_\_\_

20. \_\_\_\_\_



Determine if the shape shown is a quadrilateral (yes) or not (no).

Answers



1. no

2. no

3. yes

4. no

5. yes

6. no

7. yes

8. no

9. yes

10. yes

11. yes

12. yes

13. yes

14. no

15. no

16. yes

17. yes

18. no

19. no

20. no