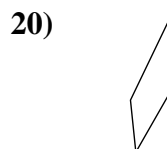
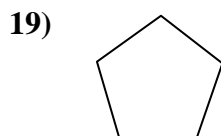
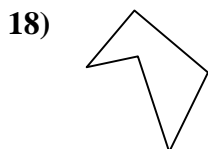
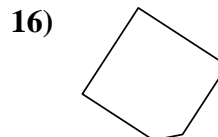
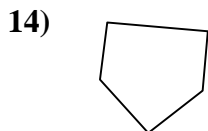
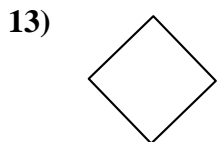
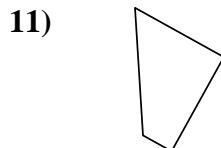
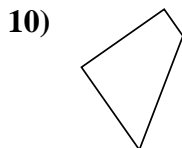
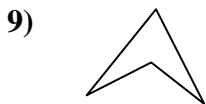
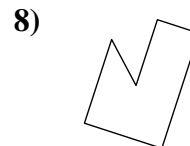
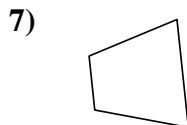
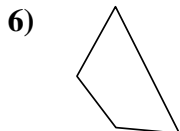

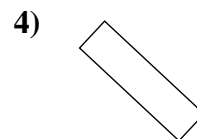
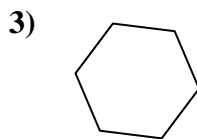
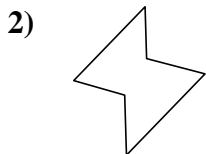
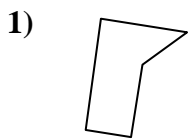




Determine if the shape shown is a quadrilateral (yes) or not (no).

Answers



1. \_\_\_\_\_

2. \_\_\_\_\_

3. \_\_\_\_\_

4. \_\_\_\_\_

5. \_\_\_\_\_

6. \_\_\_\_\_

7. \_\_\_\_\_

8. \_\_\_\_\_

9. \_\_\_\_\_

10. \_\_\_\_\_

11. \_\_\_\_\_

12. \_\_\_\_\_

13. \_\_\_\_\_

14. \_\_\_\_\_

15. \_\_\_\_\_

16. \_\_\_\_\_

17. \_\_\_\_\_

18. \_\_\_\_\_

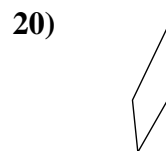
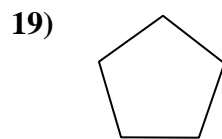
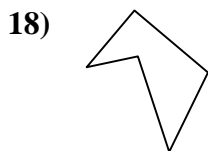
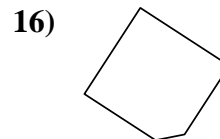
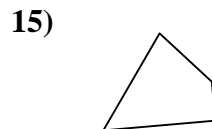
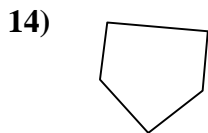
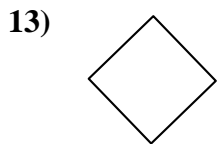
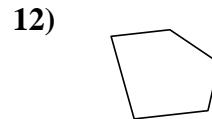
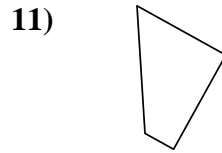
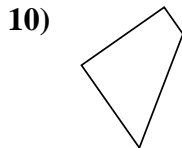
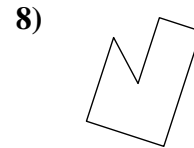
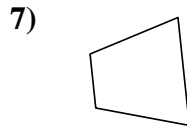
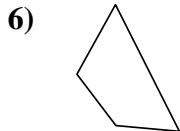
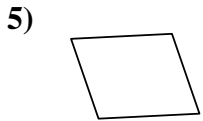
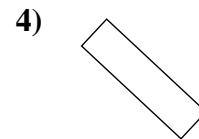
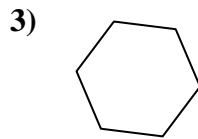
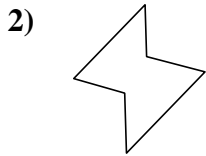
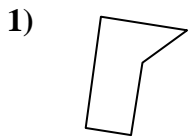
19. \_\_\_\_\_

20. \_\_\_\_\_



Determine if the shape shown is a quadrilateral (yes) or not (no).

Answers



- 1. no
- 2. no
- 3. no
- 4. yes
- 5. yes
- 6. yes
- 7. yes
- 8. no
- 9. yes
- 10. yes
- 11. yes
- 12. no
- 13. yes
- 14. no
- 15. yes
- 16. no
- 17. no
- 18. no
- 19. no
- 20. yes