



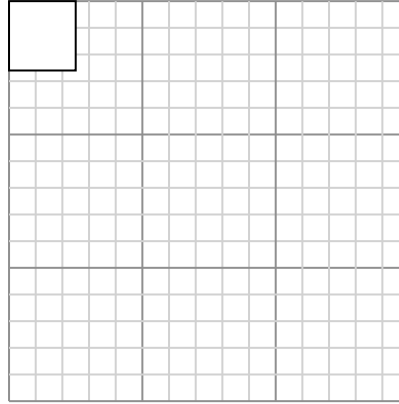
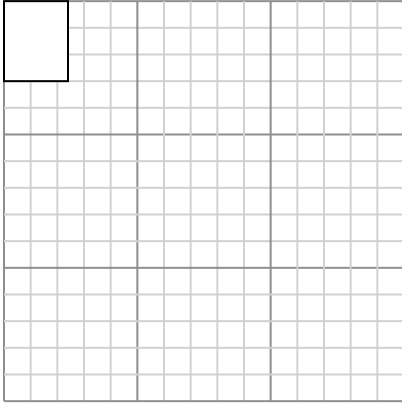
Draw each rectangle to the scale shown and determine the new dimensions.

Answers

- 1) The rectangle below has the dimensions:  
 $2.4 \times 3$

- 2) The rectangle below has the dimensions:  
 $2.5 \times 2.6$

1. \_\_\_\_\_



2. \_\_\_\_\_

3. \_\_\_\_\_

4. \_\_\_\_\_

5. \_\_\_\_\_

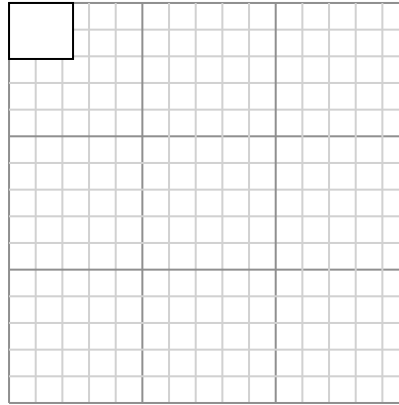
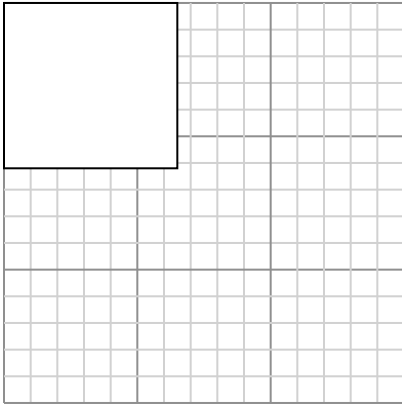
6. \_\_\_\_\_

Create another rectangle that is scaled to 16 times the size of the current rectangle.

Create another rectangle that is scaled to 16 times the size of the current rectangle.

- 3) The rectangle below has the dimensions:  
 $6.5 \times 6.2$

- 4) The rectangle below has the dimensions:  
 $2.4 \times 2.1$

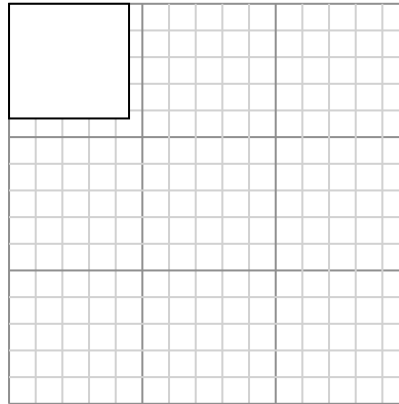
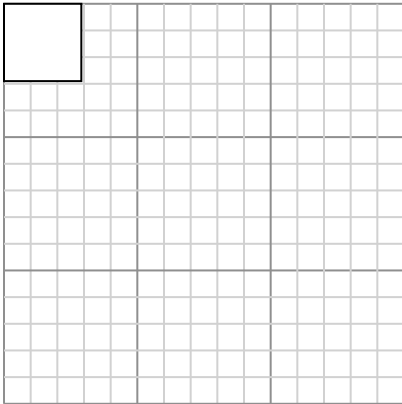


Create another rectangle that is scaled to 4 times the size of the current rectangle.

Create another rectangle that is scaled to 16 times the size of the current rectangle.

- 5) The rectangle below has the dimensions:  
 $2.9 \times 2.9$

- 6) The rectangle below has the dimensions:  
 $4.5 \times 4.3$



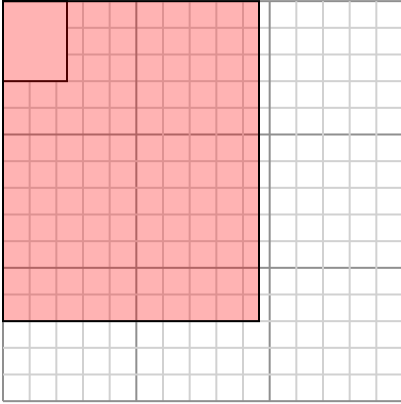
Create another rectangle that is scaled to 16 times the size of the current rectangle.

Create another rectangle that is scaled to 9 times the size of the current rectangle.



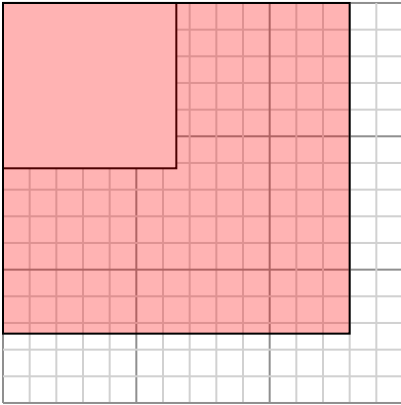
Draw each rectangle to the scale shown and determine the new dimensions.

- 1) The rectangle below has the dimensions:  
 $2.4 \times 3$



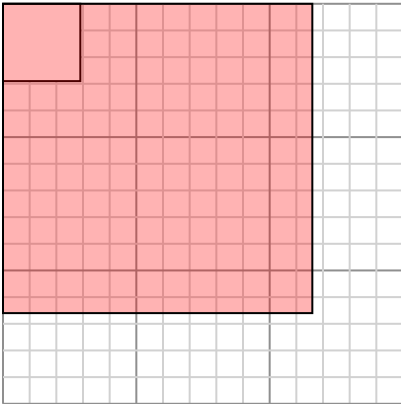
Create another rectangle that is scaled to 16 times the size of the current rectangle.

- 3) The rectangle below has the dimensions:  
 $6.5 \times 6.2$



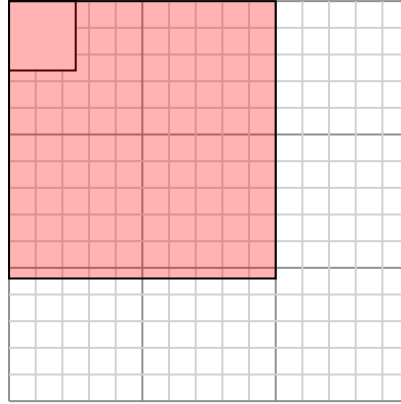
Create another rectangle that is scaled to 4 times the size of the current rectangle.

- 5) The rectangle below has the dimensions:  
 $2.9 \times 2.9$



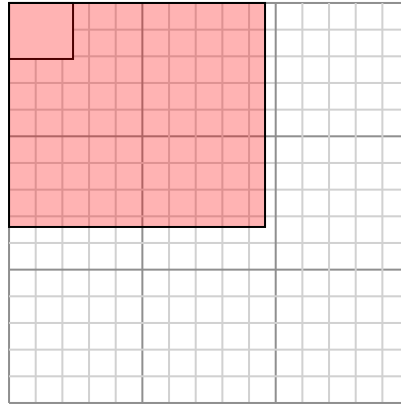
Create another rectangle that is scaled to 16 times the size of the current rectangle.

- 2) The rectangle below has the dimensions:  
 $2.5 \times 2.6$



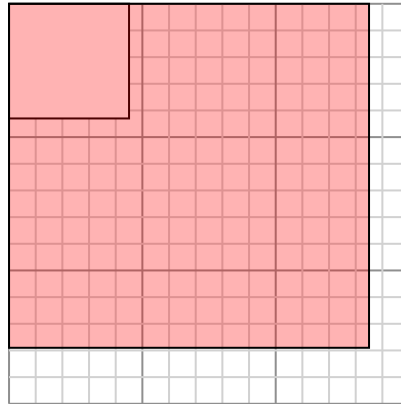
Create another rectangle that is scaled to 16 times the size of the current rectangle.

- 4) The rectangle below has the dimensions:  
 $2.4 \times 2.1$



Create another rectangle that is scaled to 16 times the size of the current rectangle.

- 6) The rectangle below has the dimensions:  
 $4.5 \times 4.3$



Create another rectangle that is scaled to 9 times the size of the current rectangle.

Answers

1.  $9.6 \times 12$

2.  $10 \times 10.4$

3.  $13 \times 12.4$

4.  $9.6 \times 8.4$

5.  $11.6 \times 11.6$

6.  $13.5 \times 12.9$