



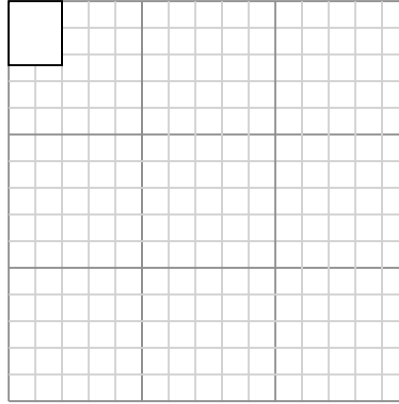
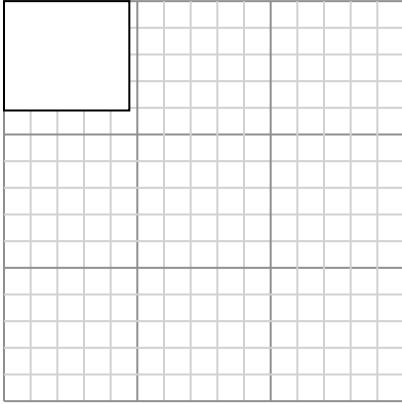
Draw each rectangle to the scale shown and determine the new dimensions.

Answers

- 1) The rectangle below has the dimensions:  $4.7 \times 4.1$

- 2) The rectangle below has the dimensions:  $2 \times 2.4$

1. \_\_\_\_\_



2. \_\_\_\_\_

Create another rectangle that is scaled to 9 times the size of the current rectangle.

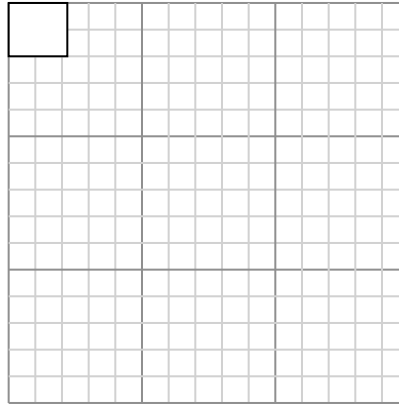
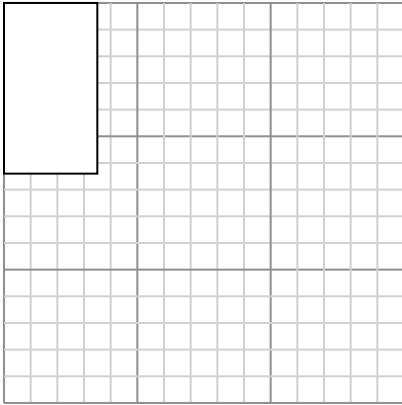
Create another rectangle that is scaled to 16 times the size of the current rectangle.

3. \_\_\_\_\_

- 3) The rectangle below has the dimensions:  $3.5 \times 6.4$

- 4) The rectangle below has the dimensions:  $2.2 \times 2$

4. \_\_\_\_\_



Create another rectangle that is scaled to 4 times the size of the current rectangle.

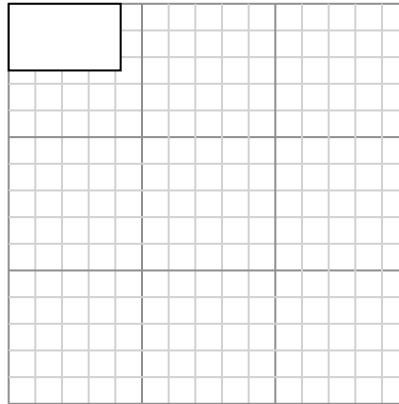
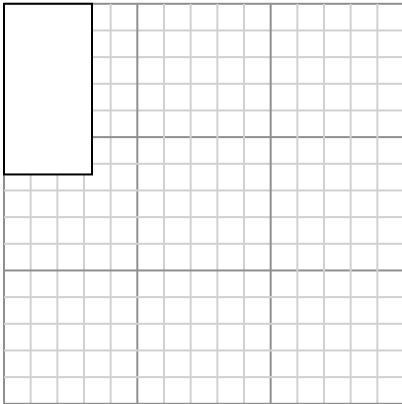
Create another rectangle that is scaled to 16 times the size of the current rectangle.

5. \_\_\_\_\_

- 5) The rectangle below has the dimensions:  $3.3 \times 6.4$

- 6) The rectangle below has the dimensions:  $4.2 \times 2.5$

6. \_\_\_\_\_



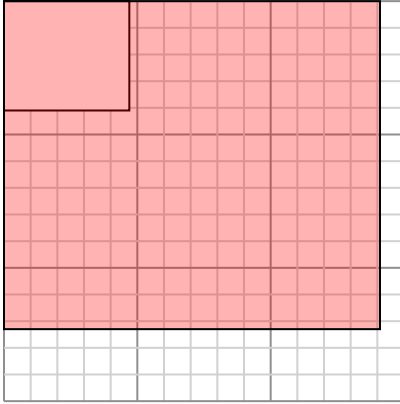
Create another rectangle that is scaled to 4 times the size of the current rectangle.

Create another rectangle that is scaled to 9 times the size of the current rectangle.



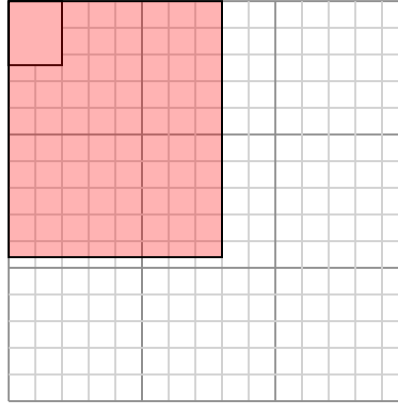
Draw each rectangle to the scale shown and determine the new dimensions.

- 1) The rectangle below has the dimensions:  
 $4.7 \times 4.1$



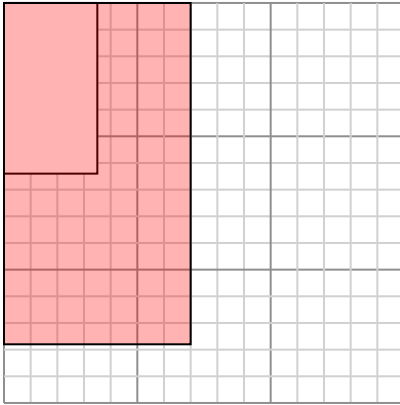
Create another rectangle that is scaled to 9 times the size of the current rectangle.

- 2) The rectangle below has the dimensions:  
 $2 \times 2.4$



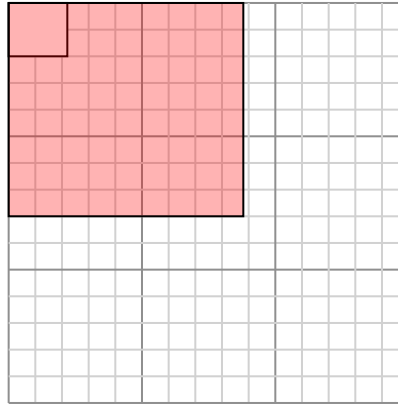
Create another rectangle that is scaled to 16 times the size of the current rectangle.

- 3) The rectangle below has the dimensions:  
 $3.5 \times 6.4$



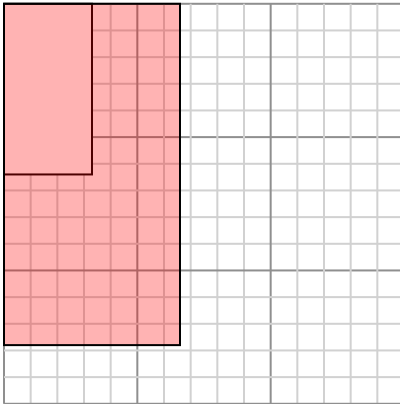
Create another rectangle that is scaled to 4 times the size of the current rectangle.

- 4) The rectangle below has the dimensions:  
 $2.2 \times 2$



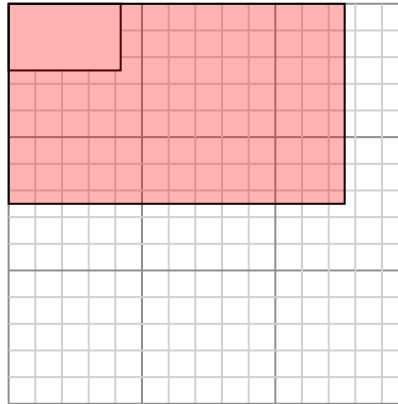
Create another rectangle that is scaled to 16 times the size of the current rectangle.

- 5) The rectangle below has the dimensions:  
 $3.3 \times 6.4$



Create another rectangle that is scaled to 4 times the size of the current rectangle.

- 6) The rectangle below has the dimensions:  
 $4.2 \times 2.5$



Create another rectangle that is scaled to 9 times the size of the current rectangle.

Answers

1.  $14.1 \times 12.3$

2.  $8 \times 9.6$

3.  $7 \times 12.8$

4.  $8.8 \times 8$

5.  $6.6 \times 12.8$

6.  $12.6 \times 7.5$