



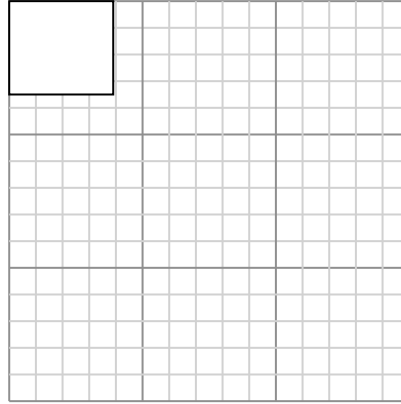
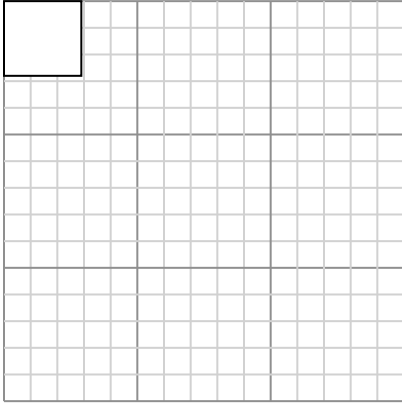
Draw each rectangle to the scale shown and determine the new dimensions.

Answers

- 1) The rectangle below has the dimensions:  
 $2.9 \times 2.8$

- 2) The rectangle below has the dimensions:  
 $3.9 \times 3.5$

1. \_\_\_\_\_



2. \_\_\_\_\_

3. \_\_\_\_\_

4. \_\_\_\_\_

5. \_\_\_\_\_

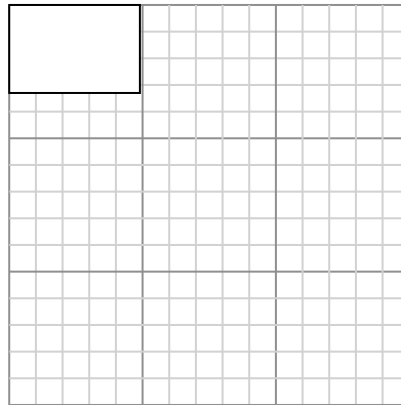
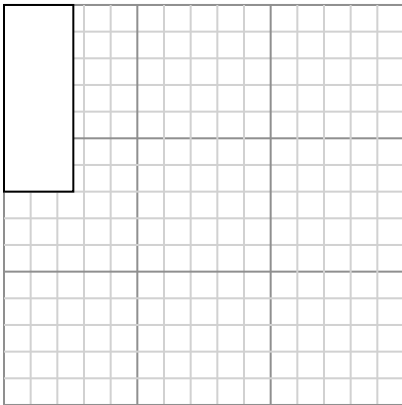
6. \_\_\_\_\_

Create another rectangle that is scaled to 16 times the size of the current rectangle.

Create another rectangle that is scaled to 9 times the size of the current rectangle.

- 3) The rectangle below has the dimensions:  
 $2.6 \times 7$

- 4) The rectangle below has the dimensions:  
 $4.9 \times 3.3$

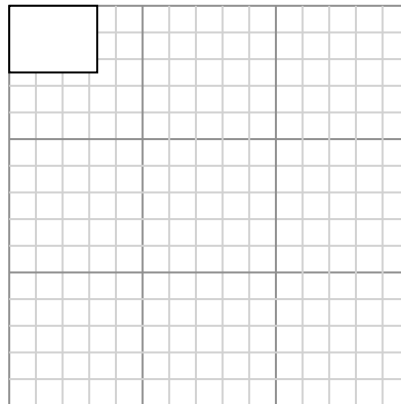
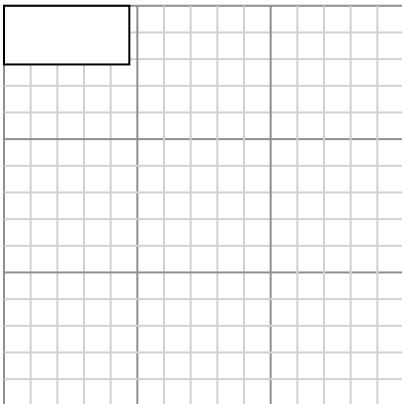


Create another rectangle that is scaled to 4 times the size of the current rectangle.

Create another rectangle that is scaled to 4 times the size of the current rectangle.

- 5) The rectangle below has the dimensions:  
 $4.7 \times 2.2$

- 6) The rectangle below has the dimensions:  
 $3.3 \times 2.5$



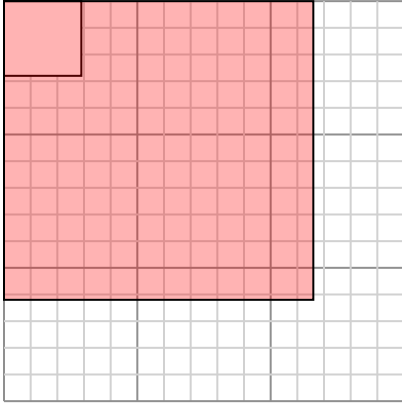
Create another rectangle that is scaled to 9 times the size of the current rectangle.

Create another rectangle that is scaled to 9 times the size of the current rectangle.



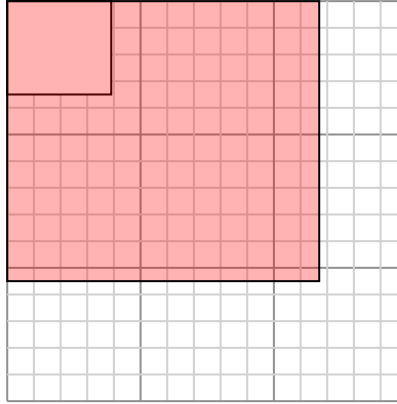
Draw each rectangle to the scale shown and determine the new dimensions.

- 1) The rectangle below has the dimensions:  
 $2.9 \times 2.8$



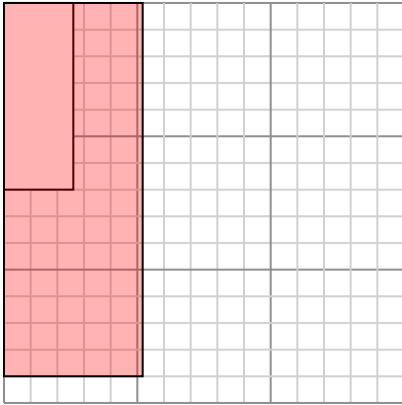
Create another rectangle that is scaled to 16 times the size of the current rectangle.

- 2) The rectangle below has the dimensions:  
 $3.9 \times 3.5$



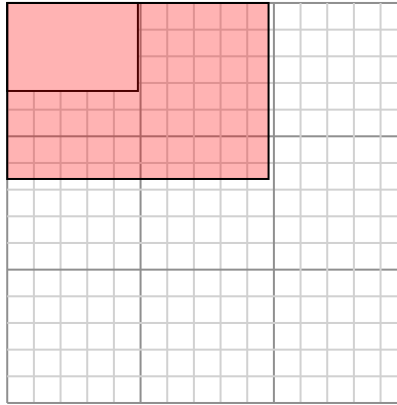
Create another rectangle that is scaled to 9 times the size of the current rectangle.

- 3) The rectangle below has the dimensions:  
 $2.6 \times 7$



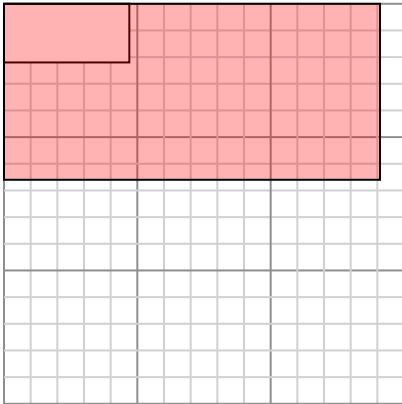
Create another rectangle that is scaled to 4 times the size of the current rectangle.

- 4) The rectangle below has the dimensions:  
 $4.9 \times 3.3$



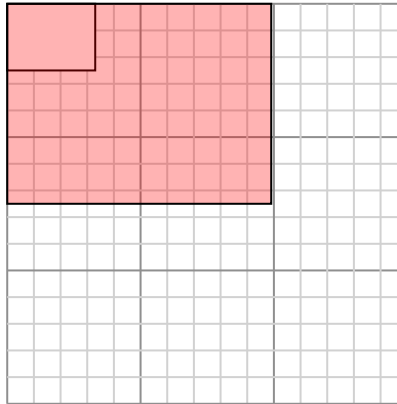
Create another rectangle that is scaled to 4 times the size of the current rectangle.

- 5) The rectangle below has the dimensions:  
 $4.7 \times 2.2$



Create another rectangle that is scaled to 9 times the size of the current rectangle.

- 6) The rectangle below has the dimensions:  
 $3.3 \times 2.5$



Create another rectangle that is scaled to 9 times the size of the current rectangle.

Answers

1.  **$11.6 \times 11.2$**

2.  **$11.7 \times 10.5$**

3.  **$5.2 \times 14$**

4.  **$9.8 \times 6.6$**

5.  **$14.1 \times 6.6$**

6.  **$9.9 \times 7.5$**