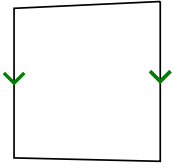




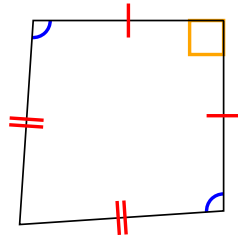
Determine if the shape shown is a Quadrilateral, Kite, Trapezoid, Parallelogram, Rhombus, Rectangle or Square (can be more than one).

Answers

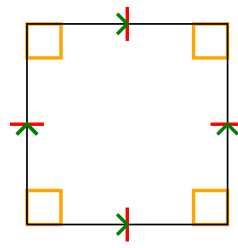
1)



2)



3)



1. \_\_\_\_\_

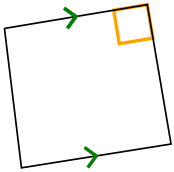
2. \_\_\_\_\_

3. \_\_\_\_\_

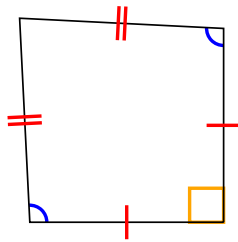
4. \_\_\_\_\_

5. \_\_\_\_\_

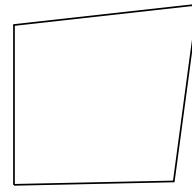
4)



5)



6)



6. \_\_\_\_\_

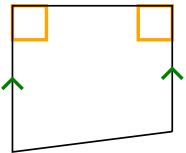
7. \_\_\_\_\_

8. \_\_\_\_\_

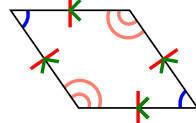
9. \_\_\_\_\_

10. \_\_\_\_\_

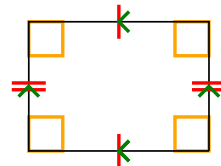
7)



8)



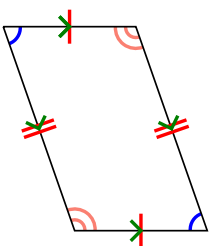
9)



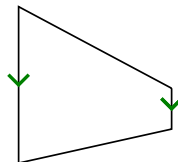
11. \_\_\_\_\_

12. \_\_\_\_\_

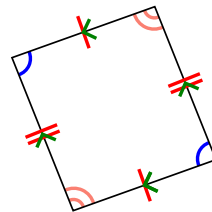
10)



11)



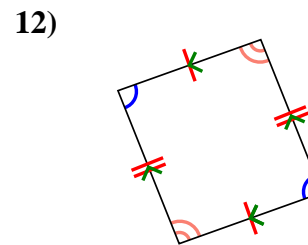
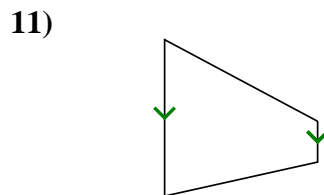
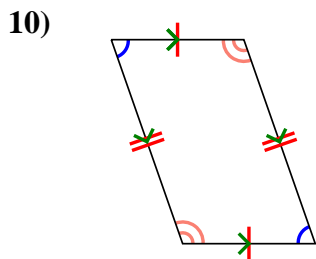
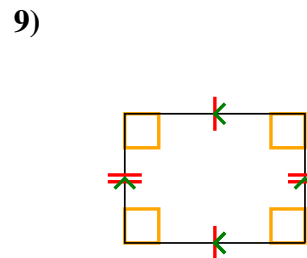
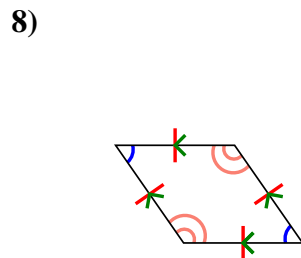
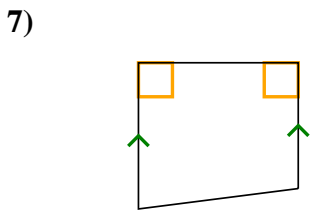
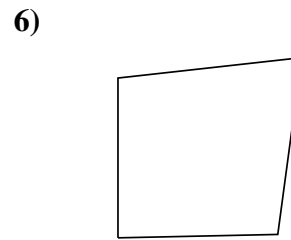
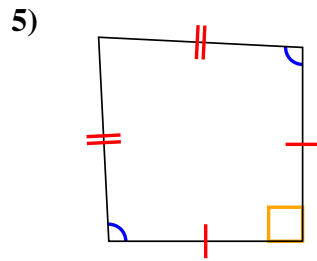
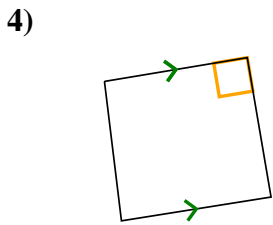
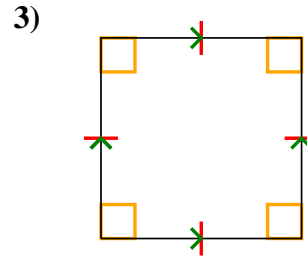
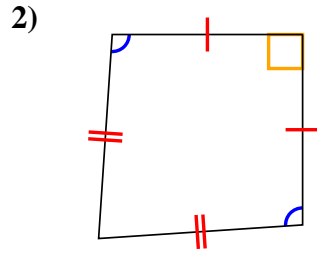
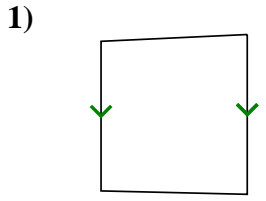
12)





Determine if the shape shown is a Quadrilateral, Kite, Trapezoid, Parallelogram, Rhombus, Rectangle or Square (can be more than one).

Answers



1. Q,T

2. Q,K

3. Q,P,H,R,S

4. Q,T

5. Q,K

6. Q

7. Q,T

8. Q,P,H

9. Q,P,R

10. Q,P

11. Q,T

12. Q,P