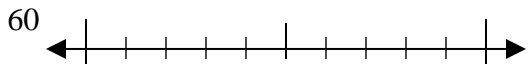




Use the numberlines to round each number to the nearest 10.

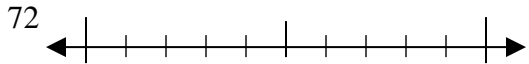
Answers

Ex)



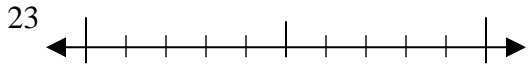
Ex. 60

1)



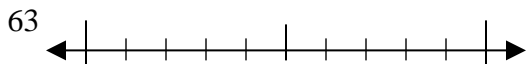
1. \_\_\_\_\_

2)



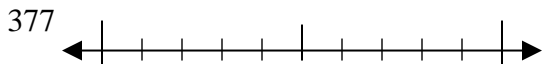
2. \_\_\_\_\_

3)



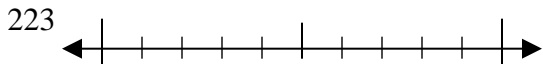
3. \_\_\_\_\_

4)



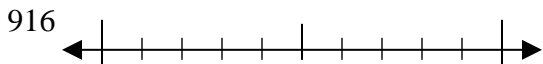
4. \_\_\_\_\_

5)



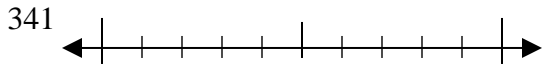
5. \_\_\_\_\_

6)



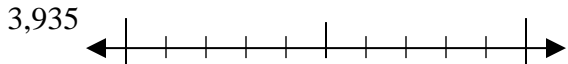
6. \_\_\_\_\_

7)



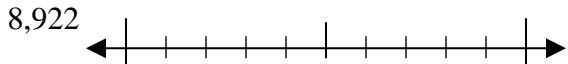
7. \_\_\_\_\_

8)



8. \_\_\_\_\_

9)

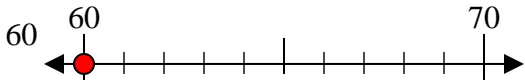


9. \_\_\_\_\_

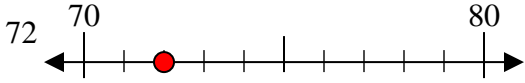


Use the numberlines to round each number to the nearest 10.

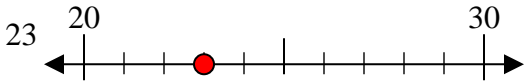
Ex)



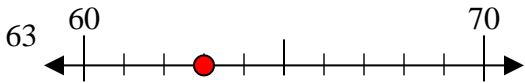
1)



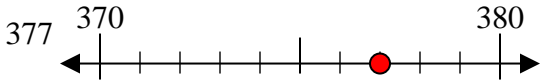
2)



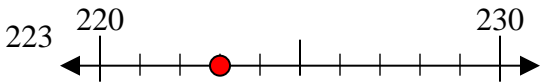
3)



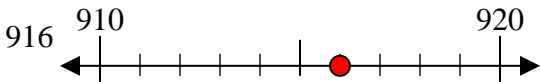
4)



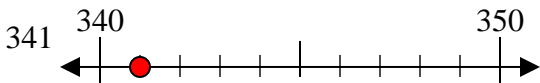
5)



6)



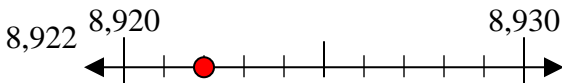
7)



8)



9)



Answers

Ex. 60

1. 70

2. 20

3. 60

4. 380

5. 220

6. 920

7. 340

8. 3940

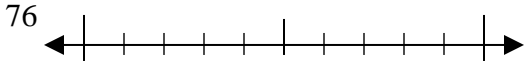
9. 8920



Use the numberlines to round each number to the nearest 10.

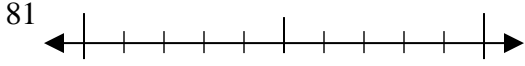
Answers

Ex)



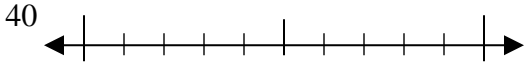
Ex. 80

1)



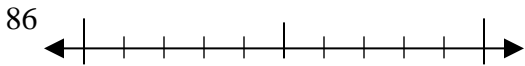
1. \_\_\_\_\_

2)



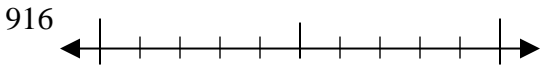
2. \_\_\_\_\_

3)



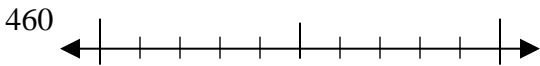
3. \_\_\_\_\_

4)



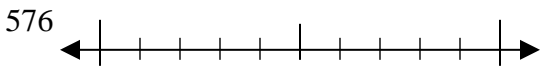
4. \_\_\_\_\_

5)



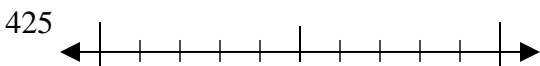
5. \_\_\_\_\_

6)



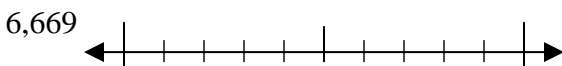
6. \_\_\_\_\_

7)



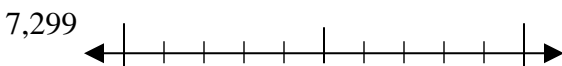
7. \_\_\_\_\_

8)



8. \_\_\_\_\_

9)

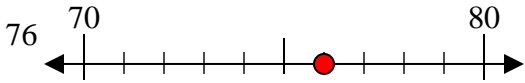


9. \_\_\_\_\_



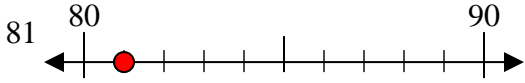
Use the numberlines to round each number to the nearest 10.

Ex)



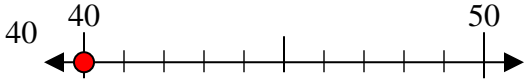
Ex. 80

1)



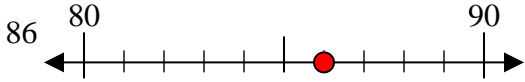
1. 80

2)



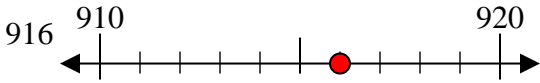
2. 40

3)



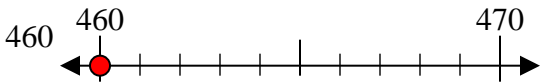
3. 90

4)



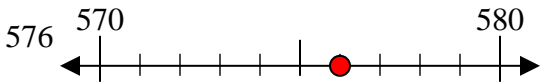
4. 920

5)



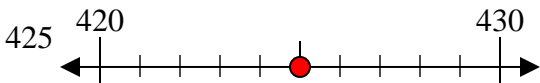
5. 460

6)



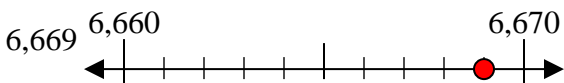
6. 580

7)



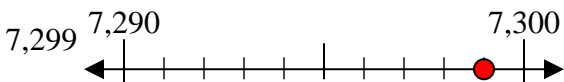
7. 430

8)



8. 6670

9)



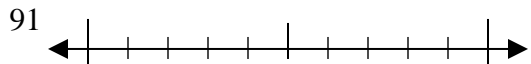
9. 7300

Answers

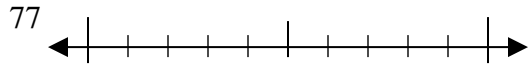


Use the numberlines to round each number to the nearest 10.

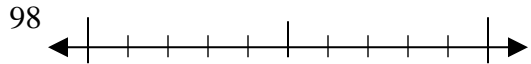
Ex)



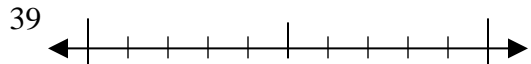
1)



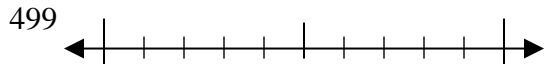
2)



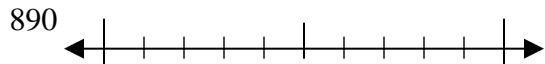
3)



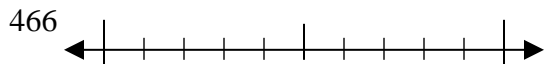
4)



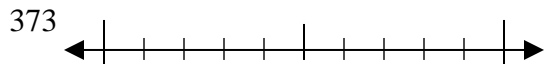
5)



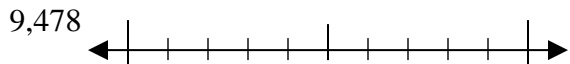
6)



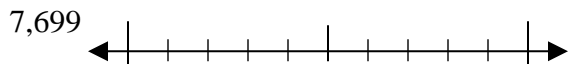
7)



8)



9)



Answers

Ex. 90

1. \_\_\_\_\_

2. \_\_\_\_\_

3. \_\_\_\_\_

4. \_\_\_\_\_

5. \_\_\_\_\_

6. \_\_\_\_\_

7. \_\_\_\_\_

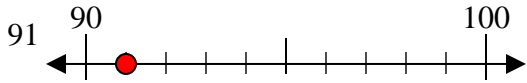
8. \_\_\_\_\_

9. \_\_\_\_\_

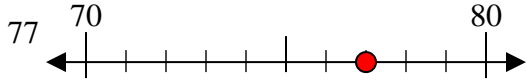


Use the numberlines to round each number to the nearest 10.

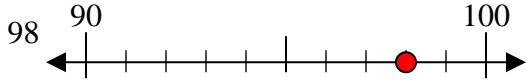
Ex)



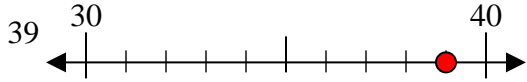
1)



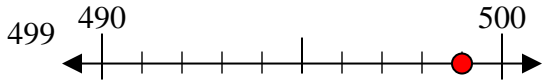
2)



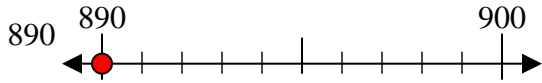
3)



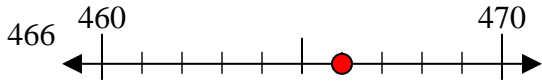
4)



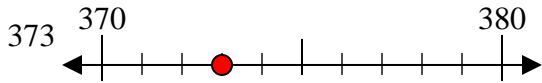
5)



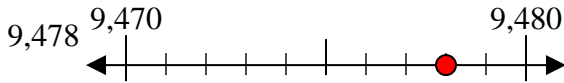
6)



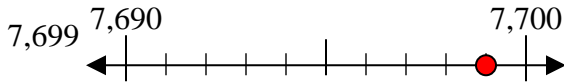
7)



8)



9)



Answers

Ex. 90

1. 80

2. 100

3. 40

4. 500

5. 890

6. 470

7. 370

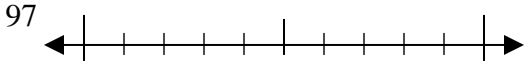
8. 9480

9. 7700



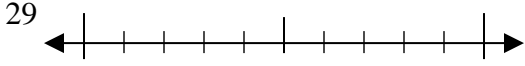
Use the numberlines to round each number to the nearest 10.

Ex)



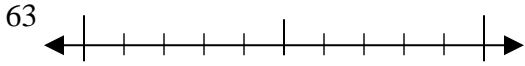
Ex. 100

1)



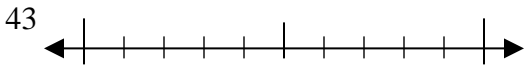
1. \_\_\_\_\_

2)



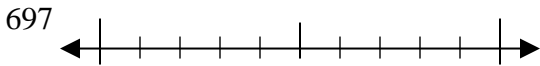
2. \_\_\_\_\_

3)



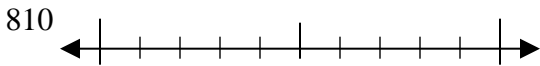
3. \_\_\_\_\_

4)



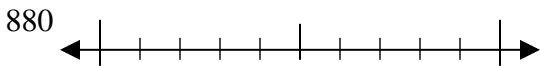
4. \_\_\_\_\_

5)



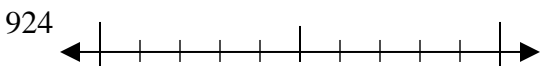
5. \_\_\_\_\_

6)



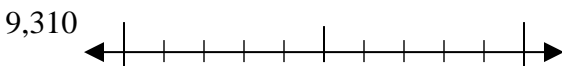
6. \_\_\_\_\_

7)



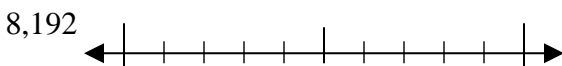
7. \_\_\_\_\_

8)



8. \_\_\_\_\_

9)



9. \_\_\_\_\_

Answers

Ex. 100

1. \_\_\_\_\_

2. \_\_\_\_\_

3. \_\_\_\_\_

4. \_\_\_\_\_

5. \_\_\_\_\_

6. \_\_\_\_\_

7. \_\_\_\_\_

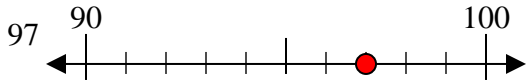
8. \_\_\_\_\_

9. \_\_\_\_\_

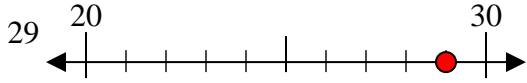


Use the numberlines to round each number to the nearest 10.

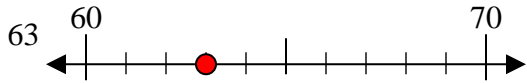
Ex)



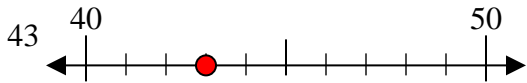
1)



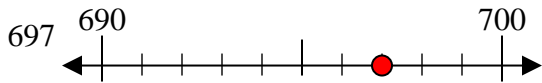
2)



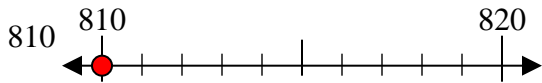
3)



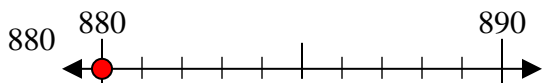
4)



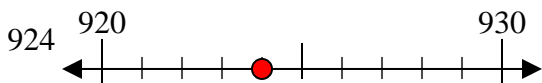
5)



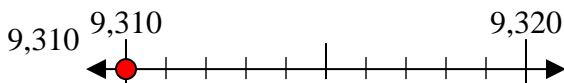
6)



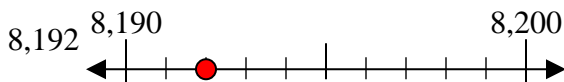
7)



8)



9)



Answers

Ex. 100

1. 30

2. 60

3. 40

4. 700

5. 810

6. 880

7. 920

8. 9310

9. 8190

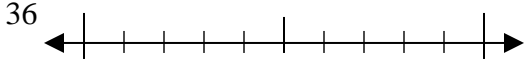




Use the numberlines to round each number to the nearest 10.

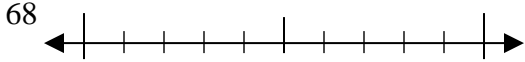
Answers

Ex)



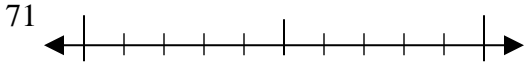
Ex. 40

1)



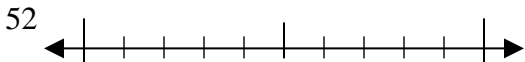
1. \_\_\_\_\_

2)



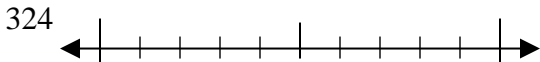
2. \_\_\_\_\_

3)



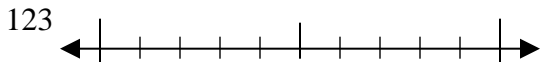
3. \_\_\_\_\_

4)



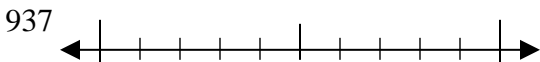
4. \_\_\_\_\_

5)



5. \_\_\_\_\_

6)



6. \_\_\_\_\_

7)




7. \_\_\_\_\_

8)



8. \_\_\_\_\_

9)

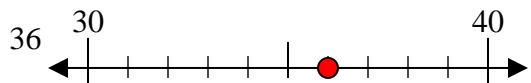


9. \_\_\_\_\_

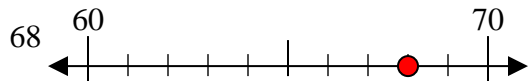


Use the numberlines to round each number to the nearest 10.

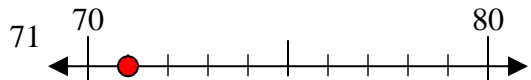
Ex)



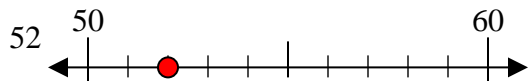
1)



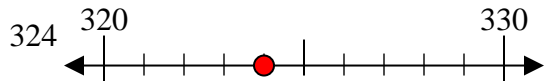
2)



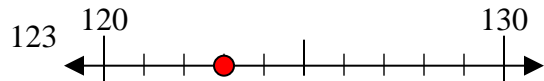
3)



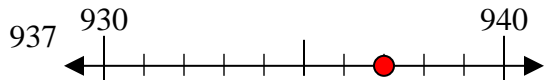
4)



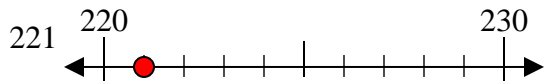
5)



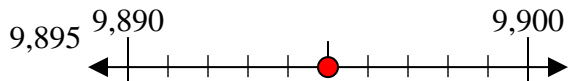
6)



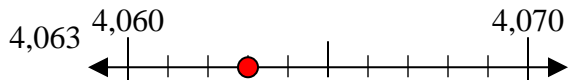
7)



8)



9)



Answers

Ex. 40

1. 70

2. 70

3. 50

4. 320

5. 120

6. 940

7. 220

8. 9900

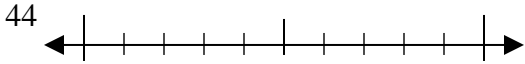
9. 4060



Use the numberlines to round each number to the nearest 10.

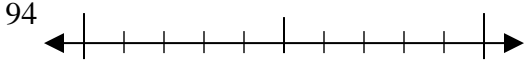
Answers

Ex)



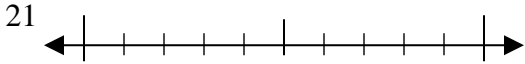
Ex. 40

1)



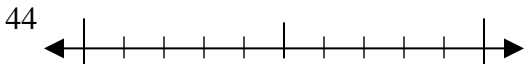
1. \_\_\_\_\_

2)



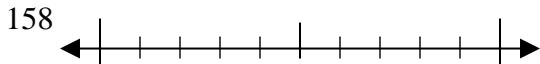
2. \_\_\_\_\_

3)



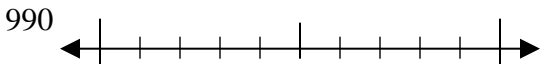
3. \_\_\_\_\_

4)



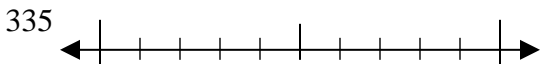
4. \_\_\_\_\_

5)



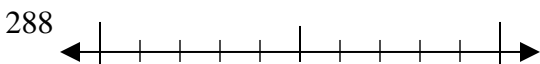
5. \_\_\_\_\_

6)



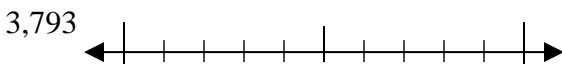
6. \_\_\_\_\_

7)



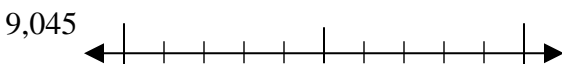
7. \_\_\_\_\_

8)



8. \_\_\_\_\_

9)

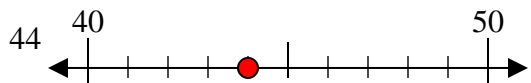


9. \_\_\_\_\_

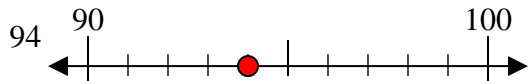


Use the numberlines to round each number to the nearest 10.

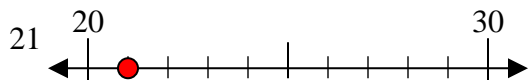
Ex)



1)



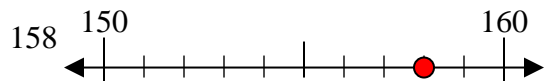
2)



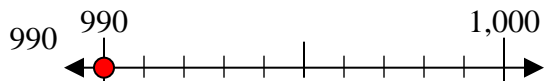
3)



4)



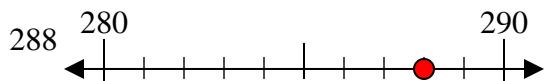
5)



6)



7)



8)



9)



Answers

Ex. 40

1. 90

2. 20

3. 40

4. 160

5. 990

6. 340

7. 290

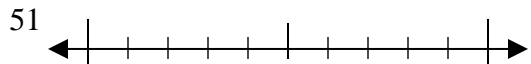
8. 3790

9. 9050

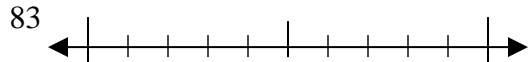


Use the numberlines to round each number to the nearest 10.

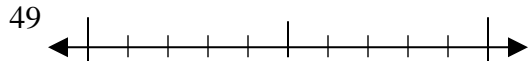
Ex)



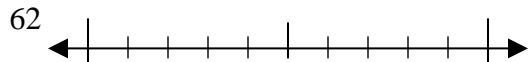
1)



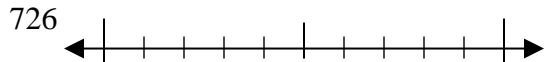
2)



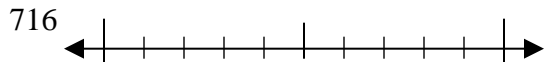
3)



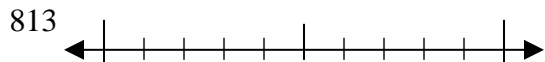
4)



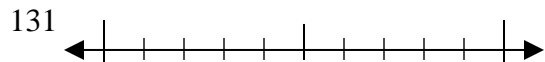
5)



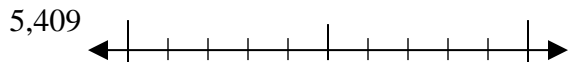
6)



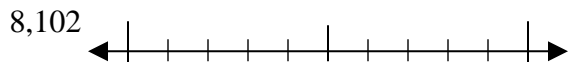
7)



8)



9)



Answers

Ex. 50

1. \_\_\_\_\_

2. \_\_\_\_\_

3. \_\_\_\_\_

4. \_\_\_\_\_

5. \_\_\_\_\_

6. \_\_\_\_\_

7. \_\_\_\_\_

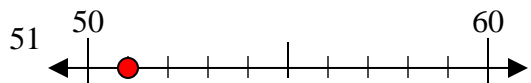
8. \_\_\_\_\_

9. \_\_\_\_\_



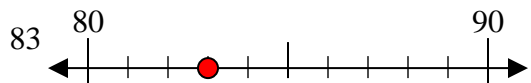
Use the numberlines to round each number to the nearest 10.

Ex)



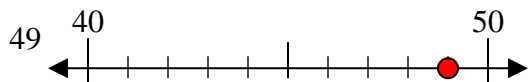
Ex. 50

1)



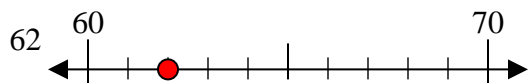
1. 80

2)



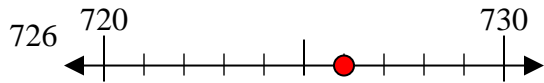
2. 50

3)



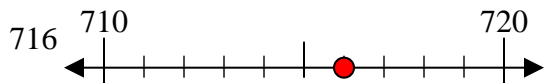
3. 60

4)



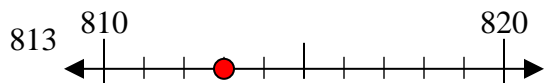
4. 730

5)



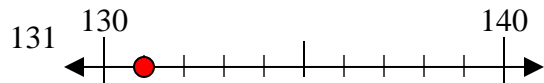
5. 720

6)



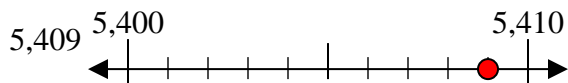
6. 810

7)



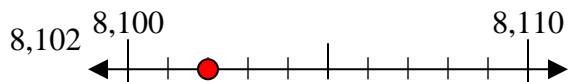
7. 130

8)



8. 5410

9)



9. 8100

Answers

Ex. 50

1. 80

2. 50

3. 60

4. 730

5. 720

6. 810

7. 130

8. 5410

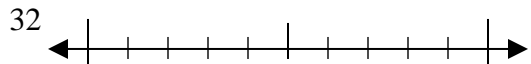
9. 8100



Use the numberlines to round each number to the nearest 10.

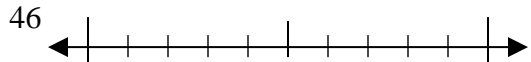
Answers

Ex)



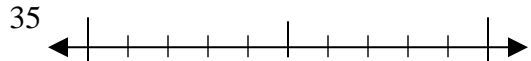
Ex. 30

1)



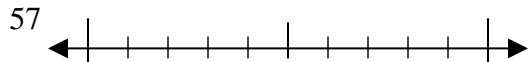
1. \_\_\_\_\_

2)



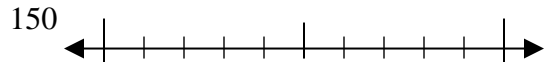
2. \_\_\_\_\_

3)



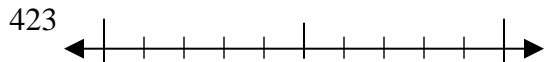
3. \_\_\_\_\_

4)



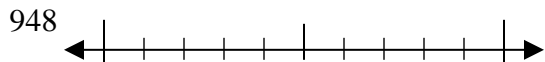
4. \_\_\_\_\_

5)



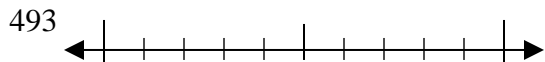
5. \_\_\_\_\_

6)



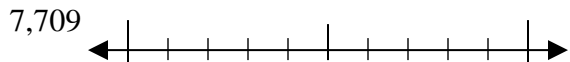
6. \_\_\_\_\_

7)



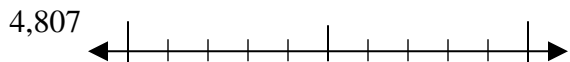
7. \_\_\_\_\_

8)



8. \_\_\_\_\_

9)

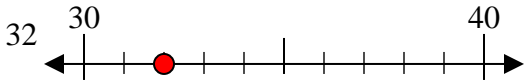


9. \_\_\_\_\_

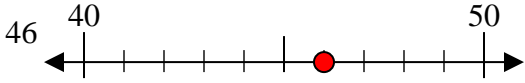


Use the numberlines to round each number to the nearest 10.

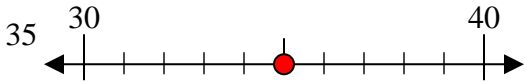
Ex)



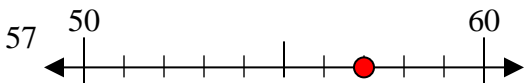
1)



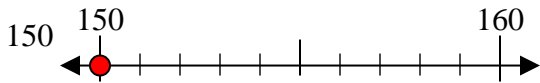
2)



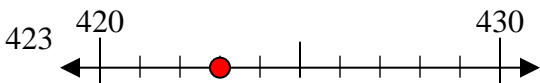
3)



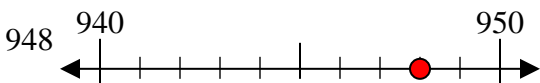
4)



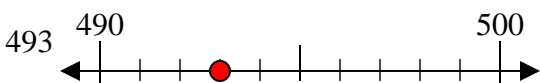
5)



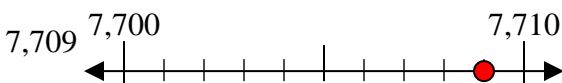
6)



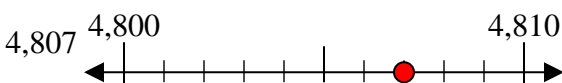
7)



8)



9)



Answers

Ex. 30

1. 50

2. 40

3. 60

4. 150

5. 420

6. 950

7. 490

8. 7710

9. 4810

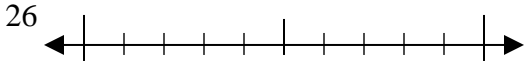




Use the numberlines to round each number to the nearest 10.

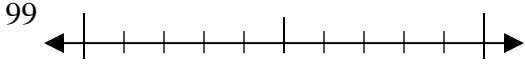
Answers

Ex)



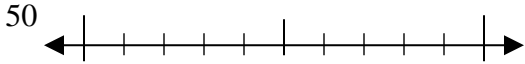
Ex. 30

1)



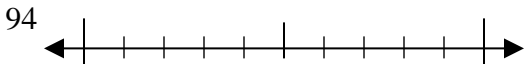
1. \_\_\_\_\_

2)



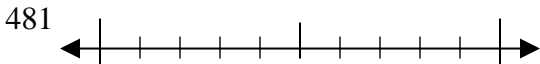
2. \_\_\_\_\_

3)



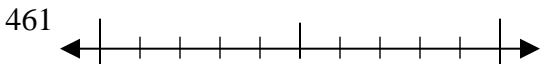
3. \_\_\_\_\_

4)



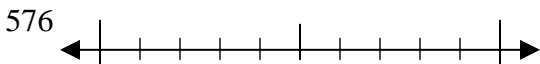
4. \_\_\_\_\_

5)



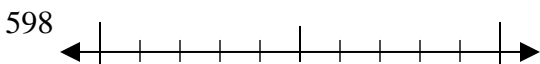
5. \_\_\_\_\_

6)



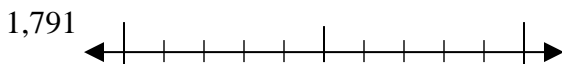
6. \_\_\_\_\_

7)



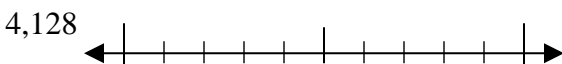
7. \_\_\_\_\_

8)



8. \_\_\_\_\_

9)

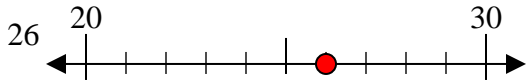


9. \_\_\_\_\_



Use the numberlines to round each number to the nearest 10.

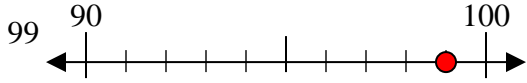
Ex)



Answers

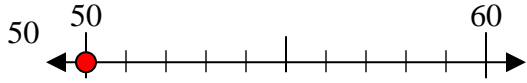
Ex. 30

1)



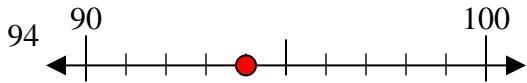
1. 100

2)



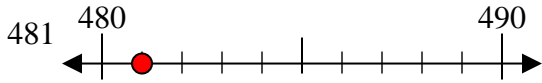
2. 50

3)



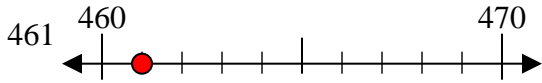
3. 90

4)



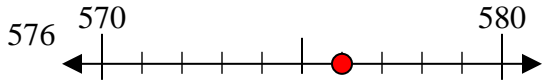
4. 480

5)



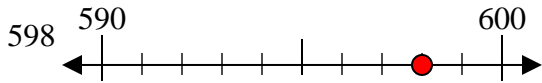
5. 460

6)



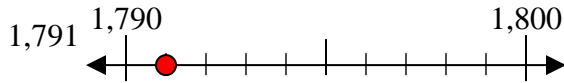
6. 580

7)



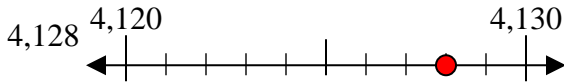
7. 600

8)



8. 1790

9)



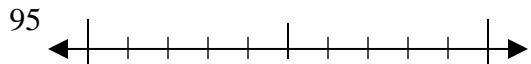
9. 4130



Use the numberlines to round each number to the nearest 10.

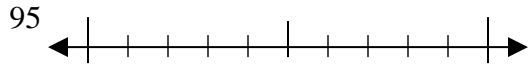
Answers

Ex)



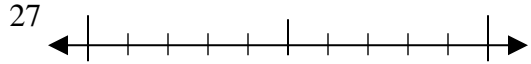
Ex. 100

1)



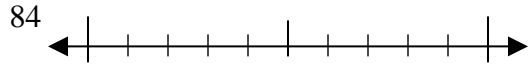
1. \_\_\_\_\_

2)



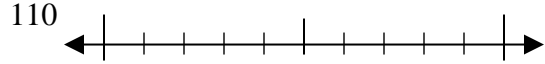
2. \_\_\_\_\_

3)



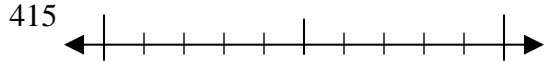
3. \_\_\_\_\_

4)



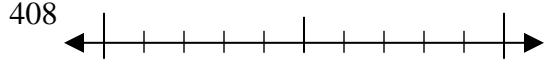
4. \_\_\_\_\_

5)



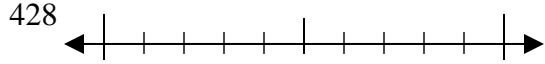
5. \_\_\_\_\_

6)



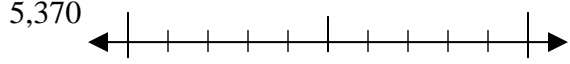
6. \_\_\_\_\_

7)



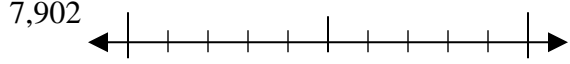
7. \_\_\_\_\_

8)



8. \_\_\_\_\_

9)

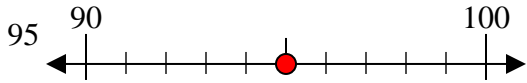


9. \_\_\_\_\_

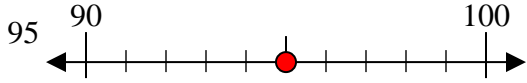


Use the numberlines to round each number to the nearest 10.

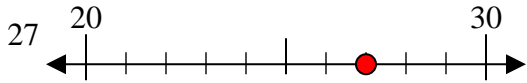
Ex)



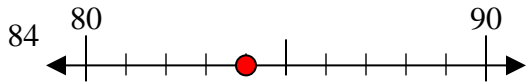
1)



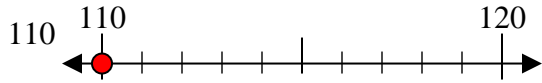
2)



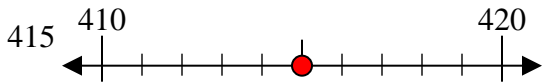
3)



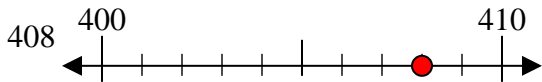
4)



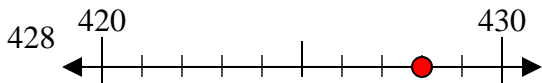
5)



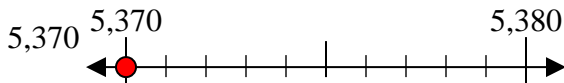
6)



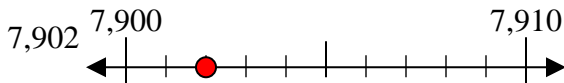
7)



8)



9)



Answers

Ex. 100

1. 100

2. 30

3. 80

4. 110

5. 420

6. 410

7. 430

8. 5370

9. 7900