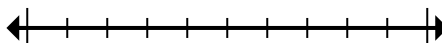




Mark the location (approximate) on the numberline and then solve.

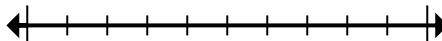
**Answers**

- 1) Round 1,491 to the nearest thousand.



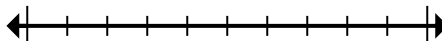
1. \_\_\_\_\_

- 2) Round 867,315 to the nearest hundred.



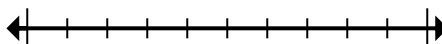
2. \_\_\_\_\_

- 3) Round 524 to the nearest hundred.



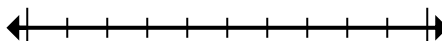
3. \_\_\_\_\_

- 4) Round 698 to the nearest hundred.



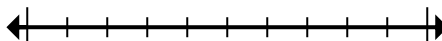
4. \_\_\_\_\_

- 5) Round 4,646,919 to the nearest hundred.



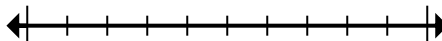
5. \_\_\_\_\_

- 6) Round 6,630,803 to the nearest thousand.



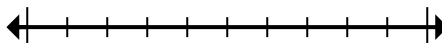
6. \_\_\_\_\_

- 7) Round 4,407,993 to the nearest hundred thousand.



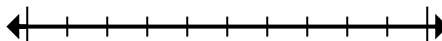
7. \_\_\_\_\_

- 8) Round 83,368 to the nearest ten thousand.



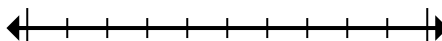
8. \_\_\_\_\_

- 9) Round 5,665,526 to the nearest ten thousand.



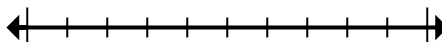
9. \_\_\_\_\_

- 10) Round 1,299 to the nearest thousand.



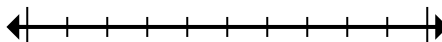
10. \_\_\_\_\_

- 11) Round 448,098 to the nearest hundred thousand.



11. \_\_\_\_\_

- 12) Round 178,876 to the nearest ten thousand.



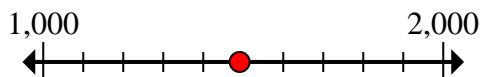
12. \_\_\_\_\_



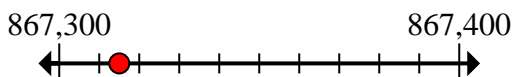
Mark the location (approximate) on the numberline and then solve.

**Answers**

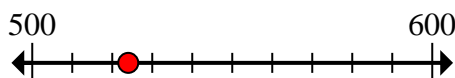
- 1) Round 1,491 to the nearest thousand.

1. **1,000**

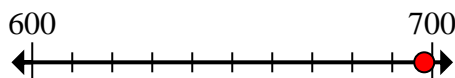
- 2) Round 867,315 to the nearest hundred.

2. **867,300**

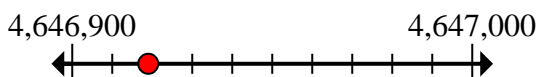
- 3) Round 524 to the nearest hundred.

3. **500**

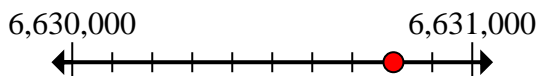
- 4) Round 698 to the nearest hundred.

4. **700**

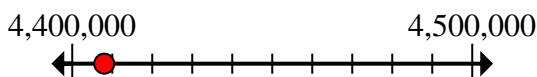
- 5) Round 4,646,919 to the nearest hundred.

5. **4,646,900**

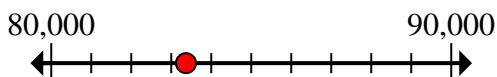
- 6) Round 6,630,803 to the nearest thousand.

6. **6,631,000**

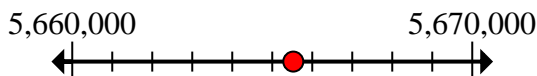
- 7) Round 4,407,993 to the nearest hundred thousand.

7. **4,400,000**

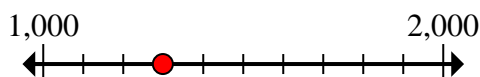
- 8) Round 83,368 to the nearest ten thousand.

8. **80,000**

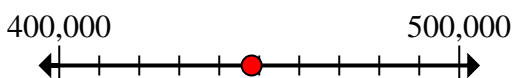
- 9) Round 5,665,526 to the nearest ten thousand.

9. **5,670,000**

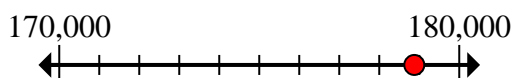
- 10) Round 1,299 to the nearest thousand.

10. **1,000**

- 11) Round 448,098 to the nearest hundred thousand.

11. **400,000**

- 12) Round 178,876 to the nearest ten thousand.

12. **180,000**



Mark the location (approximate) on the numberline and then solve.

**Answers**

867,300

500

4,400,000

80,000

1,000

4,646,900

700

400,000

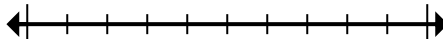
180,000

1,000

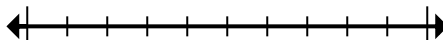
5,670,000

6,631,000

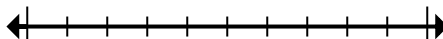
- 1) Round 1,491 to the nearest thousand.



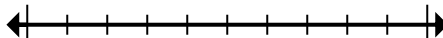
- 2) Round 867,315 to the nearest hundred.



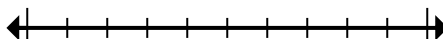
- 3) Round 524 to the nearest hundred.



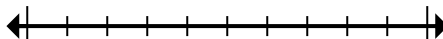
- 4) Round 698 to the nearest hundred.



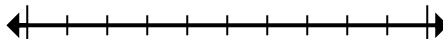
- 5) Round 4,646,919 to the nearest hundred.



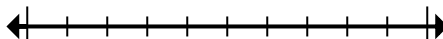
- 6) Round 6,630,803 to the nearest thousand.



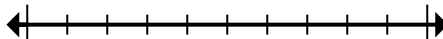
- 7) Round 4,407,993 to the nearest hundred thousand.



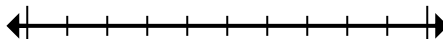
- 8) Round 83,368 to the nearest ten thousand.



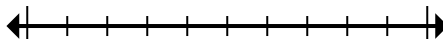
- 9) Round 5,665,526 to the nearest ten thousand.



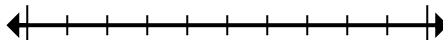
- 10) Round 1,299 to the nearest thousand.



- 11) Round 448,098 to the nearest hundred thousand.



- 12) Round 178,876 to the nearest ten thousand.



1. \_\_\_\_\_  
2. \_\_\_\_\_  
3. \_\_\_\_\_  
4. \_\_\_\_\_  
5. \_\_\_\_\_  
6. \_\_\_\_\_  
7. \_\_\_\_\_  
8. \_\_\_\_\_  
9. \_\_\_\_\_  
10. \_\_\_\_\_  
11. \_\_\_\_\_  
12. \_\_\_\_\_