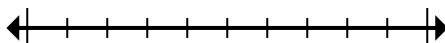




Mark the location (approximate) on the numberline and then solve.

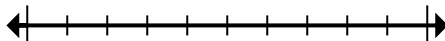
**Answers**

- 1) Round 45,381,768 to the nearest hundred thousand.



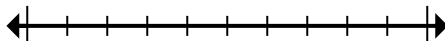
1. \_\_\_\_\_

- 2) Round 79,869 to the nearest ten thousand.



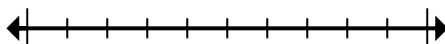
2. \_\_\_\_\_

- 3) Round 101,525 to the nearest ten thousand.



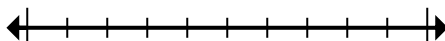
3. \_\_\_\_\_

- 4) Round 37,018 to the nearest thousand.



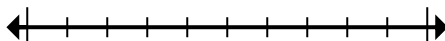
4. \_\_\_\_\_

- 5) Round 4,376 to the nearest thousand.



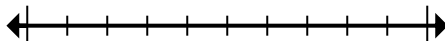
5. \_\_\_\_\_

- 6) Round 360,946 to the nearest thousand.



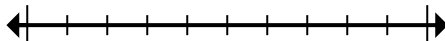
6. \_\_\_\_\_

- 7) Round 9,545,950 to the nearest hundred.



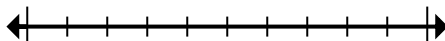
7. \_\_\_\_\_

- 8) Round 49,898,085 to the nearest hundred thousand.



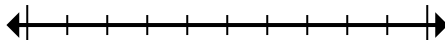
8. \_\_\_\_\_

- 9) Round 1,552 to the nearest thousand.



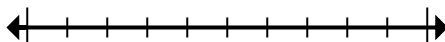
9. \_\_\_\_\_

- 10) Round 57,392 to the nearest ten thousand.



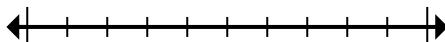
10. \_\_\_\_\_

- 11) Round 544,862 to the nearest hundred thousand.



11. \_\_\_\_\_

- 12) Round 3,268,593 to the nearest hundred.

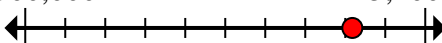
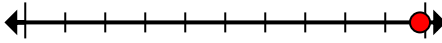
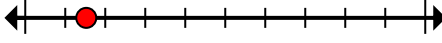
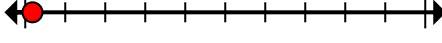
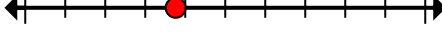









12. \_\_\_\_\_



Mark the location (approximate) on the numberline and then solve.

**Answers**

- 1) Round 45,381,768 to the nearest hundred thousand.
- 45,300,000  45,400,000
- 2) Round 79,869 to the nearest ten thousand.
- 70,000  80,000
- 3) Round 101,525 to the nearest ten thousand.
- 100,000  110,000
- 4) Round 37,018 to the nearest thousand.
- 37,000  38,000
- 5) Round 4,376 to the nearest thousand.
- 4,000  5,000
- 6) Round 360,946 to the nearest thousand.
- 360,000  361,000
- 7) Round 9,545,950 to the nearest hundred.
- 9,545,900  9,546,000
- 8) Round 49,898,085 to the nearest hundred thousand.
- 49,800,000  49,900,000
- 9) Round 1,552 to the nearest thousand.
- 1,000  2,000
- 10) Round 57,392 to the nearest ten thousand.
- 50,000  60,000
- 11) Round 544,862 to the nearest hundred thousand.
- 500,000  600,000
- 12) Round 3,268,593 to the nearest hundred.
- 3,268,500  3,268,600

1. **45,400,000**
2. **80,000**
3. **100,000**
4. **37,000**
5. **4,000**
6. **361,000**
7. **9,546,000**
8. **49,900,000**
9. **2,000**
10. **60,000**
11. **500,000**
12. **3,268,600**



Mark the location (approximate) on the numberline and then solve.

**Answers**

60,000

4,000

3,268,600

2,000

49,900,000

9,546,000

361,000

45,400,000

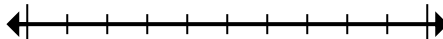
37,000

500,000

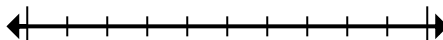
100,000

80,000

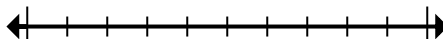
- 1) Round 45,381,768 to the nearest hundred thousand.



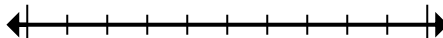
- 2) Round 79,869 to the nearest ten thousand.



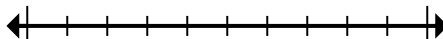
- 3) Round 101,525 to the nearest ten thousand.



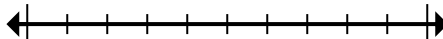
- 4) Round 37,018 to the nearest thousand.



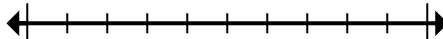
- 5) Round 4,376 to the nearest thousand.



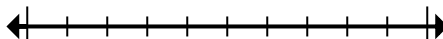
- 6) Round 360,946 to the nearest thousand.



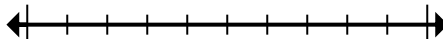
- 7) Round 9,545,950 to the nearest hundred.



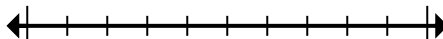
- 8) Round 49,898,085 to the nearest hundred thousand.



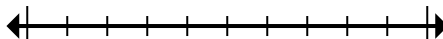
- 9) Round 1,552 to the nearest thousand.



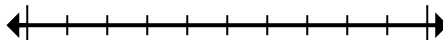
- 10) Round 57,392 to the nearest ten thousand.



- 11) Round 544,862 to the nearest hundred thousand.



- 12) Round 3,268,593 to the nearest hundred.



1. \_\_\_\_\_  
2. \_\_\_\_\_  
3. \_\_\_\_\_  
4. \_\_\_\_\_  
5. \_\_\_\_\_  
6. \_\_\_\_\_  
7. \_\_\_\_\_  
8. \_\_\_\_\_  
9. \_\_\_\_\_  
10. \_\_\_\_\_  
11. \_\_\_\_\_  
12. \_\_\_\_\_