



Use the numberlines to round each number to the nearest 100.

Ex)

4,410



Ex. 4,400

1)

853



1. _____

2)

783



2. _____

3)

9,697



3. _____

4)

8,980



4. _____

5)

569



5. _____

6)

9,924



6. _____

7)

99,310



7. _____

8)

90,005



8. _____

9)

17,192



9. _____

10)

60,453



10. _____

Answers

Ex. 4,400

1. _____

2. _____

3. _____

4. _____

5. _____

6. _____

7. _____

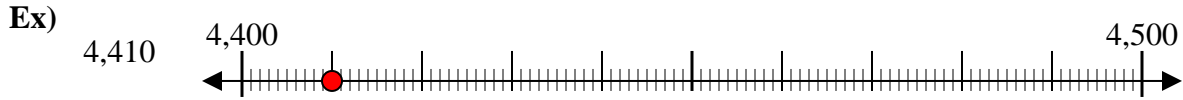
8. _____

9. _____

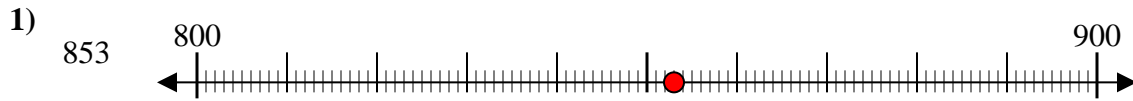
10. _____



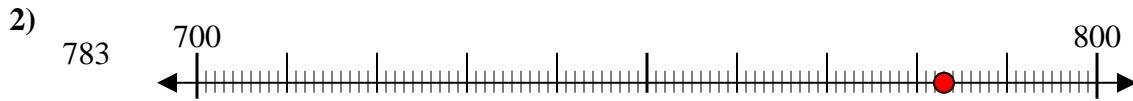
Use the numberlines to round each number to the nearest 100.



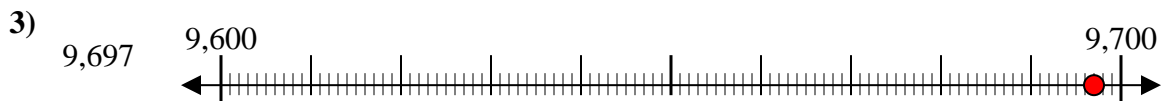
Answers
Ex. 4,400



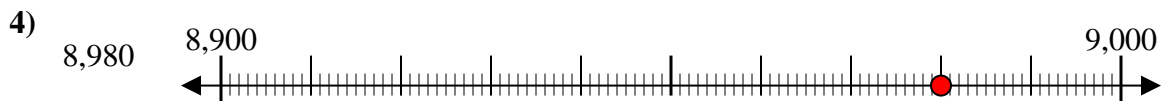
1. 900



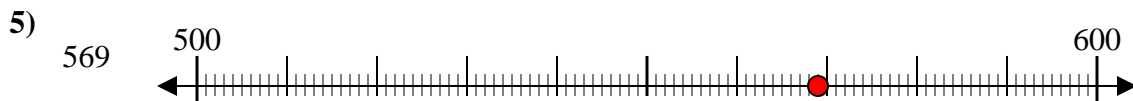
2. 800



3. 9,700



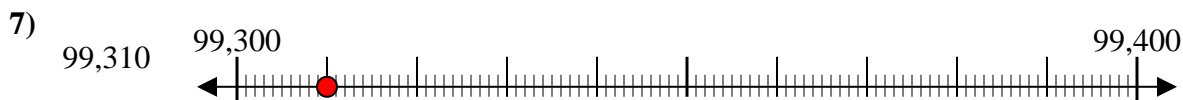
4. 9,000



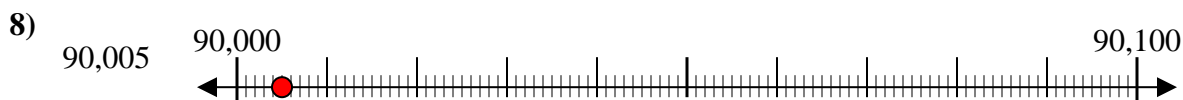
5. 600



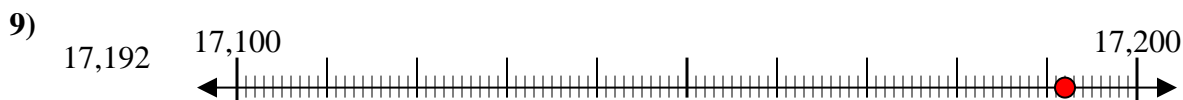
6. 9,900



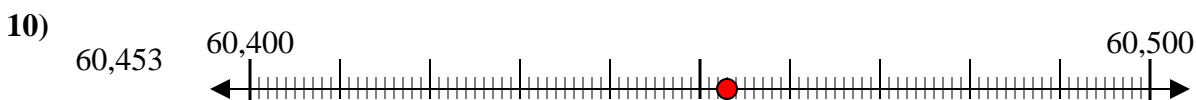
7. 99,300



8. 90,000



9. 17,200



10. 60,500