





Solve each problem.

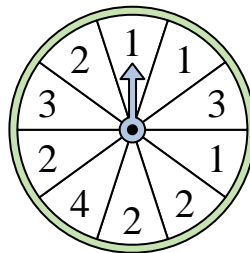
- 1) Which number is the spinner least likely to land on?



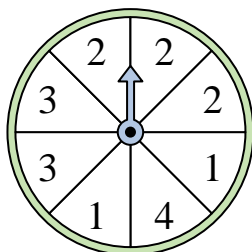
- 2) Which number is the spinner most likely to land on?



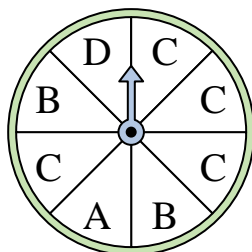
- 3) Which number is the spinner least likely to land on?



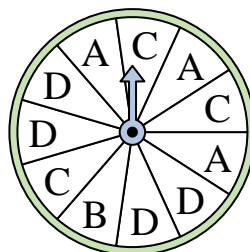
- 4) Which two numbers is the spinner equally likely to land on?



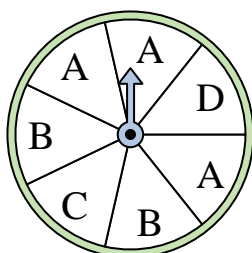
- 5) Which letter is the spinner most likely to land on?




- 6) Which letter is the spinner least likely to land on?



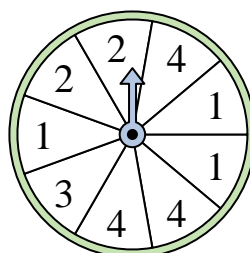
- 7) Which two letters is the spinner equally likely to land on?



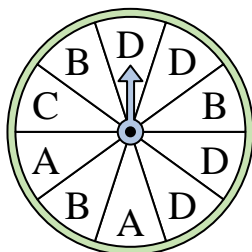
- 8) Which number is the spinner most likely to land on?



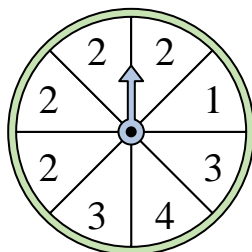
- 9) Which two numbers is the spinner equally likely to land on?



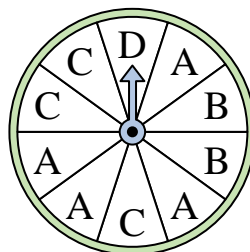
- 10) Which letter is the spinner least likely to land on?



- 11) Which number is the spinner most likely to land on?



- 12) Which letter is the spinner least likely to land on?




Answers

1. _____
2. _____
3. _____
4. _____
5. _____
6. _____
7. _____
8. _____
9. _____
10. _____
11. _____
12. _____




Solve each problem.

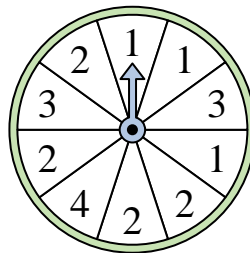
- 1) Which number is the spinner least likely to land on?



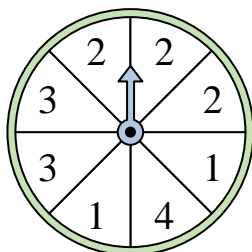
- 2) Which number is the spinner most likely to land on?



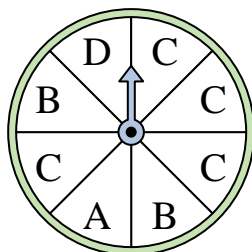
- 3) Which number is the spinner least likely to land on?



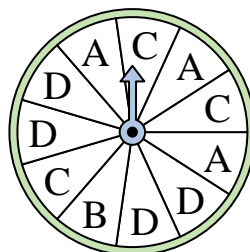
- 4) Which two numbers is the spinner equally likely to land on?



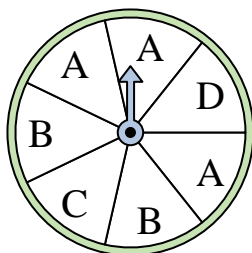
- 5) Which letter is the spinner most likely to land on?




- 6) Which letter is the spinner least likely to land on?




- 7) Which two letters is the spinner equally likely to land on?



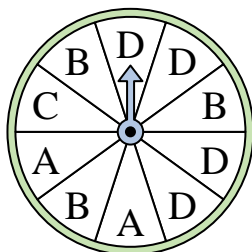
- 8) Which number is the spinner most likely to land on?



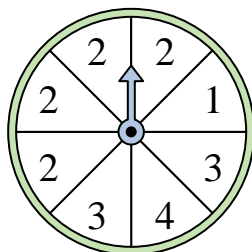
- 9) Which two numbers is the spinner equally likely to land on?



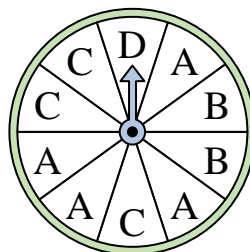
- 10) Which letter is the spinner least likely to land on?



- 11) Which number is the spinner most likely to land on?



- 12) Which letter is the spinner least likely to land on?



Answers

1. 2
2. 2
3. 4
4. 1 & 3
5. C
6. B
7. C & D
8. 3
9. 1 & 4
10. C
11. 2
12. D