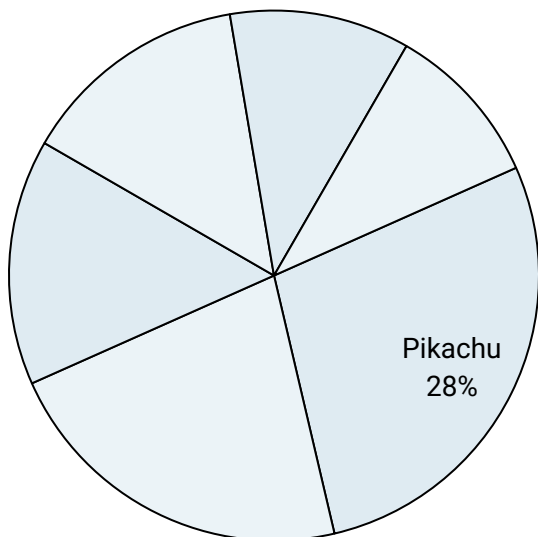




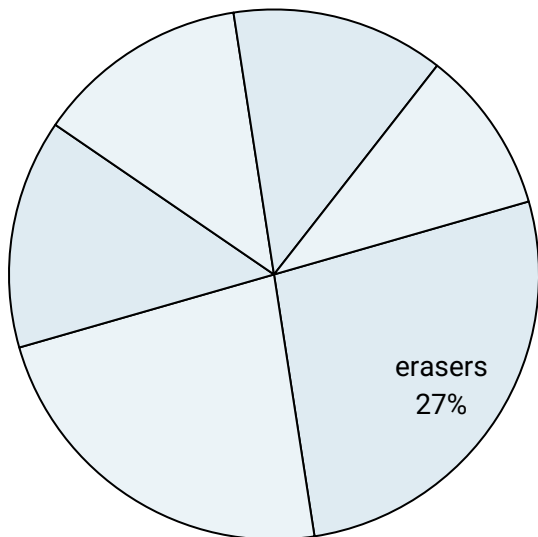
Use the graph to solve.

Favorite Game Character



- 1) What percent of people said either Link or Pikachu was their favorite?
- 2) Which two characters did about half the people say was their favorite?
- 3) Which character was the least popular?
- 4) What percent of people said Samus was their favorite?
- 5) Which character was the most popular?

School Store Sales



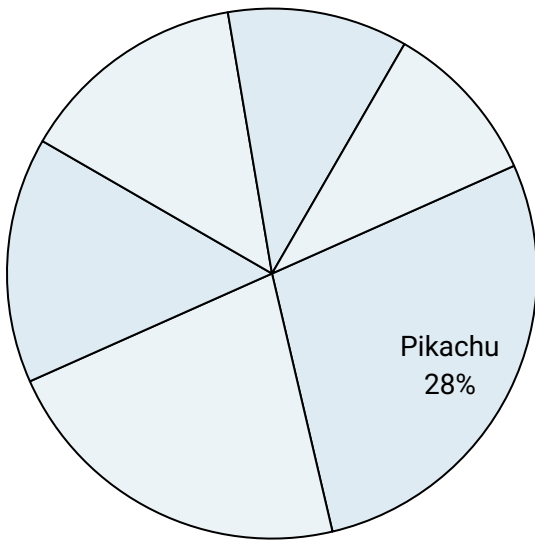
- 6) What percent of the sales were erasers?
- 7) Which product sold the best?
- 8) Which product sold the worst?
- 9) Which two products accounted for about half the sales?
- 10) What is the combined amount of pencils and rulers sold?

Answers

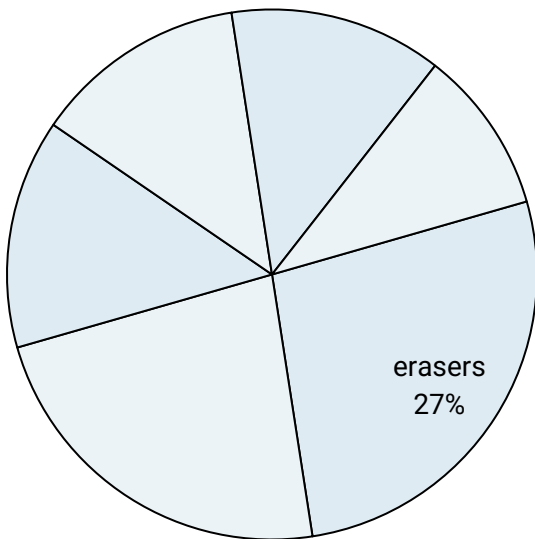
1. _____
2. _____
3. _____
4. _____
5. _____
6. _____
7. _____
8. _____
9. _____
10. _____



Use the graph to solve.

Favorite Game Character

- 1) What percent of people said either Link or Pikachu was their favorite?
- 2) Which two characters did about half the people say was their favorite?
- 3) Which character was the least popular?
- 4) What percent of people said Samus was their favorite?
- 5) Which character was the most popular?

School Store Sales

- 6) What percent of the sales were erasers?
- 7) Which product sold the best?
- 8) Which product sold the worst?
- 9) Which two products accounted for about half the sales?
- 10) What is the combined amount of pencils and rulers sold?

Answers

1. **42%**
2. **Pikachu & Mario**
3. **Samus**
4. **10%**
5. **Pikachu**
6. **27%**
7. **erasers**
8. **pens**
9. **erasers & pencils**
10. **36%**