


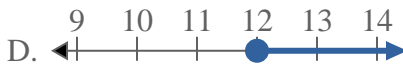
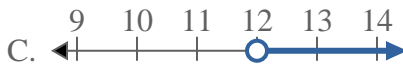


Solve each problem.

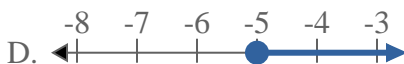
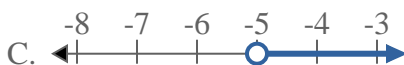
1) Which option best shows $X < 9$



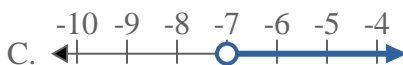
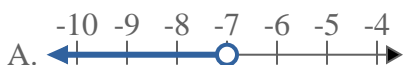
2) Which option best shows $X > 12$



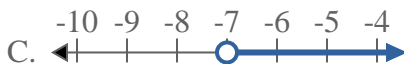
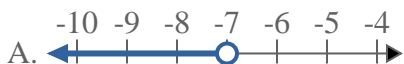
3) Which option best shows $X \geq -5$



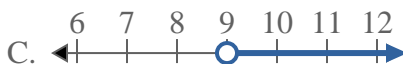
4) Which option best shows $X \leq -7$



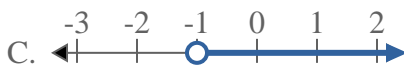
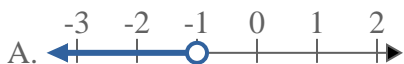
5) Which option best shows $X > -7$



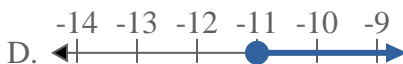
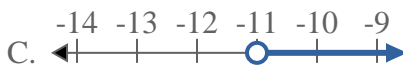
6) Which option best shows $X \geq 9$



7) Which option best shows $X > -1$



8) Which option best shows $X < -11$



Answers

1. _____

2. _____

3. _____

4. _____

5. _____

6. _____

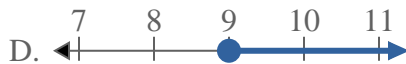
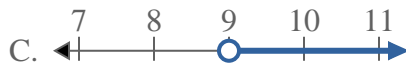
7. _____

8. _____

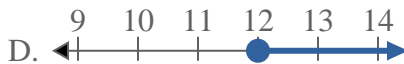
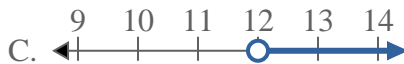


Solve each problem.

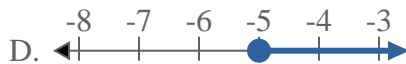
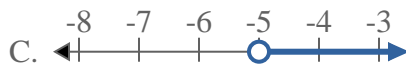
1) Which option best shows $X < 9$



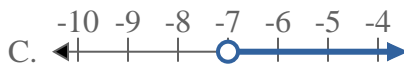
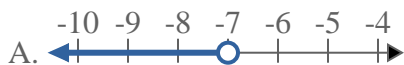
2) Which option best shows $X > 12$



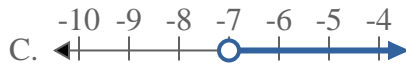
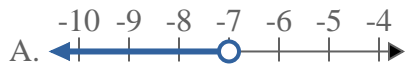
3) Which option best shows $X \geq -5$



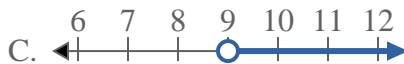
4) Which option best shows $X \leq -7$



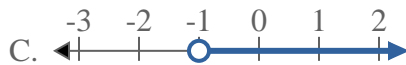
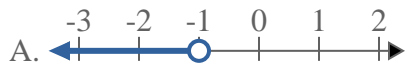
5) Which option best shows $X > -7$



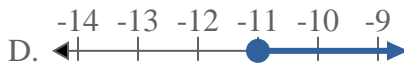
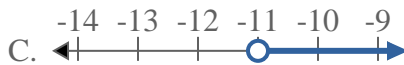
6) Which option best shows $X \geq 9$



7) Which option best shows $X > -1$



8) Which option best shows $X < -11$



Answers

1. **A**

2. **C**

3. **D**

4. **B**

5. **C**

6. **D**

7. **C**

8. **A**