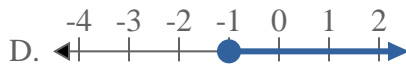
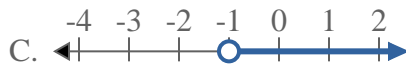
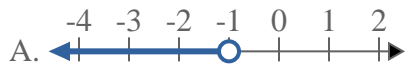




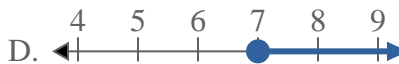
Solve each problem.

**Answers**

1) Which option best shows  $X \geq -1$



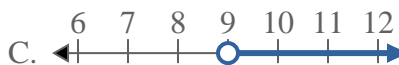
2) Which option best shows  $X \leq 7$



3) Which option best shows  $X > 14$



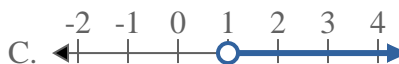
4) Which option best shows  $X > 9$



5) Which option best shows  $X < -14$



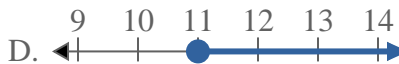
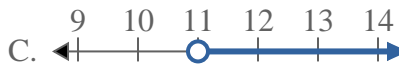
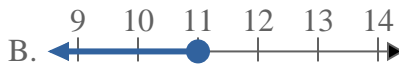
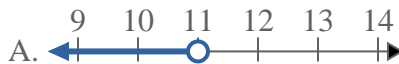
6) Which option best shows  $X \geq 1$



7) Which option best shows  $X \leq 16$



8) Which option best shows  $X \leq 11$

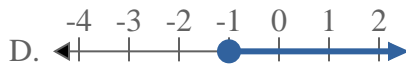
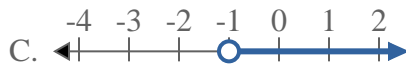
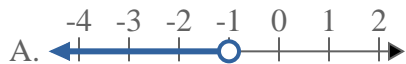


1. \_\_\_\_\_
2. \_\_\_\_\_
3. \_\_\_\_\_
4. \_\_\_\_\_
5. \_\_\_\_\_
6. \_\_\_\_\_
7. \_\_\_\_\_
8. \_\_\_\_\_

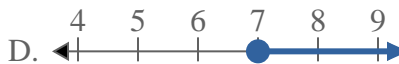
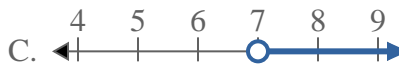


Solve each problem.


1) Which option best shows  $X \geq -1$



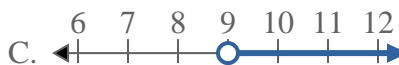
2) Which option best shows  $X \leq 7$



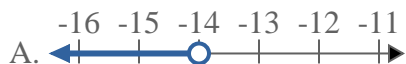
3) Which option best shows  $X > 14$



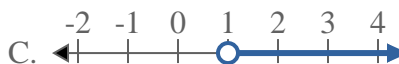
4) Which option best shows  $X > 9$



5) Which option best shows  $X < -14$



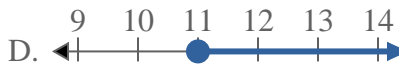
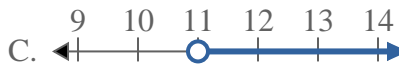
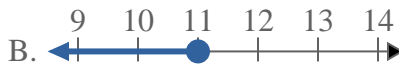
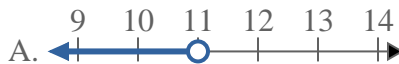
6) Which option best shows  $X \geq 1$



7) Which option best shows  $X \leq 16$



8) Which option best shows  $X \leq 11$



**Answers**

1. **D**

2. **B**

3. **C**

4. **C**

5. **A**

6. **D**

7. **B**

8. **B**