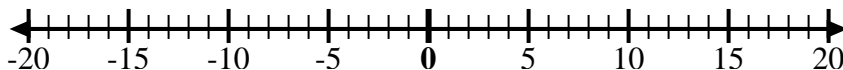




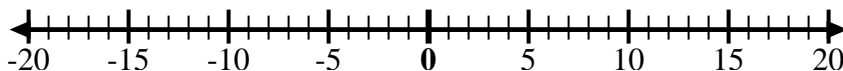
Use the numberlines to show each expression and solve.

Ex) Start at 7 and add -12



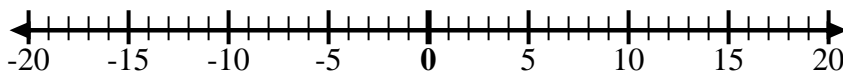
Ex.  $7 + -12 = -5$

1) Start at -2 and add 5



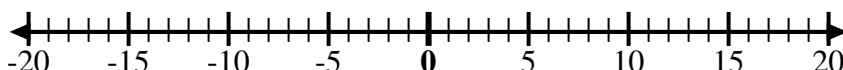
1. \_\_\_\_\_

2) Start at 8 and add -13



2. \_\_\_\_\_

3) Start at -7 and add -2



3. \_\_\_\_\_

4) Start at -4 and add -3



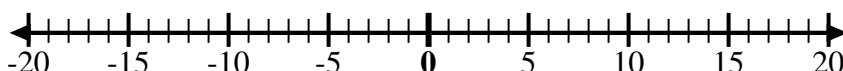
4. \_\_\_\_\_

5) Start at -3 and add -2



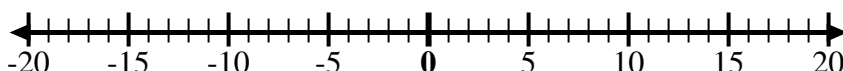
5. \_\_\_\_\_

6) Start at -7 and add 5



6. \_\_\_\_\_

7) Start at -6 and add -2



7. \_\_\_\_\_

8) Start at 1 and add -11



8. \_\_\_\_\_

9) Start at -7 and add 8



9. \_\_\_\_\_

10) Start at 1 and add -9



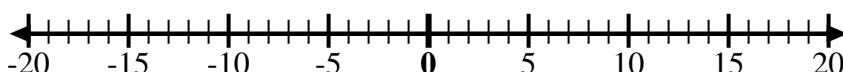
10. \_\_\_\_\_

11) Start at -3 and add -3



11. \_\_\_\_\_

12) Start at 2 and add -11



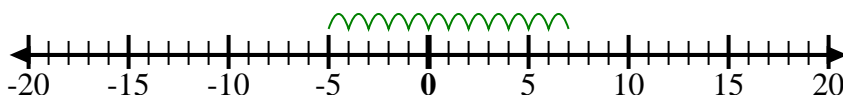
12. \_\_\_\_\_

Answers



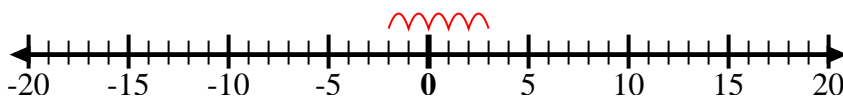
Use the numberlines to show each expression and solve.

Ex) Start at 7 and add -12



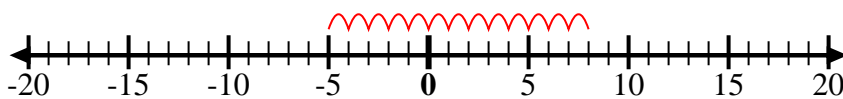
Ex.  $7 + -12 = -5$

1) Start at -2 and add 5



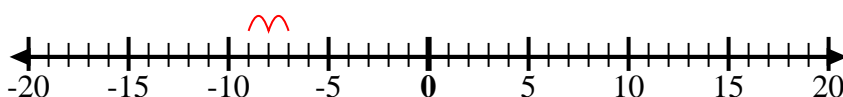
1.  $-2 + 5 = 3$

2) Start at 8 and add -13



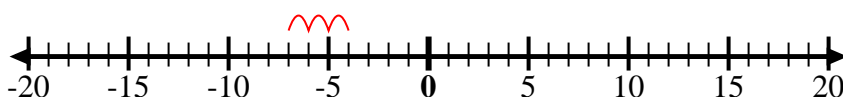
2.  $8 + -13 = -5$

3) Start at -7 and add -2



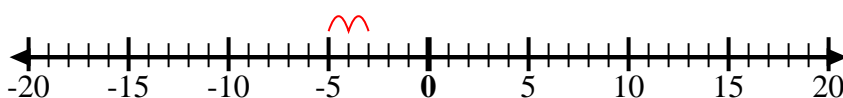
3.  $-7 + -2 = -9$

4) Start at -4 and add -3



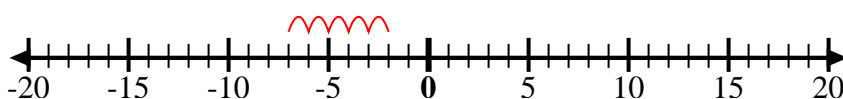
4.  $-4 + -3 = -7$

5) Start at -3 and add -2



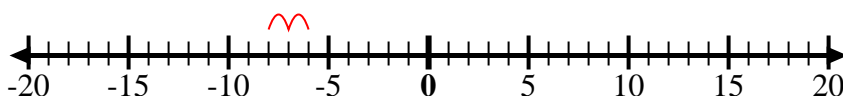
5.  $-3 + -2 = -5$

6) Start at -7 and add 5



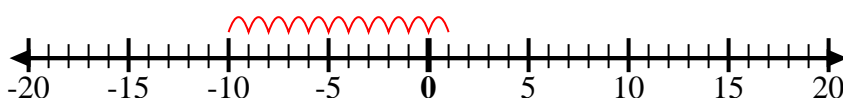
6.  $-7 + 5 = -2$

7) Start at -6 and add -2



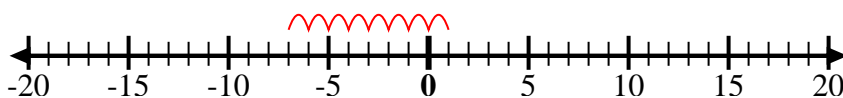
7.  $-6 + -2 = -8$

8) Start at 1 and add -11



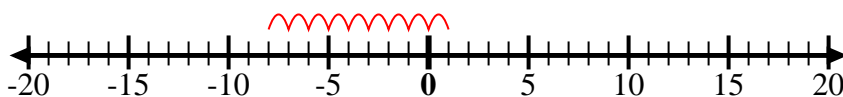
8.  $1 + -11 = -10$

9) Start at -7 and add 8



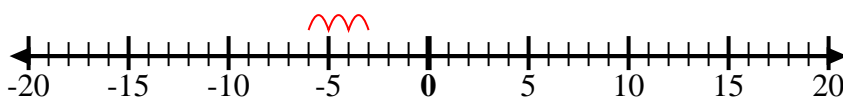
9.  $-7 + 8 = 1$

10) Start at 1 and add -9



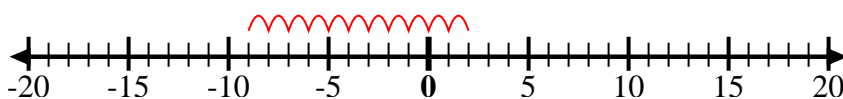
10.  $1 + -9 = -8$

11) Start at -3 and add -3



11.  $-3 + -3 = -6$

12) Start at 2 and add -11



12.  $2 + -11 = -9$

Answers