




Solve each problem.


Answers

1) Which letter best shows -106?




1. _____

2) Which letter best shows -80?




2. _____

3) Which letter best shows -10?



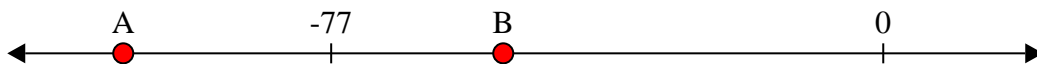
3. _____

4) Which letter best shows -117?



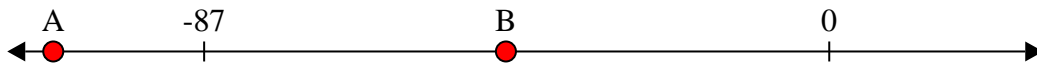
4. _____

5) Which letter best shows -53?



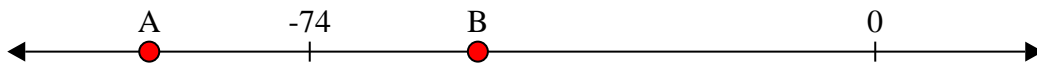
5. _____

6) Which letter best shows -45?




6. _____

7) Which letter best shows -52?




7. _____

8) Which letter best shows -77?




8. _____

9) Which letter best shows -37?



9. _____

10) Which letter best shows -30?




10. _____

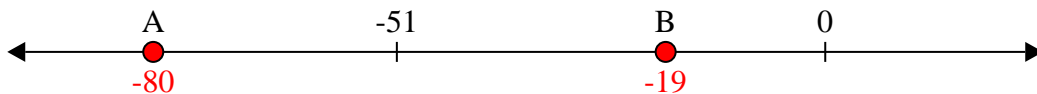


Solve each problem.

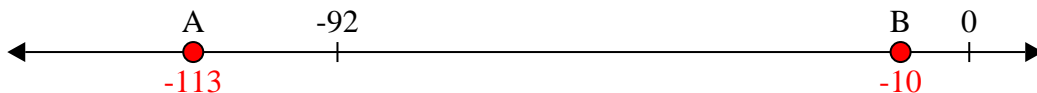
1) Which letter best shows -106?



2) Which letter best shows -80?



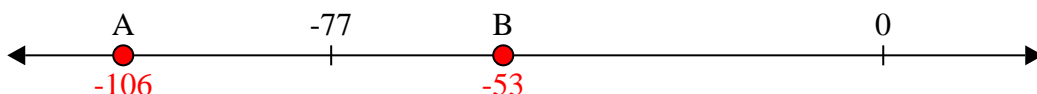
3) Which letter best shows -10?



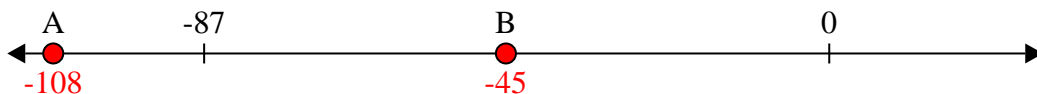
4) Which letter best shows -117?



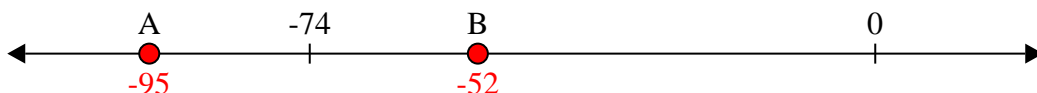
5) Which letter best shows -53?




6) Which letter best shows -45?




7) Which letter best shows -52?



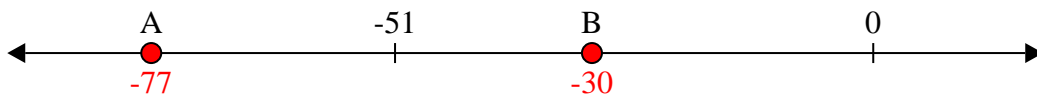
8) Which letter best shows -77?



9) Which letter best shows -37?



10) Which letter best shows -30?



Answers

1. **A**

2. **A**

3. **B**

4. **A**

5. **B**

6. **B**

7. **B**

8. **A**

9. **B**

10. **B**