




Solve each problem.


Answers

1) Which letter best shows -92?




1. _____

2) Which letter best shows -105?




2. _____

3) Which letter best shows -99?




3. _____

4) Which letter best shows -89?




4. _____

5) Which letter best shows -53?




5. _____

6) Which letter best shows -17?




6. _____

7) Which letter best shows -25?




7. _____

8) Which letter best shows -41?




8. _____

9) Which letter best shows -121?



9. _____

10) Which letter best shows -45?




10. _____

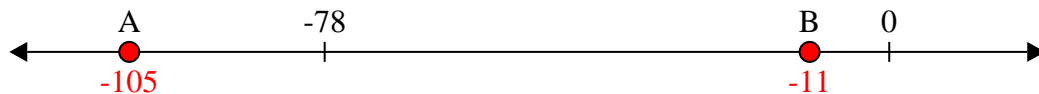


Solve each problem.

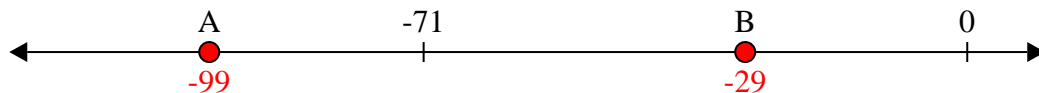
1) Which letter best shows -92?




2) Which letter best shows -105?




3) Which letter best shows -99?




4) Which letter best shows -89?




5) Which letter best shows -53?




6) Which letter best shows -17?




7) Which letter best shows -25?



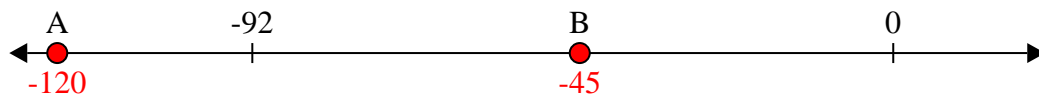
8) Which letter best shows -41?



9) Which letter best shows -121?



10) Which letter best shows -45?



Answers

1. **A**

2. **A**

3. **A**

4. **A**

5. **B**

6. **B**

7. **B**

8. **B**

9. **A**

10. **B**